




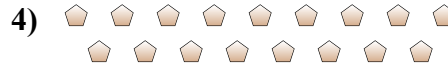
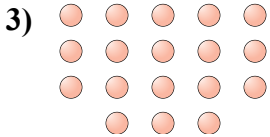
Определите, является ли число фигур четным или нечетным.

Ответы



1. _____

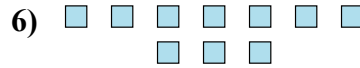
2. _____



3. _____

4. _____

5. _____



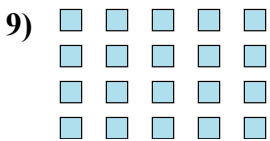
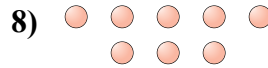
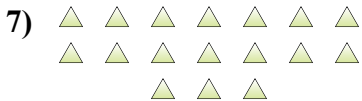
6. _____

7. _____

8. _____


9. _____

10. _____

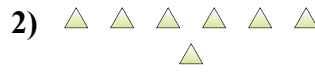




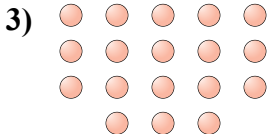
Определите, является ли число фигур четным или нечетным.



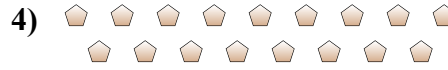
12



7



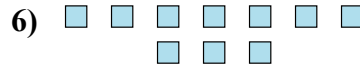
18



17



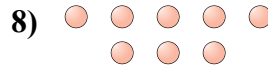
18



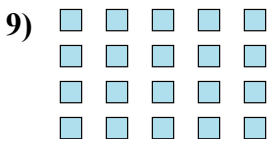
10



17



8



20



5

ОТВЕТЫ

1. Четное

2. Нечетное

3. Четное

4. Нечетное

5. Четное

6. Четное

7. Нечетное

8. Четное

9. Четное

10. Нечетное