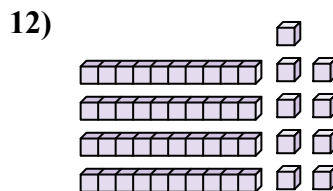
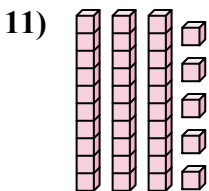
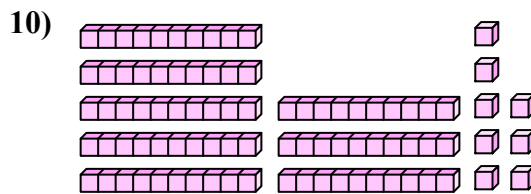
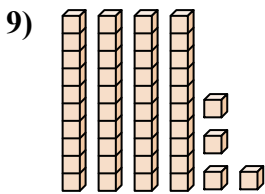
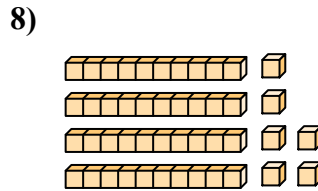
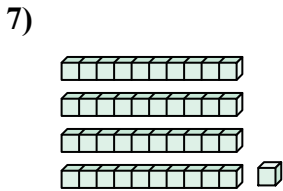
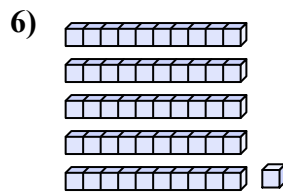
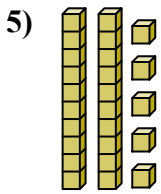
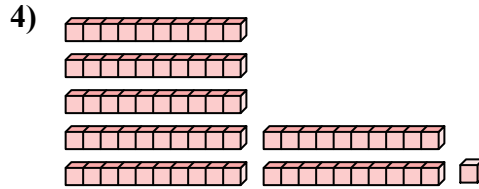
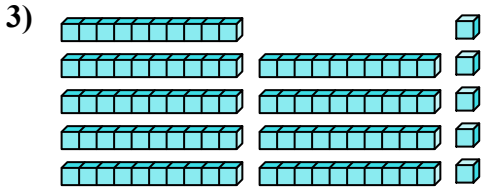
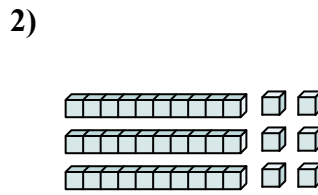
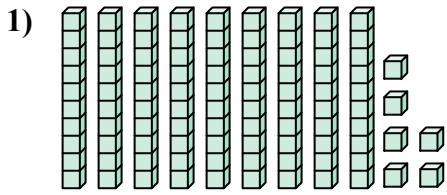




Подсчитайте общее число маленьких блоков.

ОТВЕТЫ



1. _____

2. _____

3. _____

4. _____

5. _____

6. _____

7. _____

8. _____

9. _____

10. _____

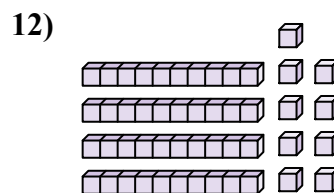
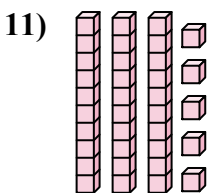
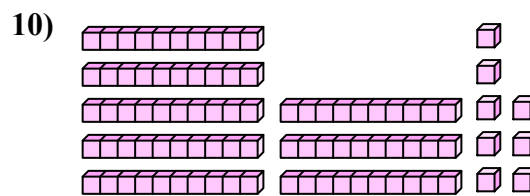
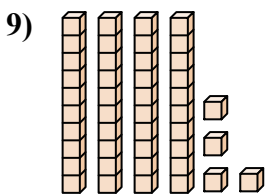
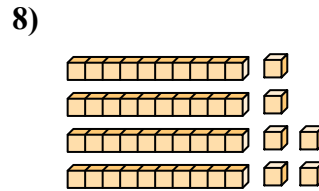
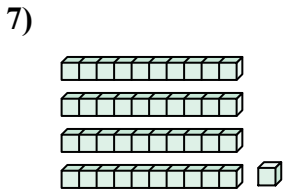
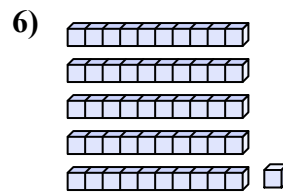
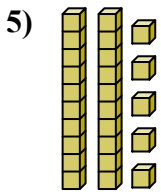
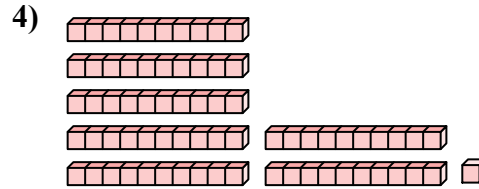
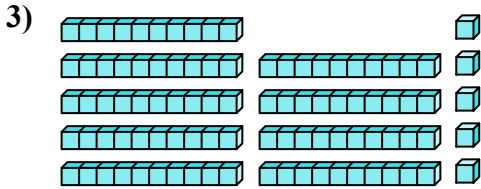
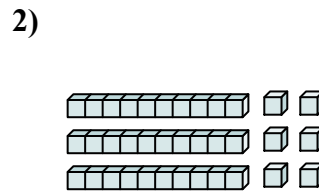
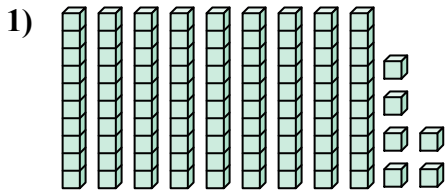
11. _____

12. _____



Подсчитайте общее число маленьких блоков.

Ответы



1. 96

2. 36

3. 95

4. 71

5. 25

6. 51

7. 41

8. 46

9. 44

10. 88

11. 35

12. 49



Подсчитайте общее число маленьких блоков.

88	25	36	44	46
41	51	96	71	95

Ответы

1. _____
2. _____
3. _____
4. _____
5. _____
6. _____
7. _____
8. _____
9. _____
10. _____

