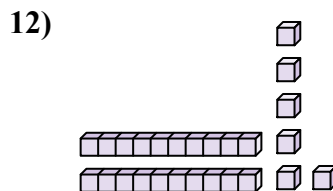
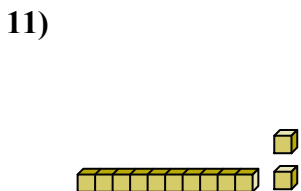
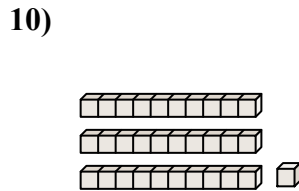
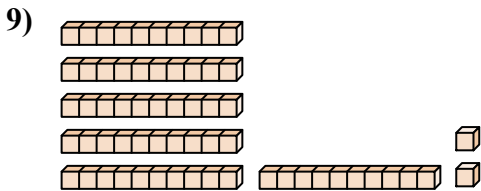
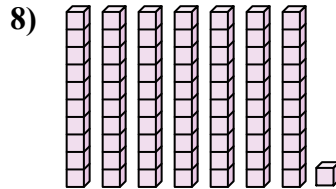
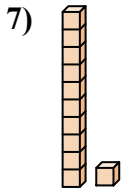
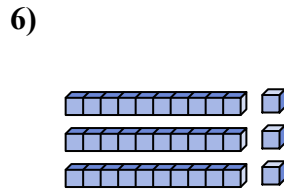
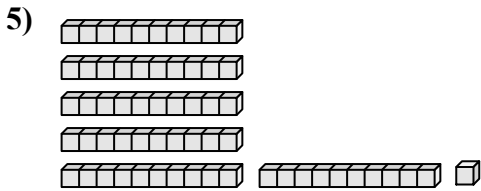
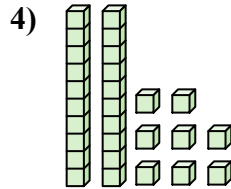
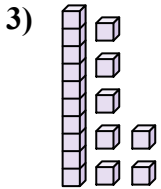
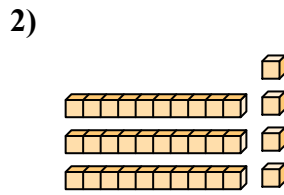
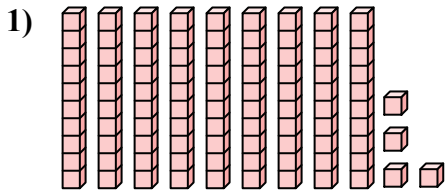




Подсчитайте общее число маленьких блоков.

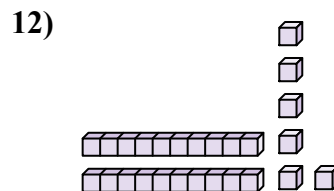
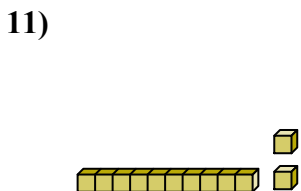
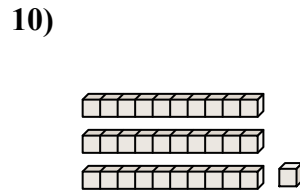
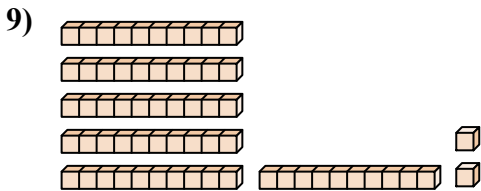
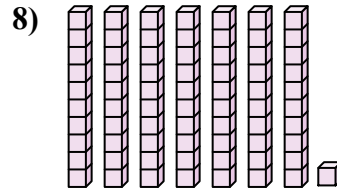
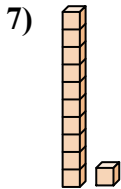
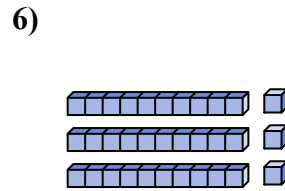
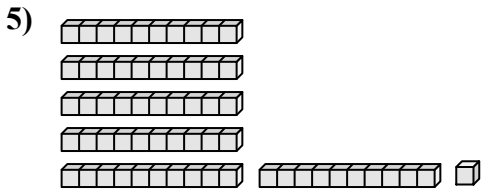
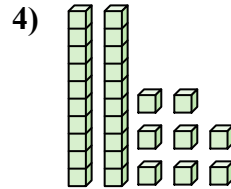
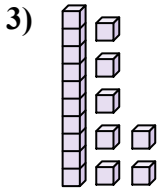
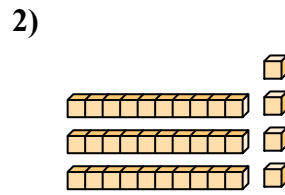
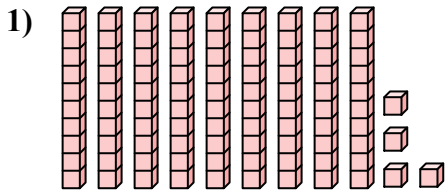
Ответы



1. \_\_\_\_\_
2. \_\_\_\_\_
3. \_\_\_\_\_
4. \_\_\_\_\_
5. \_\_\_\_\_
6. \_\_\_\_\_
7. \_\_\_\_\_
8. \_\_\_\_\_
9. \_\_\_\_\_
10. \_\_\_\_\_
11. \_\_\_\_\_
12. \_\_\_\_\_



Подсчитайте общее число маленьких блоков.



**ОТВЕТЫ**

1. 94

2. 34

3. 17

4. 28

5. 61

6. 33

7. 11

8. 71

9. 62

10. 31

11. 12

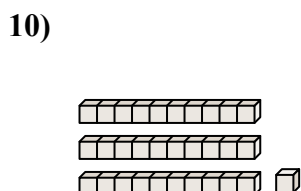
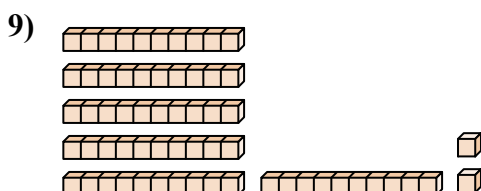
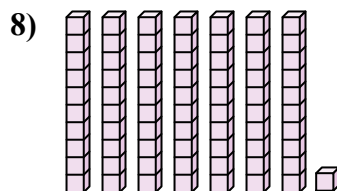
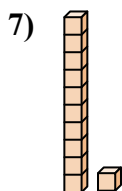
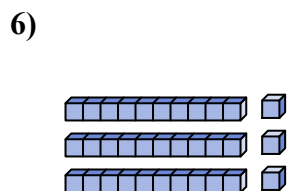
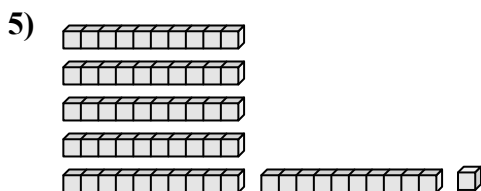
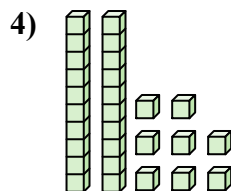
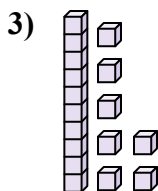
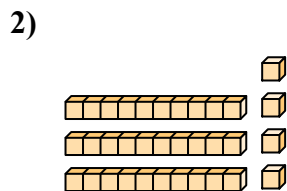
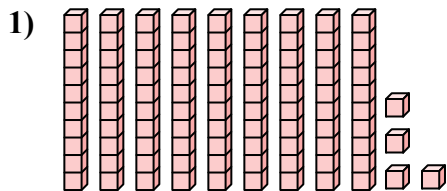
12. 26



Подсчитайте общее число маленьких блоков.

62	11	33	31	61
71	28	17	34	94

**Ответы**



1. \_\_\_\_\_
2. \_\_\_\_\_
3. \_\_\_\_\_
4. \_\_\_\_\_
5. \_\_\_\_\_
6. \_\_\_\_\_
7. \_\_\_\_\_
8. \_\_\_\_\_
9. \_\_\_\_\_
10. \_\_\_\_\_