





Решите каждую задачу.


1) $95\,881 - 16\,389 =$



2) $87\,033 - 42\,268 =$




3) $62\,956 - 38\,896 =$



4) $86\,654 - 73\,025 =$




5) $94\,168 - 87\,486 =$



6) $57\,090 - 46\,794 =$



7) $56\,647 - 54\,325 =$



Ответы

1. _____

2. _____

3. _____

4. _____

5. _____

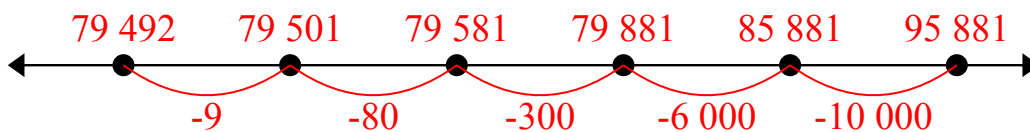
6. _____

7. _____

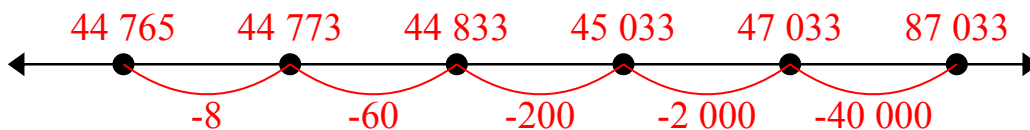


Решите каждую задачу.

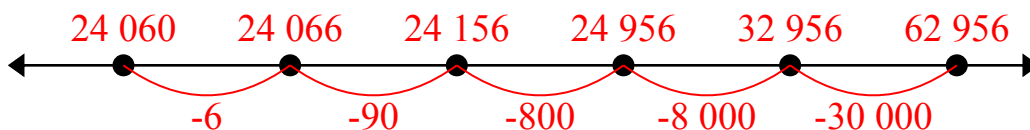
1) $95\ 881 - 16\ 389 =$



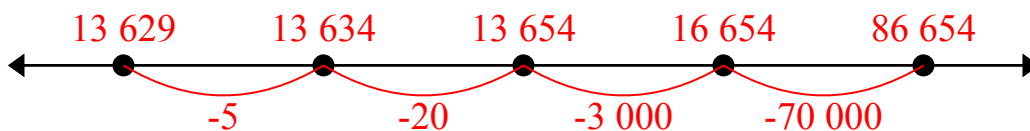
2) $87\ 033 - 42\ 268 =$



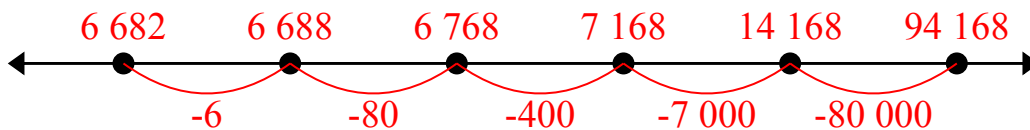
3) $62\ 956 - 38\ 896 =$



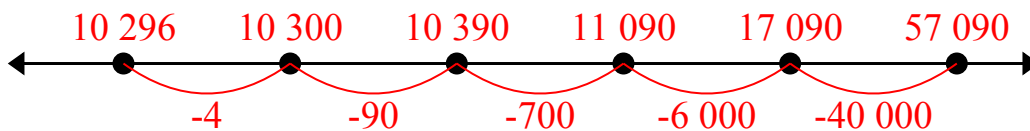
4) $86\ 654 - 73\ 025 =$



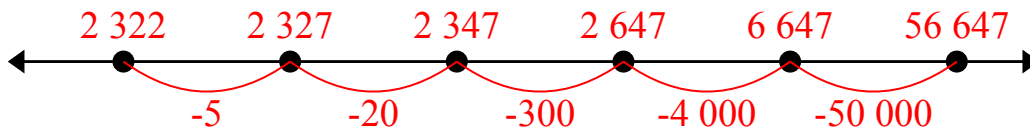
5) $94\ 168 - 87\ 486 =$



6) $57\ 090 - 46\ 794 =$



7) $56\ 647 - 54\ 325 =$



Ответы

1. 79 492

2. 44 765

3. 24 060

4. 13 629

5. 6 682

6. 10 296

7. 2 322



Решите каждую задачу.

24 060

2 322

44 765

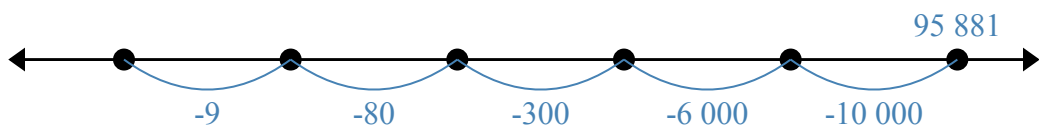
10 296

13 629

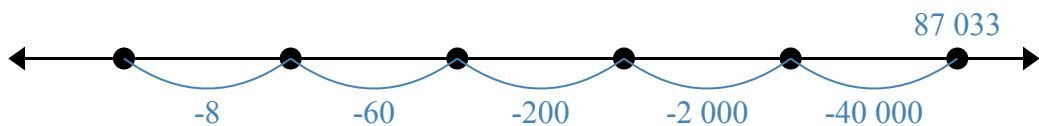
79 492

6 682

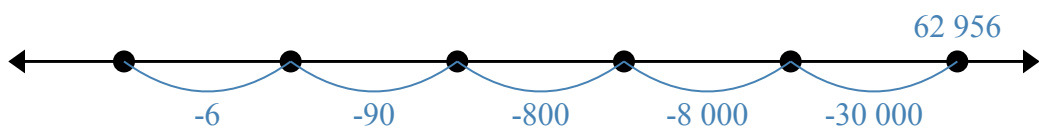
1) $95\,881 - 16\,389 =$



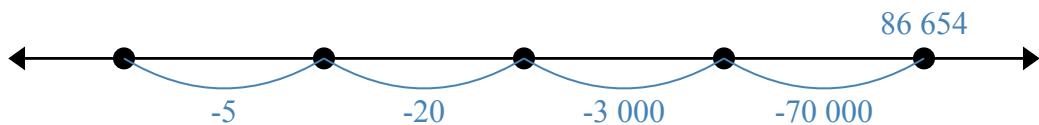
2) $87\,033 - 42\,268 =$



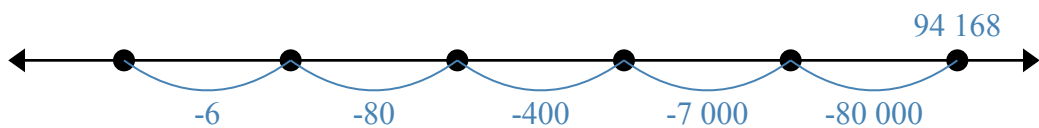
3) $62\,956 - 38\,896 =$



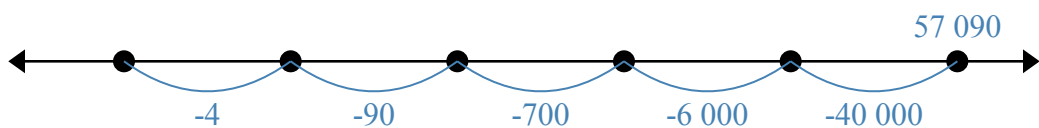
4) $86\,654 - 73\,025 =$



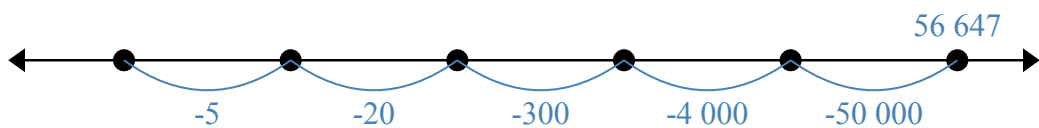
5) $94\,168 - 87\,486 =$



6) $57\,090 - 46\,794 =$



7) $56\,647 - 54\,325 =$



Ответы

1. _____
2. _____
3. _____
4. _____
5. _____
6. _____
7. _____