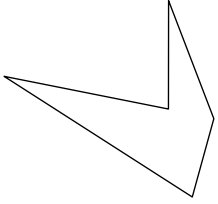




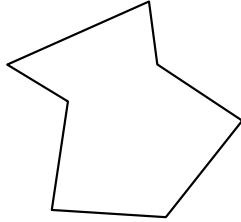
Определите тип данных фигур.

ОТВЕТЫ


1)



2)



3)

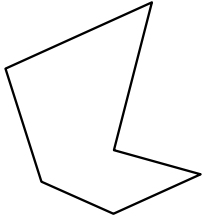


1. _____

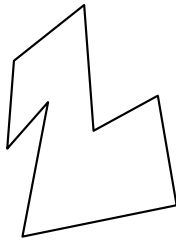
2. _____

3. _____

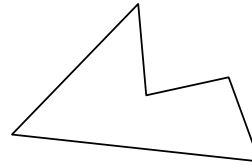
4)



5)



6)

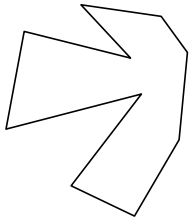


4. _____

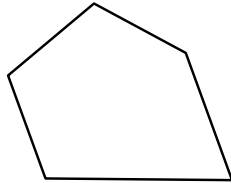
5. _____

6. _____

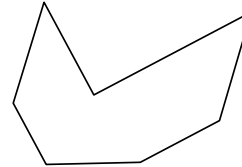
7)



8)



9)



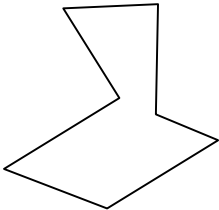
7. _____

8. _____


9. _____

10. _____

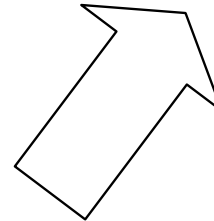
10)



11)



12)



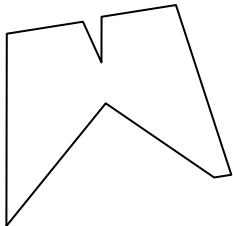
11. _____

12. _____

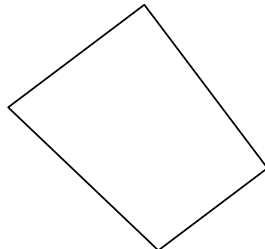
13. _____

14. _____

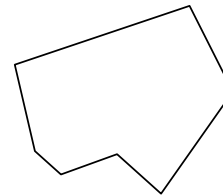
13)



14)



15)

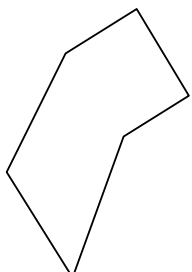


15. _____

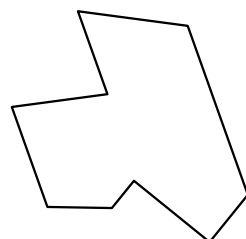
16. _____

17. _____


16)



17)



18)



18. _____

19. _____

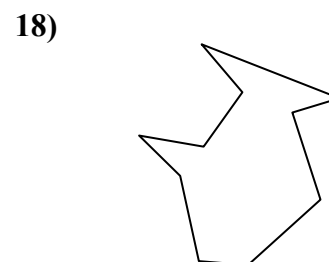
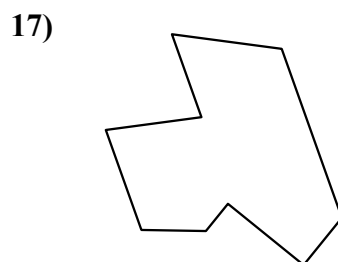
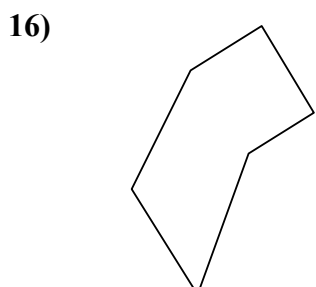
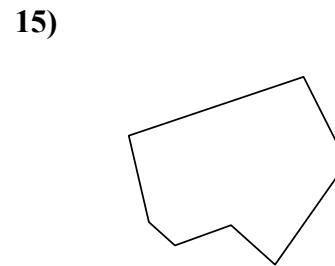
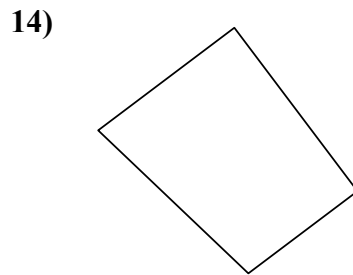
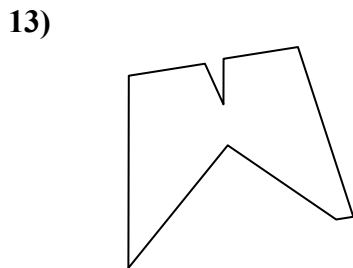
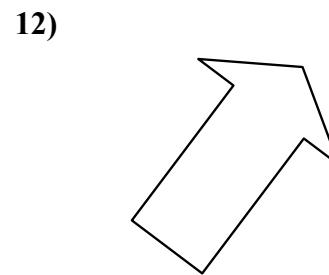
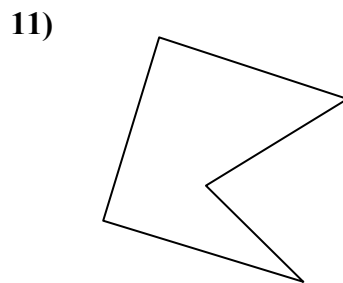
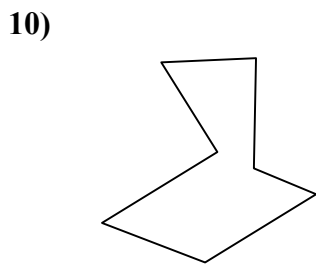

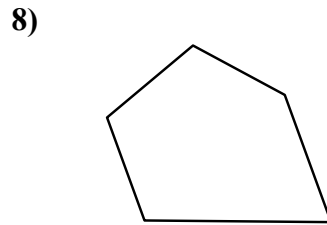
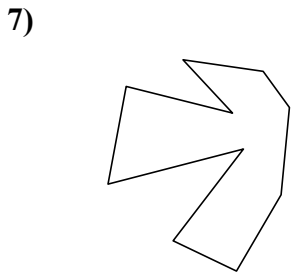
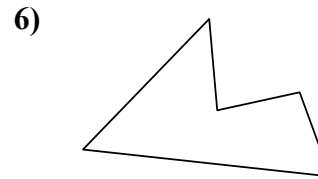
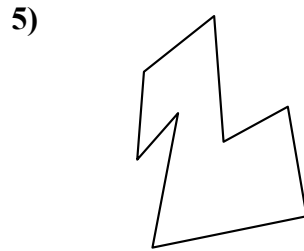
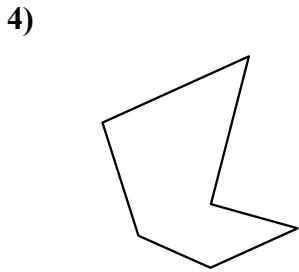
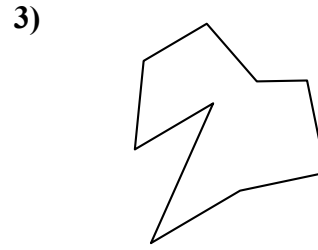
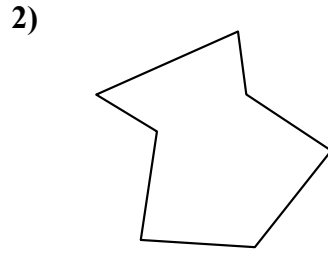
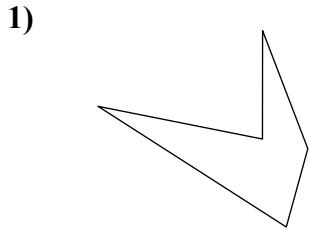
20. _____

21. _____



Определите тип данных фигур.

ОТВЕТЫ



1. пятиугольник

2. семиугольник

3. девятугольник

4. шестиугольник

5. восьмиугольник

6. пятиугольник

7. десятиугольник

8. пятиугольник

9. семиугольник

10. семиугольник

11. пятиугольник

12. семиугольник

13. девятугольник

14. четырёхугольник

15. семиугольник

16. шестиугольник

17. девятугольник

18. десятиугольник

19. девятугольник

20. шестиугольник

21. восьмиугольник