




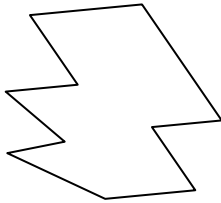
Определите тип данных фигур.

Ответы

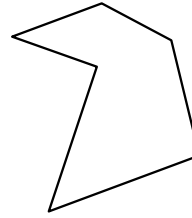
1)



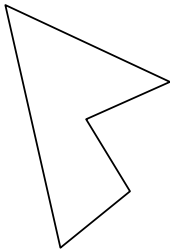
2)



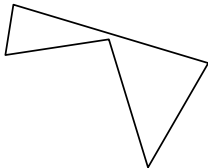
3)



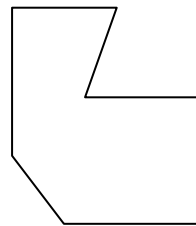
4)



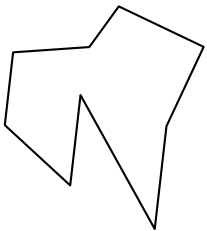
5)



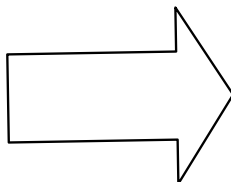
6)



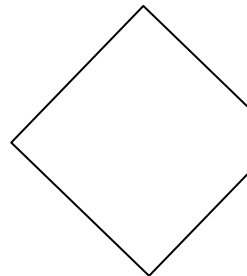
7)



8)



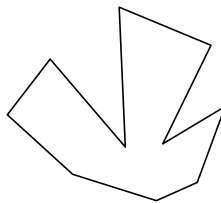
9)



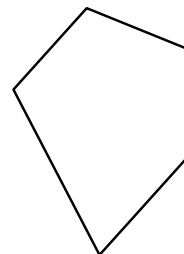
10)



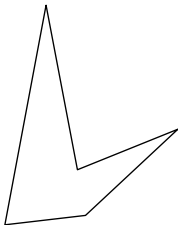
11)



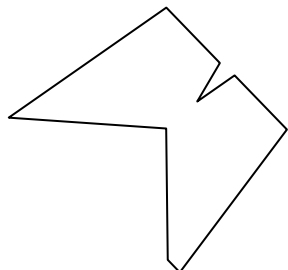
12)




13)



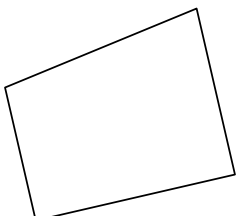
14)



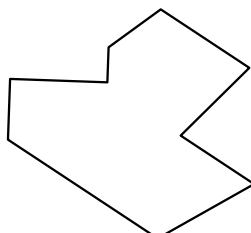
15)




16)



17)



18)



1. _____

2. _____

3. _____

4. _____

5. _____

6. _____

7. _____

8. _____

9. _____

10. _____

11. _____

12. _____

13. _____

14. _____

15. _____

16. _____

17. _____

18. _____

19. _____

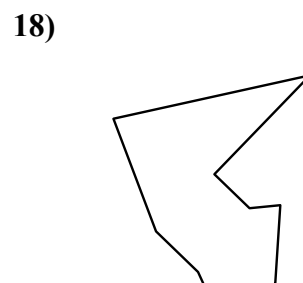
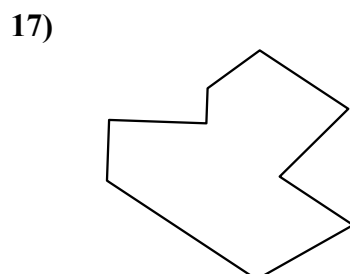
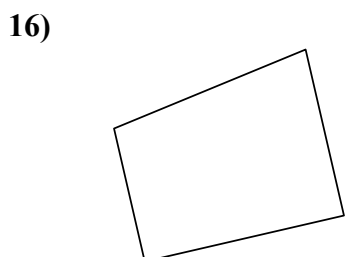
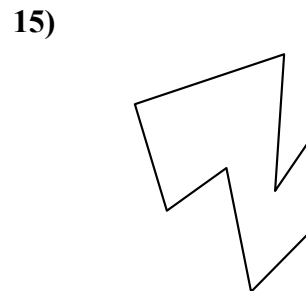
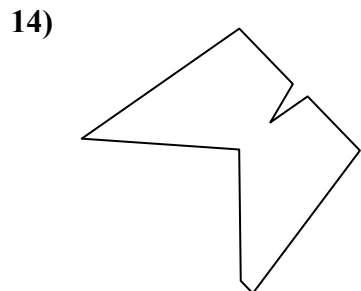
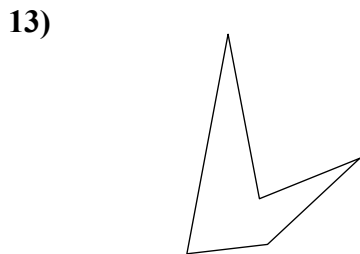
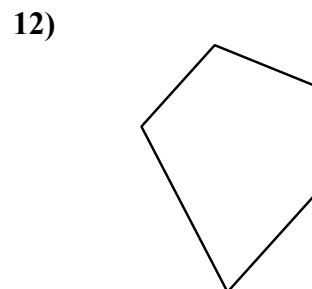
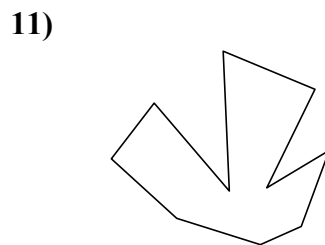
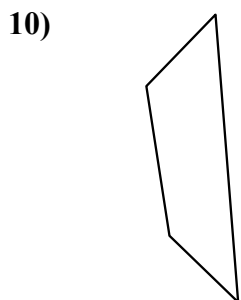
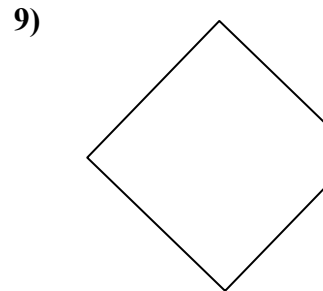
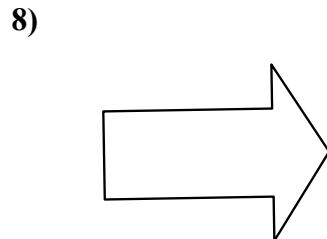
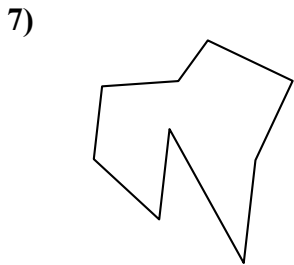
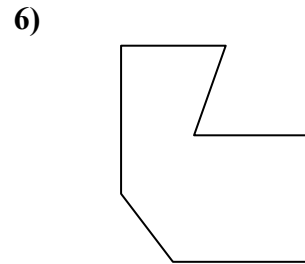
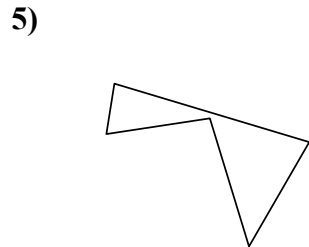

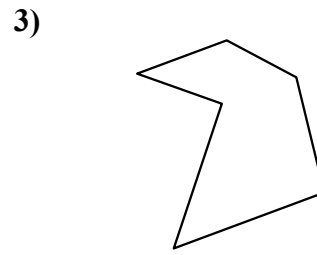


20. _____

21. _____



Определите тип данных фигур.

ОТВЕТЫ



1. семиугольник

2. десятиугольник

3. шестиугольник

4. пятиугольник

5. пятиугольник

6. семиугольник

7. девятиугольник

8. семиугольник

9. пятиугольник

10. четырёхугольник

11. десятиугольник

12. пятиугольник

13. пятиугольник

14. девятиугольник

15. восьмиугольник

16. четырёхугольник

17. девятиугольник

18. девятиугольник

19. восьмиугольник

20. четырёхугольник

21. восьмиугольник