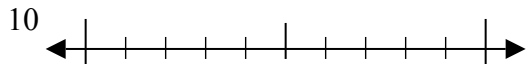




Используйте числовые прямые для округления до десятков.

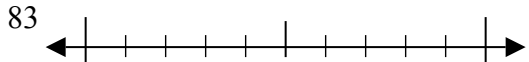
Отвeты

об)



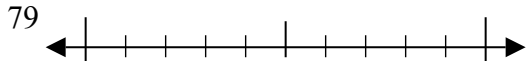
об. 10

1)



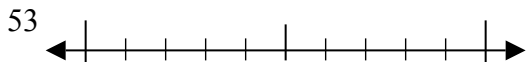
1. \_\_\_\_\_

2)



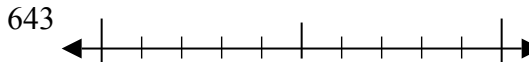
2. \_\_\_\_\_

3)



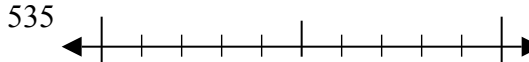
3. \_\_\_\_\_

4)



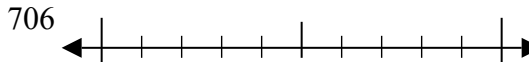
4. \_\_\_\_\_

5)



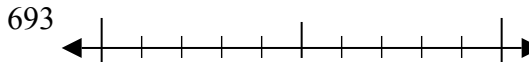
5. \_\_\_\_\_

6)



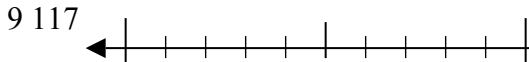
6. \_\_\_\_\_

7)



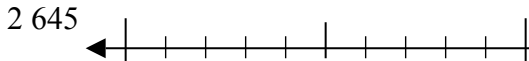
7. \_\_\_\_\_

8)



8. \_\_\_\_\_

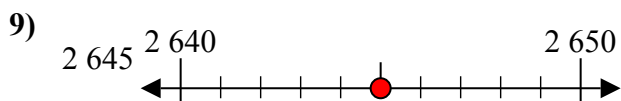
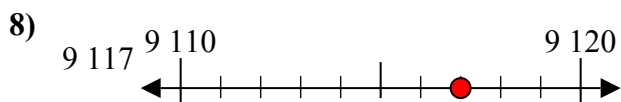
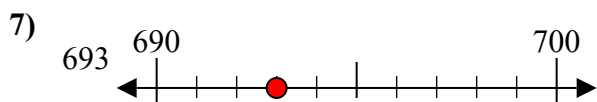
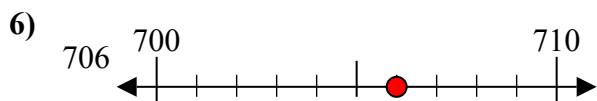
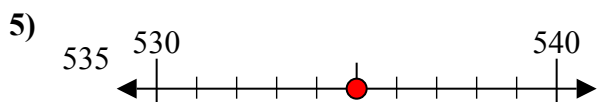
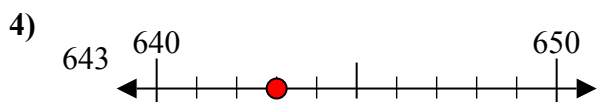
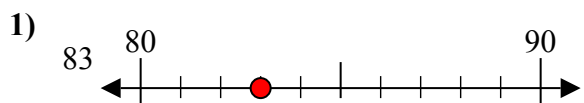
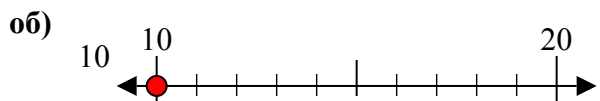
9)



9. \_\_\_\_\_



Используйте числовые прямые для округления до десятков.



**Ответы**

об. 10

1. 80

2. 80

3. 50

4. 640

5. 540

6. 710

7. 690

8. 9120

9. 2650