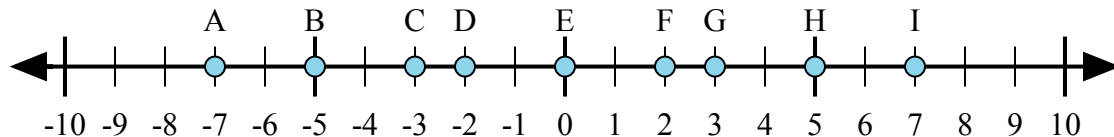




Определите какой ответ отражает ответ каждой задачи на числовой прямой.



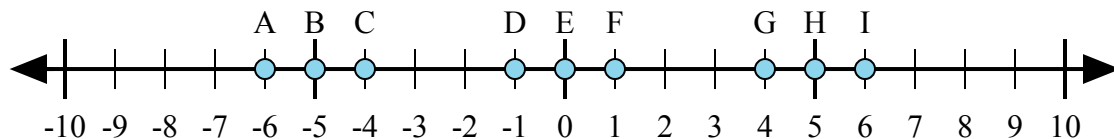
1)  $2 + (-5) =$

2)  $(-5) + (-2) =$

3)  $(-5) + 2 =$

4)  $5 + (-2) =$

5)  $(-2) + 5 =$



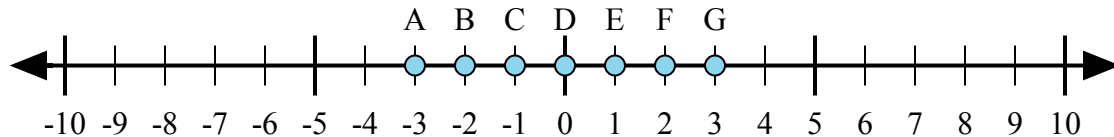
6)  $1 + 5 =$

7)  $(-1) + 5 =$

8)  $5 + (-1) =$

9)  $(-1) + (-5) =$

10)  $(-5) + 1 =$



11)  $(-1) + 2 =$

12)  $1 + (-2) =$

13)  $2 + 1 =$

14)  $2 + (-1) =$

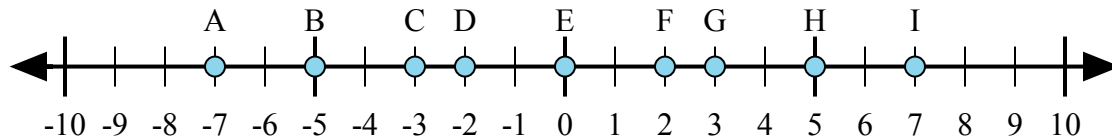
15)  $(-2) + 1 =$

Ответы

1. \_\_\_\_\_
2. \_\_\_\_\_
3. \_\_\_\_\_
4. \_\_\_\_\_
5. \_\_\_\_\_
6. \_\_\_\_\_
7. \_\_\_\_\_
8. \_\_\_\_\_
9. \_\_\_\_\_
10. \_\_\_\_\_
11. \_\_\_\_\_
12. \_\_\_\_\_
13. \_\_\_\_\_
14. \_\_\_\_\_
15. \_\_\_\_\_



Определите какой ответ отражает ответ каждой задачи на числовой прямой.



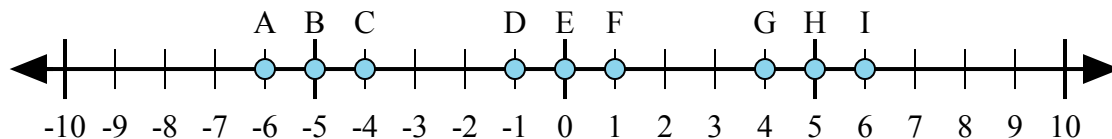
1)  $2 + (-5) =$

2)  $(-5) + (-2) =$

3)  $(-5) + 2 =$

4)  $5 + (-2) =$

5)  $(-2) + 5 =$



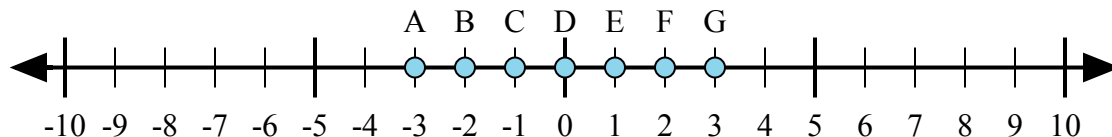
6)  $1 + 5 =$

7)  $(-1) + 5 =$

8)  $5 + (-1) =$

9)  $(-1) + (-5) =$

10)  $(-5) + 1 =$



11)  $(-1) + 2 =$

12)  $1 + (-2) =$

13)  $2 + 1 =$

14)  $2 + (-1) =$

15)  $(-2) + 1 =$

**ОТВЕТЫ**

1.           **C**          

2.           **A**          

3.           **C**          

4.           **G**          

5.           **G**          

6.           **I**          

7.           **G**          

8.           **G**          

9.           **A**          

10.          **C**          

11.          **E**          

12.          **C**          

13.          **G**          

14.          **E**          

15.          **C**