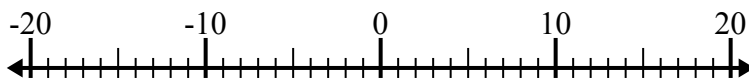




Решите каждую задачу. Используйте числовую прямую, если нужно.

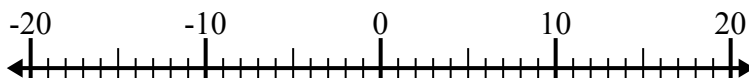
**ОТВЕТЫ**

1)  $(-15) - (-7) =$  \_\_\_\_\_



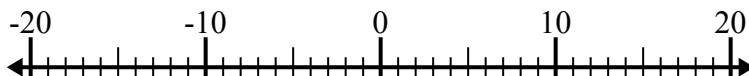
1. \_\_\_\_\_

2)  $(-9) - 4 =$  \_\_\_\_\_



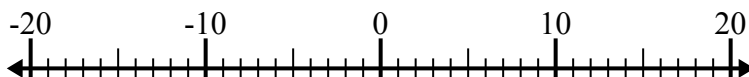
2. \_\_\_\_\_

3)  $7 - (-13) =$  \_\_\_\_\_



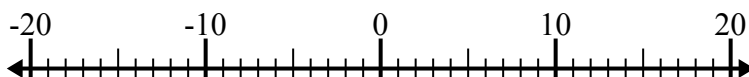
3. \_\_\_\_\_

4)  $(-5) + (-11) =$  \_\_\_\_\_



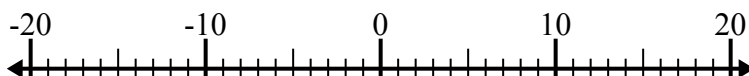
4. \_\_\_\_\_

5)  $(-12) + 4 =$  \_\_\_\_\_



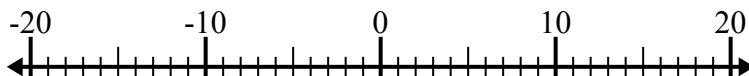
5. \_\_\_\_\_

6)  $14 - (-2) =$  \_\_\_\_\_



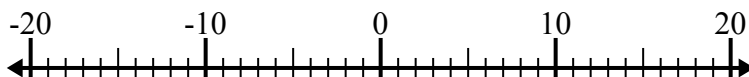
6. \_\_\_\_\_

7)  $1 + (-13) =$  \_\_\_\_\_



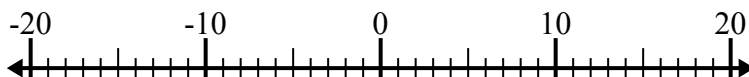
7. \_\_\_\_\_

8)  $(-4) - (-7) =$  \_\_\_\_\_



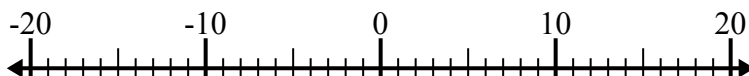
8. \_\_\_\_\_

9)  $(-9) - 11 =$  \_\_\_\_\_



9. \_\_\_\_\_

10)  $(-15) + (-1) =$  \_\_\_\_\_

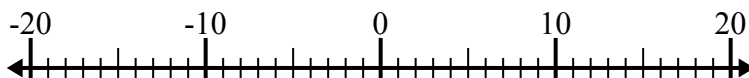


10. \_\_\_\_\_

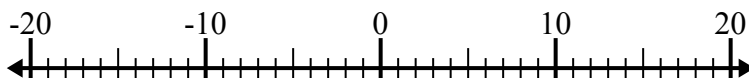


Решите каждую задачу. Используйте числовую прямую, если нужно.

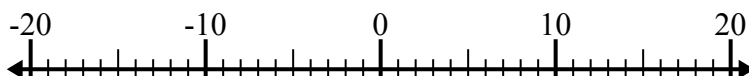
1)  $(-15) - (-7) = \underline{-8}$



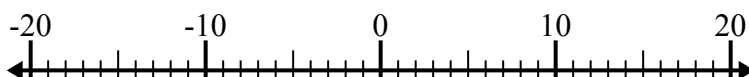
2)  $(-9) - 4 = \underline{-13}$



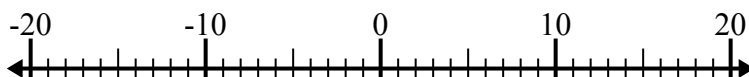
3)  $7 - (-13) = \underline{20}$



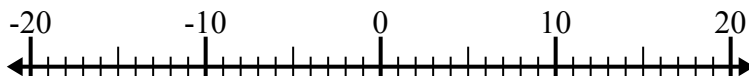
4)  $(-5) + (-11) = \underline{-16}$



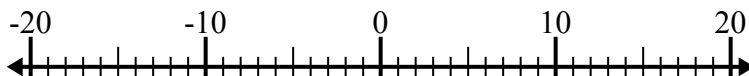
5)  $(-12) + 4 = \underline{-8}$



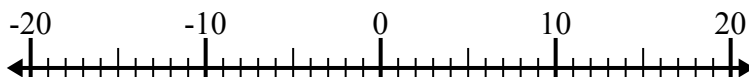
6)  $14 - (-2) = \underline{16}$



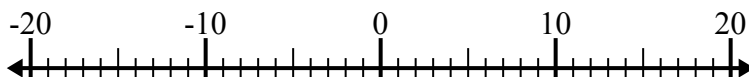
7)  $1 + (-13) = \underline{-12}$



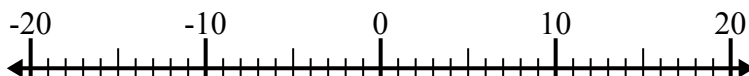
8)  $(-4) - (-7) = \underline{3}$



9)  $(-9) - 11 = \underline{-20}$



10)  $(-15) + (-1) = \underline{-16}$

**ОТВЕТЫ**1. **-8**2. **-13**3. **20**4. **-16**5. **-8**6. **16**7. **-12**8. **3**9. **-20**10. **-16**