



Определите указанную сумму денег.

Ответы




1. _____




2. _____



3. _____



4. _____



5. _____



6. _____



7. _____



8. _____






9. _____



10. _____



Определите указанную сумму денег.



ОТВЕТЫ

1. \$0,96

2. \$0,96

3. \$0,97

4. \$0,95

5. \$0,95

6. \$0,99

7. \$0,99

8. \$0,98

9. \$0,97

10. \$0,97