



Используйте числовую прямую при решении.

Ответы

1) $\frac{1}{5} \times 8 =$

1. _____

2) $3 \times \frac{1}{3} =$

2. _____

3) $2 \times \frac{1}{6} =$

3. _____

4) $\frac{1}{10} \times 4 =$

4. _____

5) $\frac{1}{6} \times 7 =$

5. _____

6) $\frac{1}{3} \times 5 =$

6. _____

7) $\frac{1}{3} \times 2 =$

7. _____

8) $7 \times \frac{1}{5} =$

8. _____

9) $\frac{1}{4} \times 6 =$

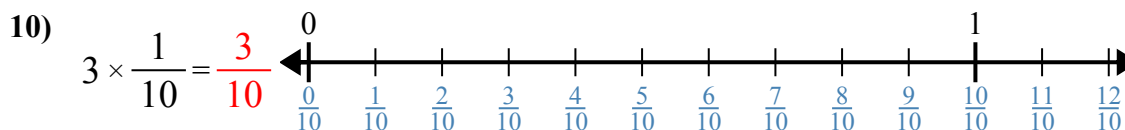
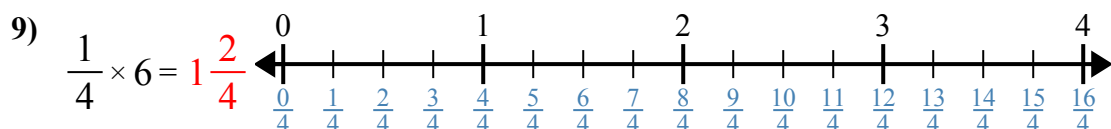
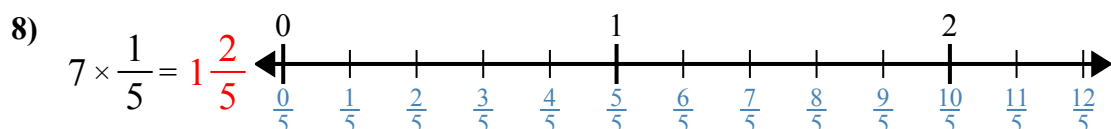
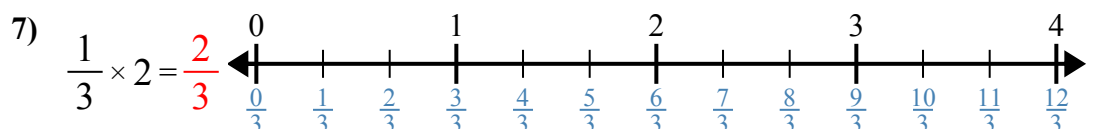
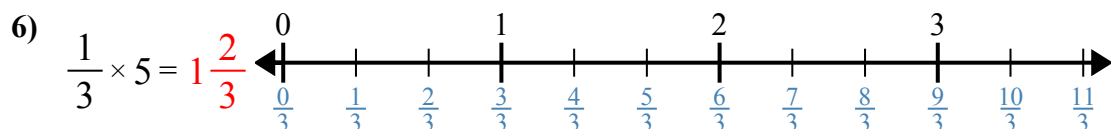
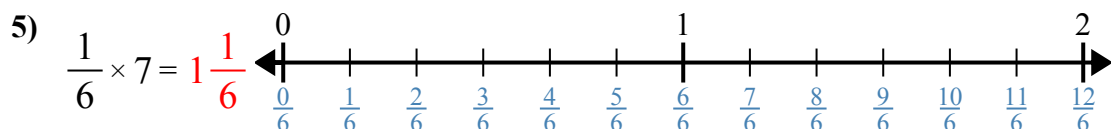
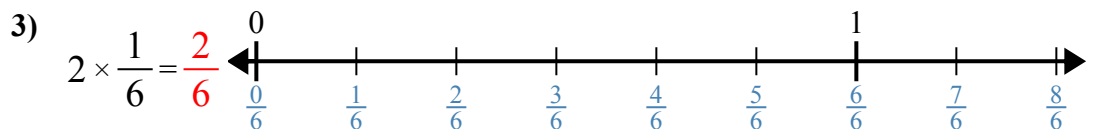
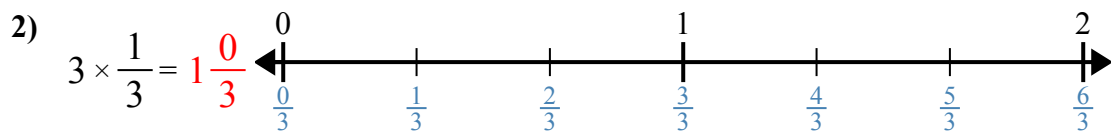
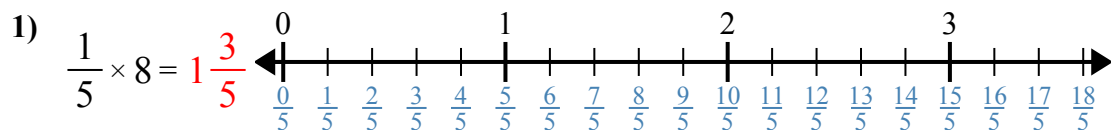
9. _____

10) $3 \times \frac{1}{10} =$

10. _____



Используйте числовую прямую при решении.

**Ответы**

1. $1\frac{3}{5}$

2. $1\frac{0}{3}$

3. $\frac{2}{6}$

4. $\frac{4}{10}$

5. $1\frac{1}{6}$

6. $1\frac{2}{3}$

7. $\frac{2}{3}$

8. $1\frac{2}{5}$

9. $1\frac{2}{4}$

10. $\frac{3}{10}$



Используйте числовую прямую при решении.

Ответы

$1\frac{0}{3}$

$1\frac{3}{5}$

$\frac{2}{6}$

$\frac{3}{10}$

$1\frac{2}{3}$

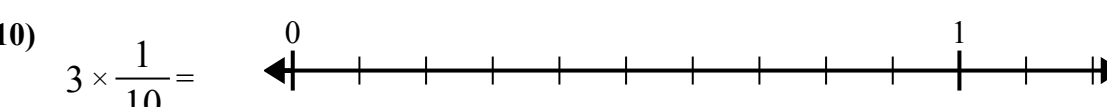
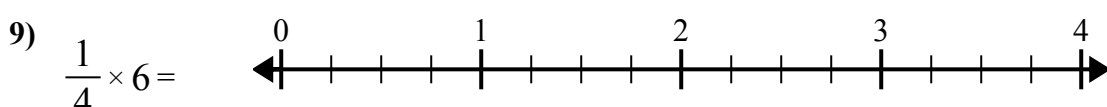
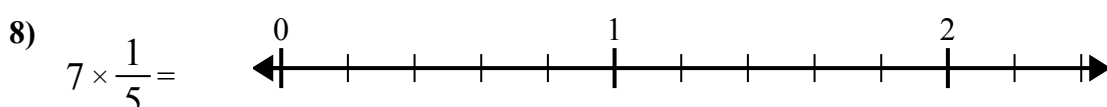
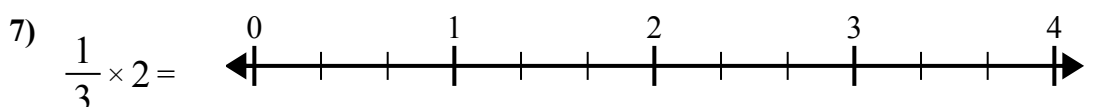
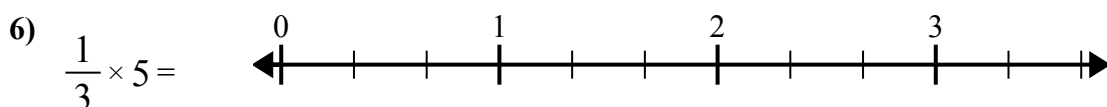
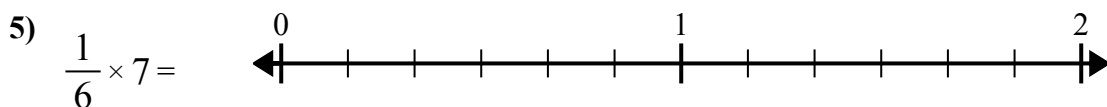
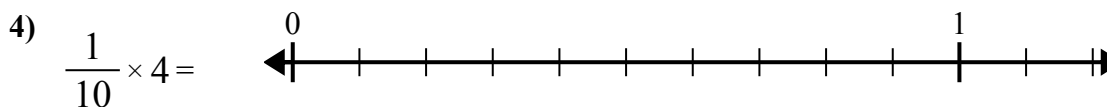
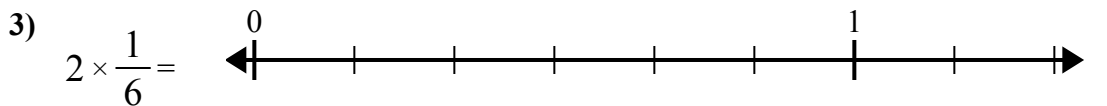
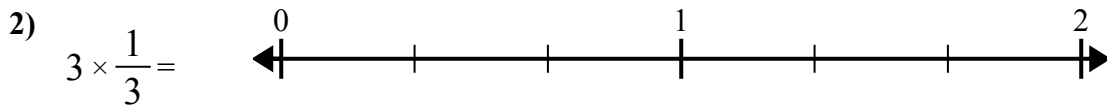
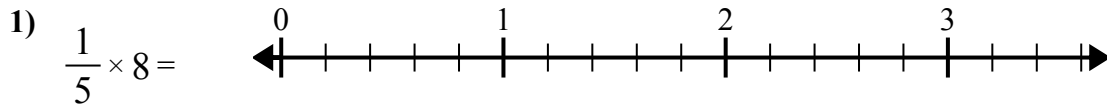
$1\frac{2}{4}$

$1\frac{1}{6}$

$\frac{2}{3}$

$1\frac{2}{5}$

$\frac{4}{10}$



1. _____
2. _____
3. _____
4. _____
5. _____
6. _____
7. _____
8. _____
9. _____
10. _____