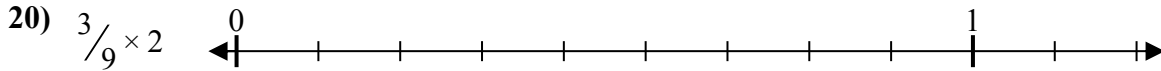
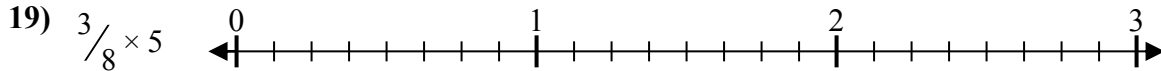
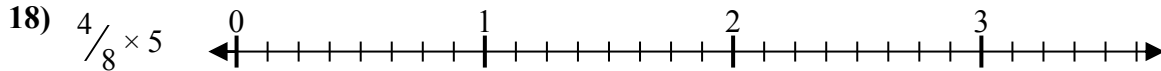
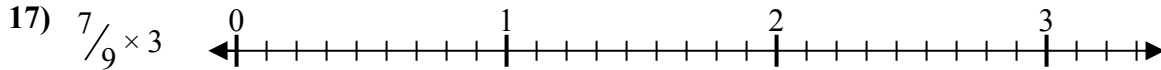
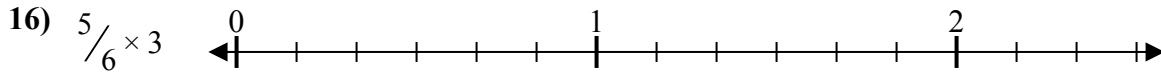
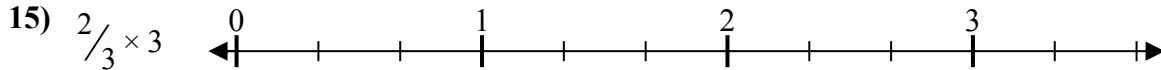
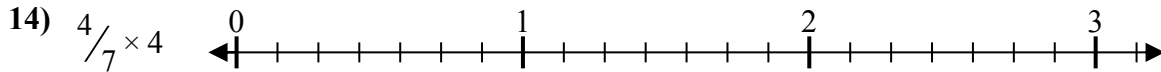
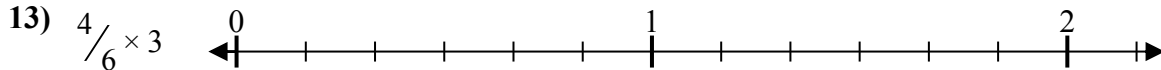
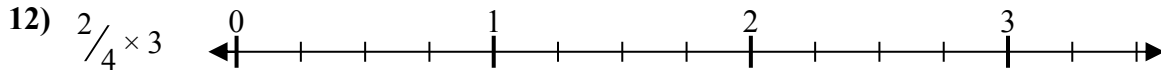
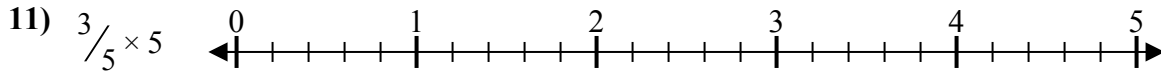
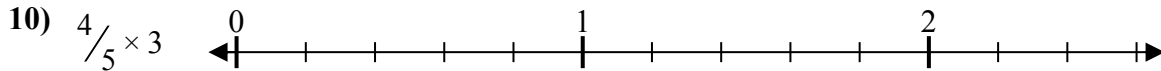
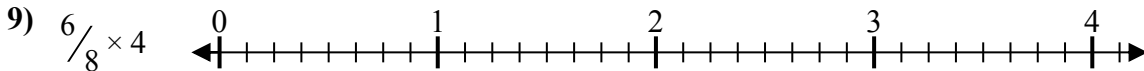
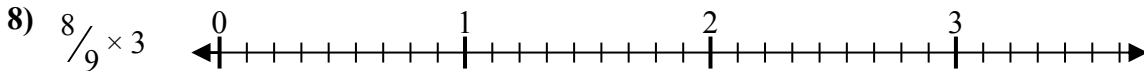
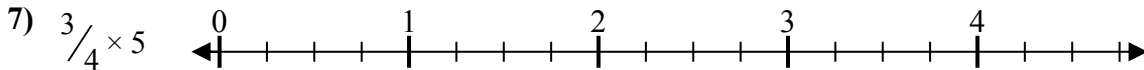

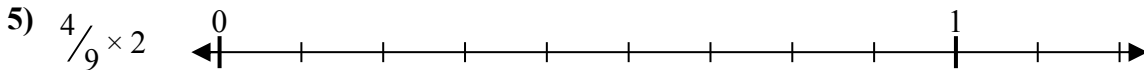
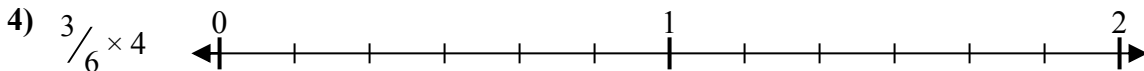
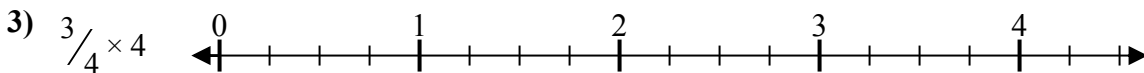

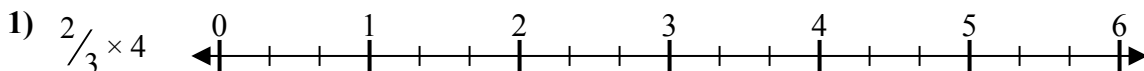




Решите каждую задачу.

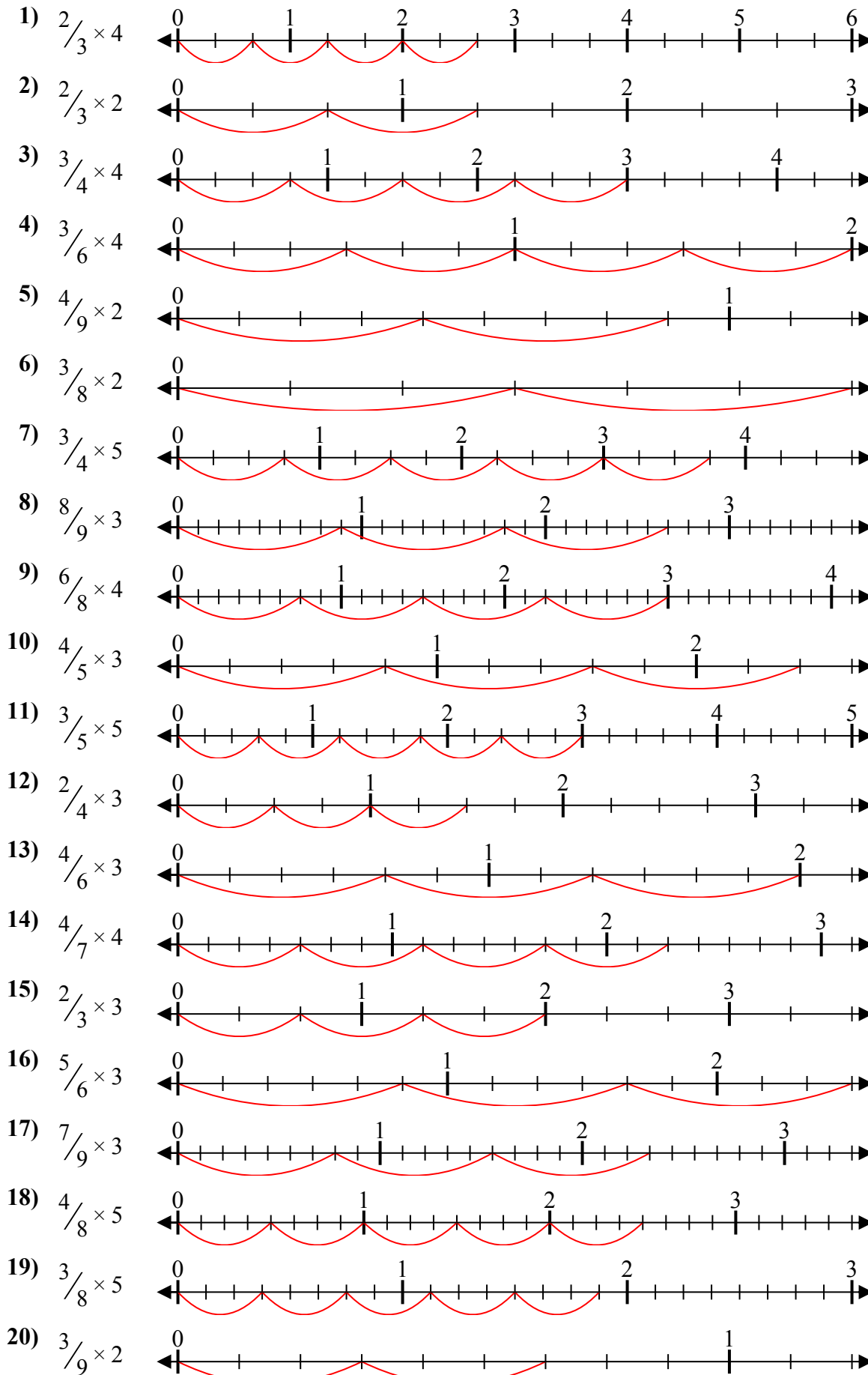
Отвeты



1. _____
2. _____
3. _____
4. _____
5. _____
6. _____
7. _____
8. _____
9. _____
10. _____
11. _____
12. _____
13. _____
14. _____
15. _____
16. _____
17. _____
18. _____
19. _____
20. _____



Решите каждую задачу.



Отвѣты

1. $\frac{8}{3} = 2\frac{2}{3}$
2. $\frac{4}{3} = 1\frac{1}{3}$
3. $\frac{12}{4} = 3$
4. $\frac{12}{6} = 2$
5. $\frac{8}{9} = \frac{8}{9}$
6. $\frac{6}{8} = \frac{3}{4}$
7. $\frac{15}{4} = 3\frac{3}{4}$
8. $\frac{24}{9} = 2\frac{2}{3}$
9. $\frac{24}{8} = 3$
10. $\frac{12}{5} = 2\frac{2}{5}$
11. $\frac{15}{5} = 3$
12. $\frac{6}{4} = 1\frac{1}{2}$
13. $\frac{12}{6} = 2$
14. $\frac{16}{7} = 2\frac{2}{7}$
15. $\frac{6}{3} = 2$
16. $\frac{15}{6} = 2\frac{1}{2}$
17. $\frac{21}{9} = 2\frac{1}{3}$
18. $\frac{20}{8} = 2\frac{1}{2}$
19. $\frac{15}{8} = 1\frac{7}{8}$
20. $\frac{6}{9} = \frac{2}{3}$