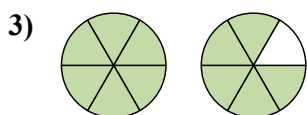
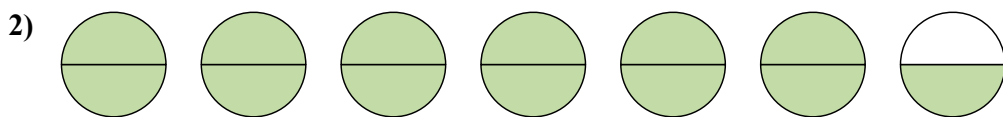
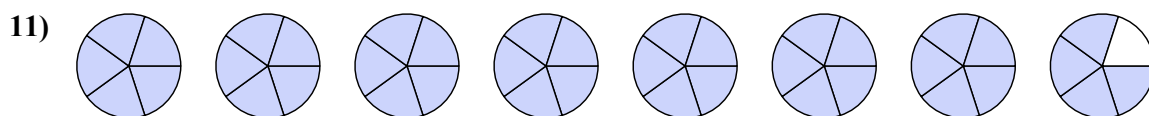
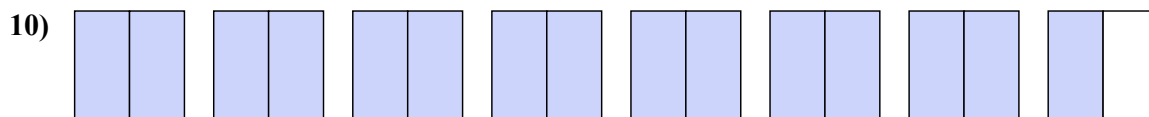
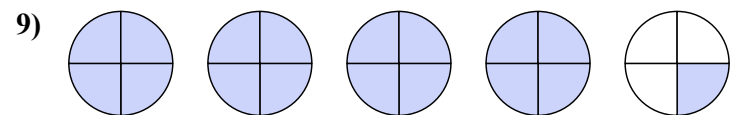
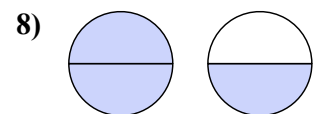
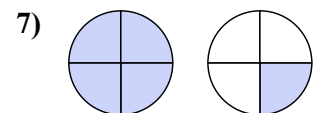
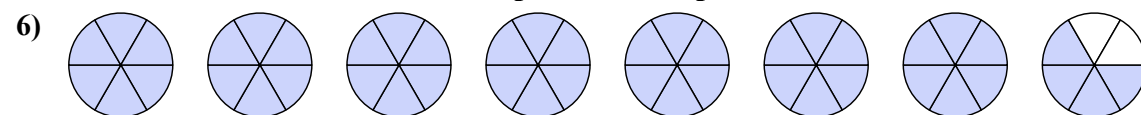




Напишите каждый ряд фигур в виде смешанного числа.



Напишите каждое число в виде неправильной дроби.



ОТВЕТЫ

1. $7\frac{3}{4}$

2. $6\frac{1}{2}$

3. $1\frac{5}{6}$

4. $3\frac{3}{5}$

5. $6\frac{2}{3}$

6. $\frac{46}{6}$

7. $\frac{5}{4}$

8. $\frac{3}{2}$

9. $\frac{17}{4}$

10. $\frac{15}{2}$

11. $\frac{39}{5}$