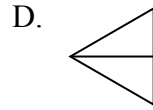
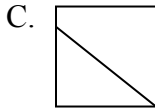
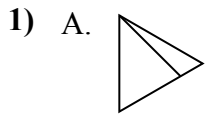




Определите под каким вариантом находятся фигуры, разбитые на равные части.

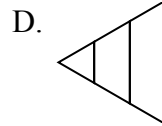
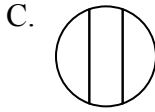
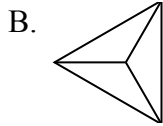
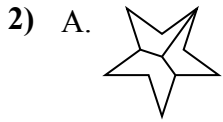
Если такой нет, напишите 'нет'.

ОТВЕТЫ



1. \_\_\_\_\_

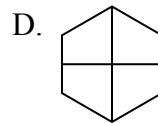
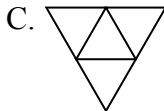
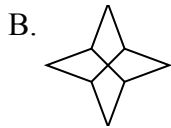
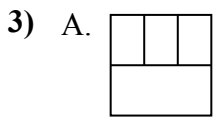
2. \_\_\_\_\_



3. \_\_\_\_\_

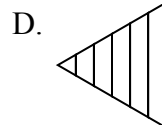
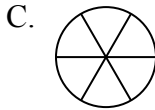
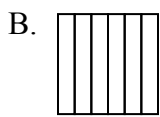
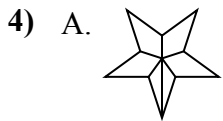
4. \_\_\_\_\_

5. \_\_\_\_\_

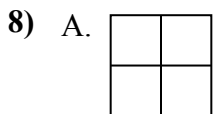
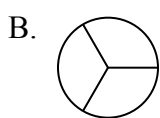
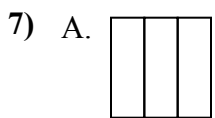
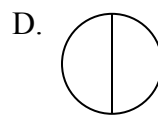
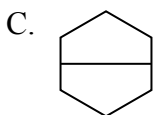
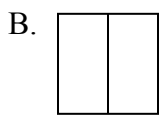
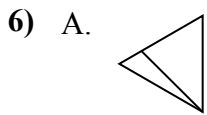
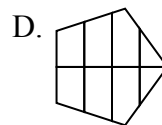
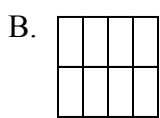
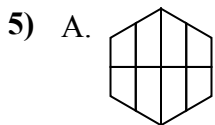


6. \_\_\_\_\_

7. \_\_\_\_\_



8. \_\_\_\_\_





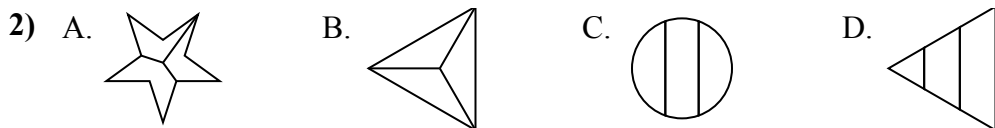
Определите под каким вариантом находятся фигуры, разбитые на равные части.

Если такой нет, напишите 'нет'.

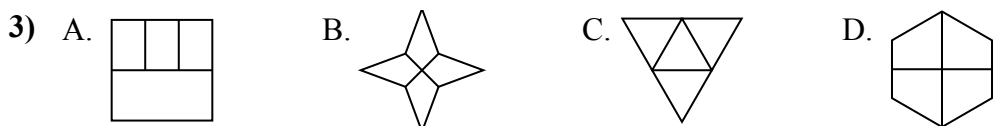
**ОТВЕТЫ**



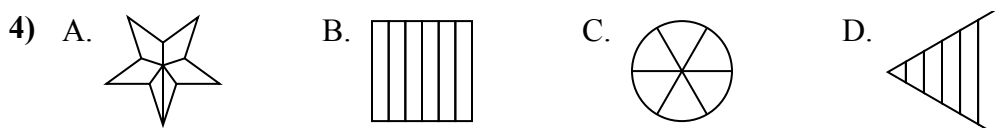
1.     **D**    



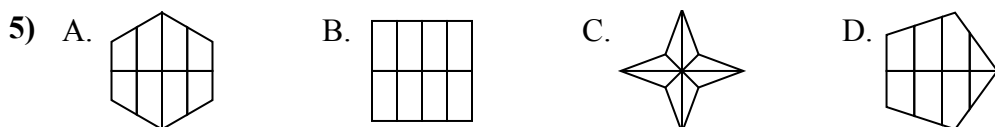
2.     **B**    



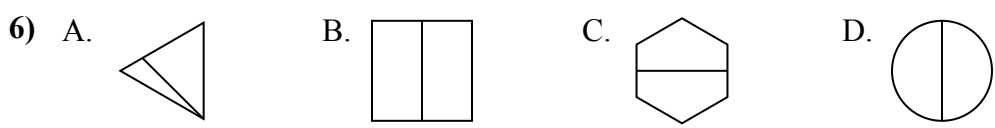
3.     **B,C,D**    



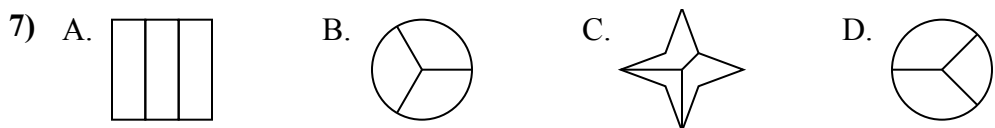
4.     **B,C**    



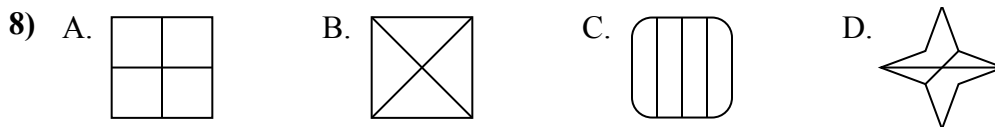
5.     **B,C**    



6.     **B,C,D**    



7.     **A,B**    



8.     **A,B**