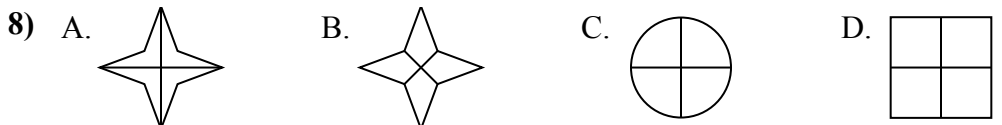
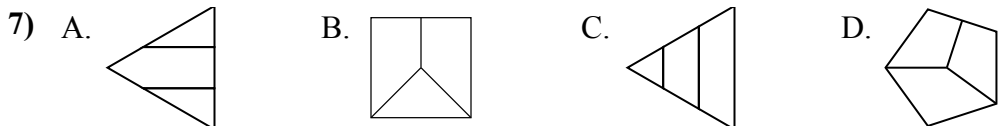
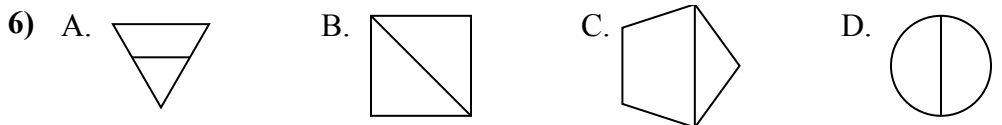
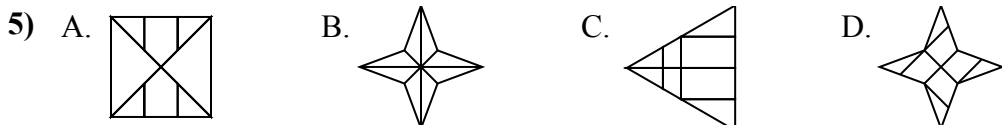
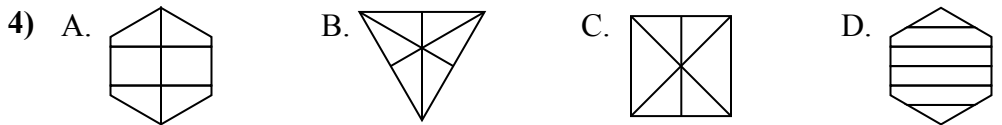
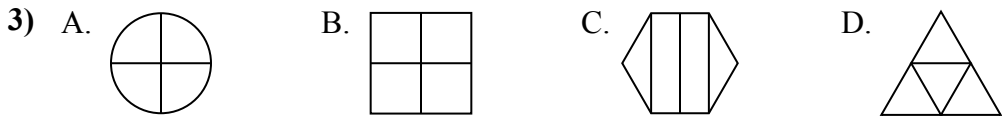
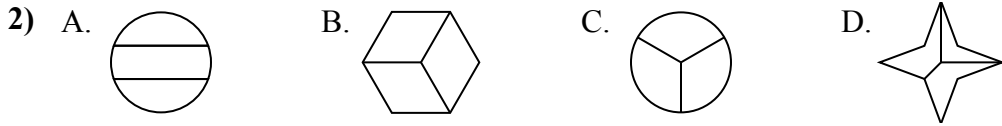
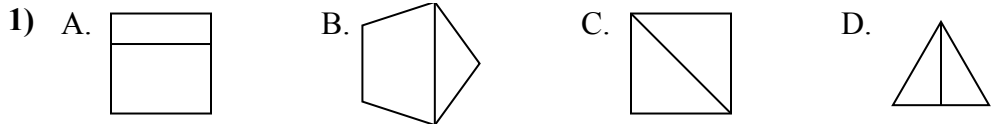




Определите под каким вариантом находятся фигуры, разбитые на равные части.

Если такой нет, напишите 'нет'.

ОТВЕТЫ



1. \_\_\_\_\_

2. \_\_\_\_\_

3. \_\_\_\_\_

4. \_\_\_\_\_

5. \_\_\_\_\_

6. \_\_\_\_\_


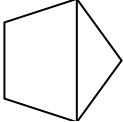

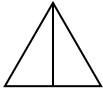
7. \_\_\_\_\_

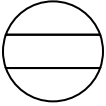
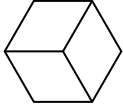
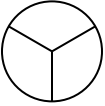

8. \_\_\_\_\_

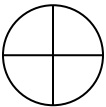
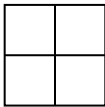
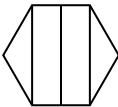
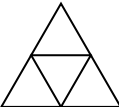


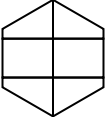
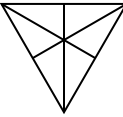
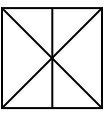
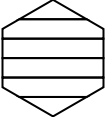
Определите под каким вариантом находятся фигуры, разбитые на равные части.

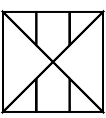

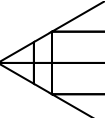
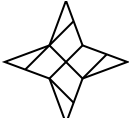
Если такой нет, напишите 'нет'.


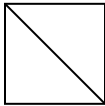
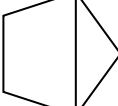
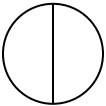
1) A.  B.  C.  D. 

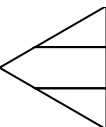
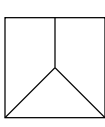
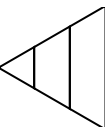
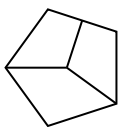
2) A.  B.  C.  D. 


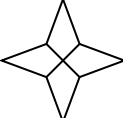
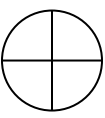
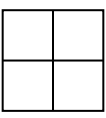
3) A.  B.  C.  D. 

4) A.  B.  C.  D. 

5) A.  B.  C.  D. 

6) A.  B.  C.  D. 

7) A.  B.  C.  D. 

8) A.  B.  C.  D. 

**ОТВЕТЫ**

1. C,D
2. B,C
3. A,B,D
4. B
5. B
6. B,D
7. нет
8. A,B,C,D