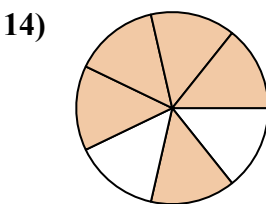
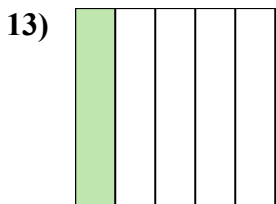
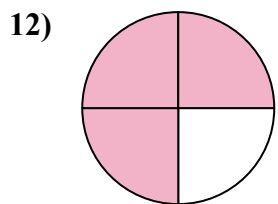
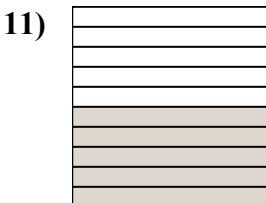
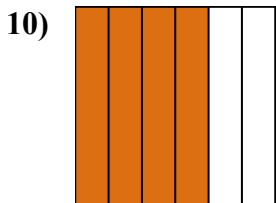
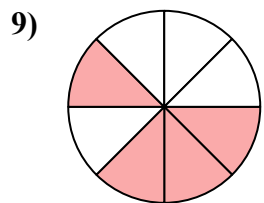
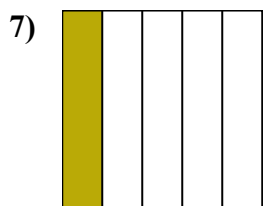
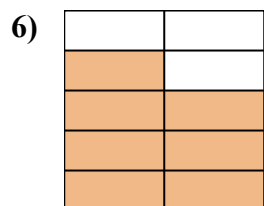
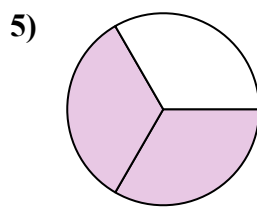

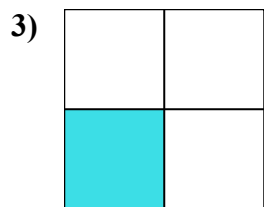
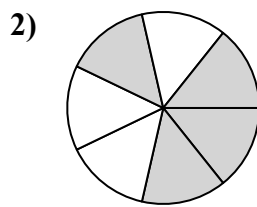
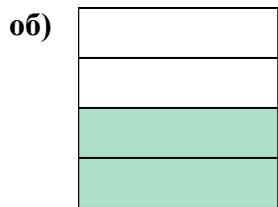




Напишите заштрихованную сумму в форме слова.



ОТВЕТЫ

об. две четверти

1. _____

2. _____

3. _____

4. _____

5. _____

6. _____

7. _____

8. _____

9. _____

10. _____

11. _____

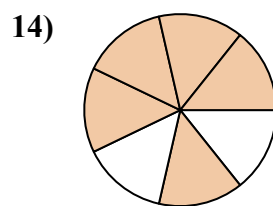
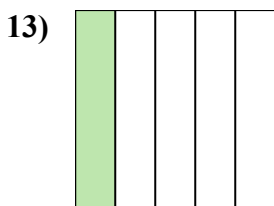
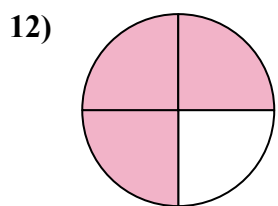
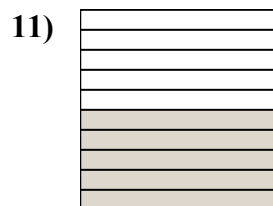
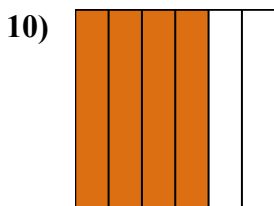
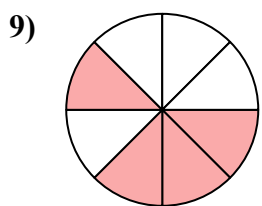
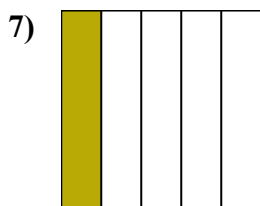
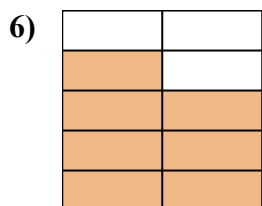
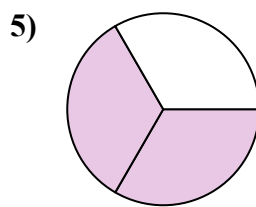
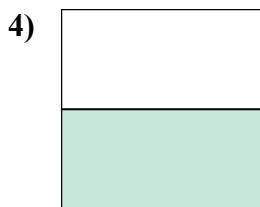
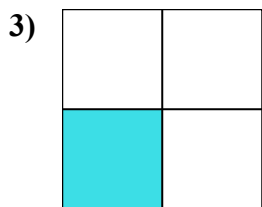
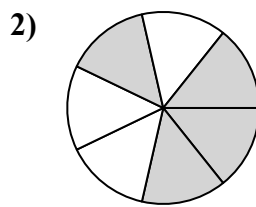
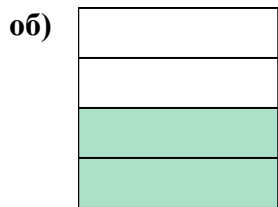
12. _____

13. _____

14. _____



Напишите заштрихованную сумму в форме слова.



ОТВЕТЫ

об. две четверти

1. одна половина

2. четыре седьмых

3. одна треть

4. одна половина

5. две третьих

6. семь девярых

7. одна пятая

8. одна девятая

9. четыре восьмых

10. четыре шестых

11. пять десятых

12. три четверти

13. одна пятая

14. пять седьмых