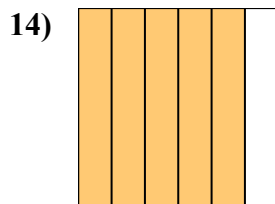
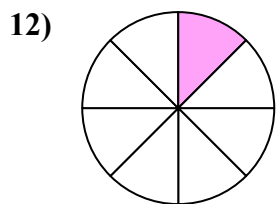
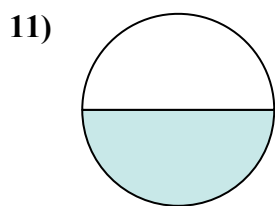
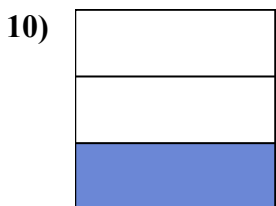

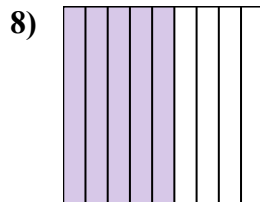
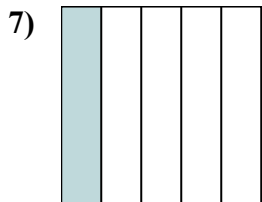
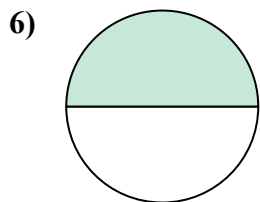
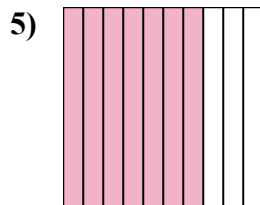
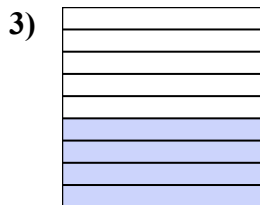
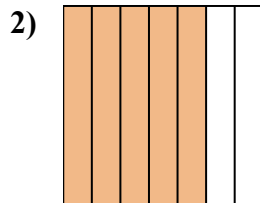

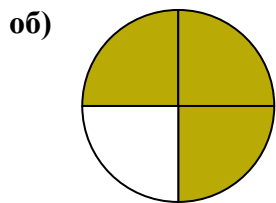




Напишите заштрихованную сумму в форме слова.

**ОТВЕТЫ**



об. три четверти

1. \_\_\_\_\_

2. \_\_\_\_\_

3. \_\_\_\_\_

4. \_\_\_\_\_

5. \_\_\_\_\_

6. \_\_\_\_\_

7. \_\_\_\_\_

8. \_\_\_\_\_

9. \_\_\_\_\_

10. \_\_\_\_\_

11. \_\_\_\_\_

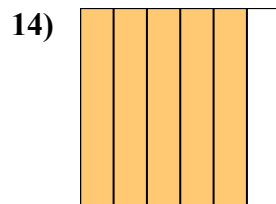
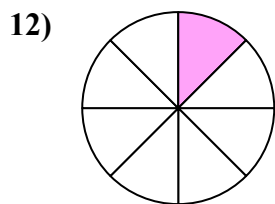
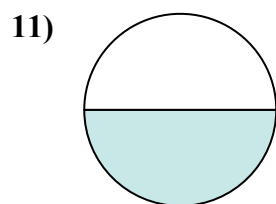
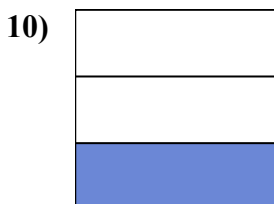
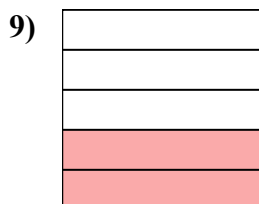
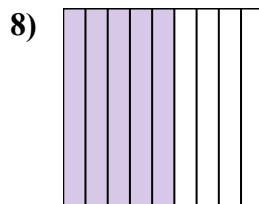
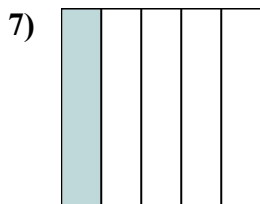
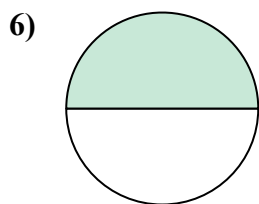
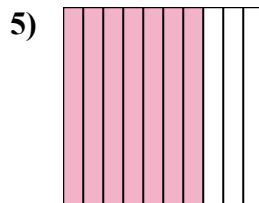
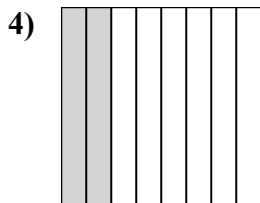
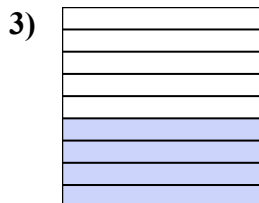
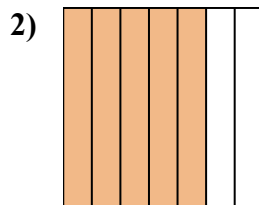

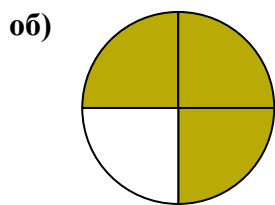
12. \_\_\_\_\_

13. \_\_\_\_\_

14. \_\_\_\_\_



Напишите заштрихованную сумму в форме слова.

**ОТВЕТЫ**об. три четверти1. одна четвертая2. пять седьмых3. четыре девятых4. две восьмых5. семь десятых6. одна половина7. одна пятая8. пять девятых9. две пятых10. одна треть11. одна половина12. одна восьмая13. две десятых14. пять шестых