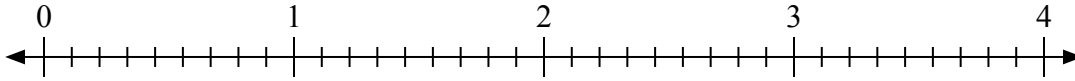




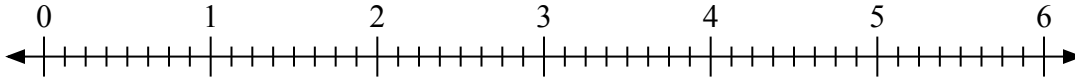
Используйте числовую прямую для решения задачи.

Ответы

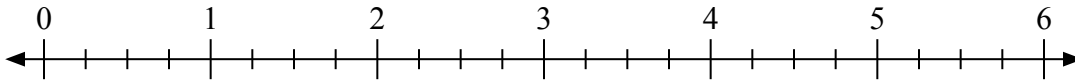
1) $2:\frac{3}{9}$



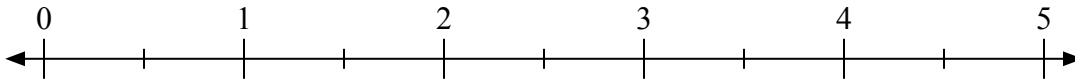
2) $5:\frac{3}{8}$




3) $2:\frac{1}{4}$




4) $5:\frac{1}{2}$



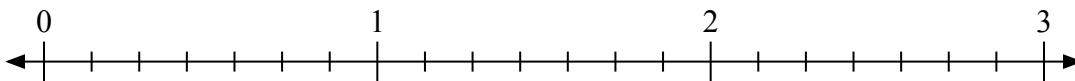
5) $3:\frac{1}{3}$



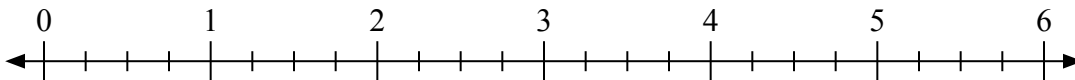
6) $2:\frac{2}{3}$



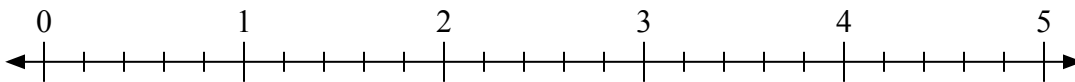
7) $3:\frac{3}{7}$



8) $5:\frac{2}{4}$



9) $5:\frac{1}{5}$



1. _____

2. _____

3. _____

4. _____

5. _____

6. _____

7. _____

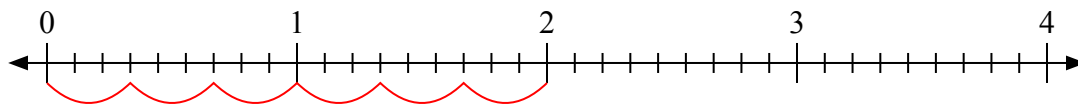
8. _____

9. _____

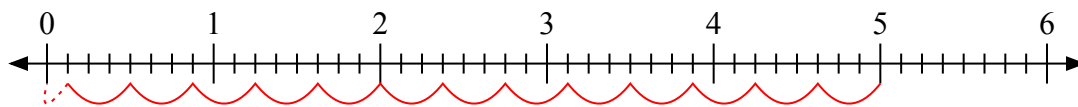


Используйте числовую прямую для решения задачи.

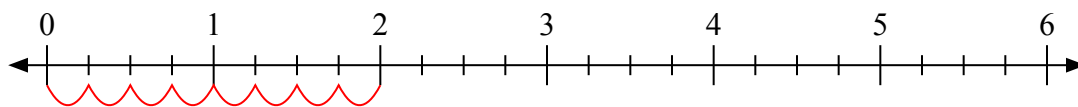
1) $2 \frac{3}{9}$



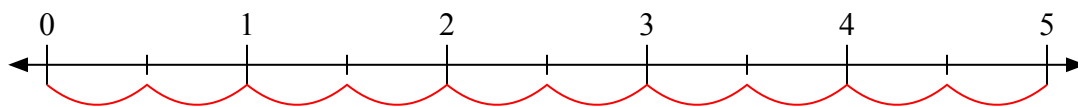
2) $5 \frac{3}{8}$



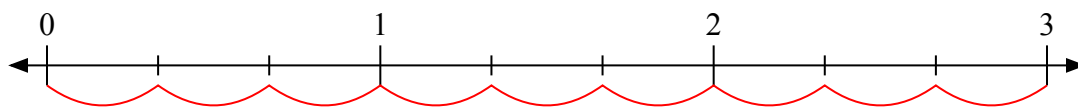
3) $2 \frac{1}{4}$



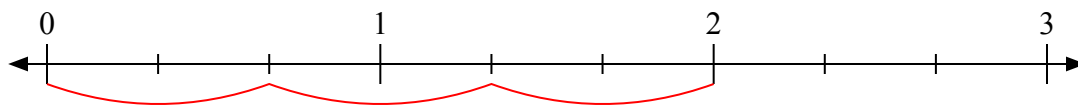
4) $5 \frac{1}{2}$



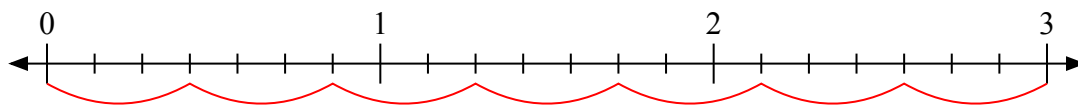
5) $3 \frac{1}{3}$



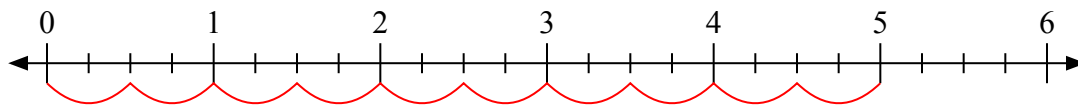
6) $2 \frac{2}{3}$



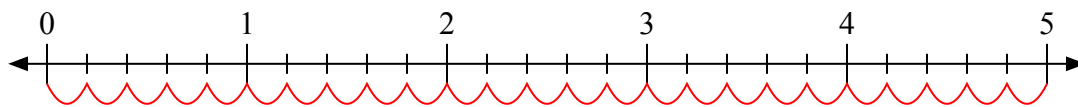
7) $3 \frac{3}{7}$



8) $5 \frac{2}{4}$



9) $5 \frac{1}{5}$



Ответы

1. 6

2. $13 \frac{1}{3}$

3. 8

4. 10

5. 9

6. 3

7. 7

8. 10

9. 25