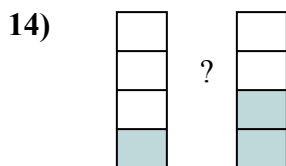
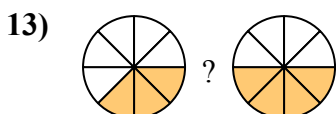
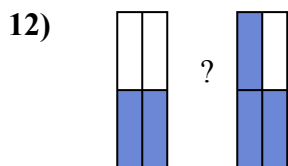
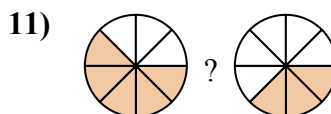
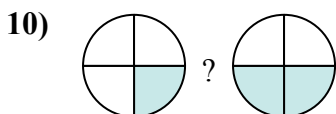
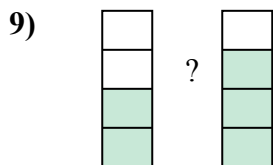
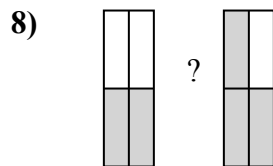
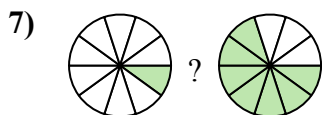
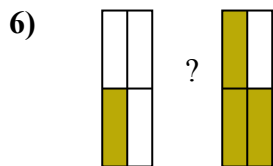
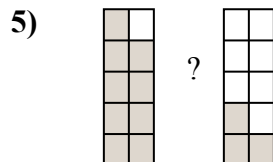
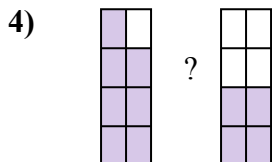
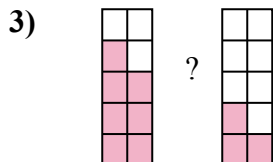
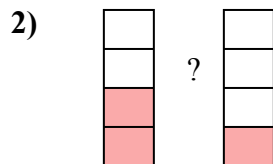

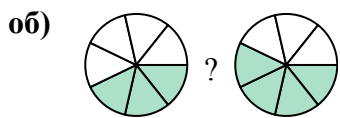




Сравните числители дробей, используя 'больше', 'меньше' или 'равно'.



ОТВЕТЫ

об. $\frac{3}{7}$ $<$ $\frac{4}{7}$

1. _____

2. _____

3. _____

4. _____

5. _____

6. _____

7. _____

8. _____

9. _____

10. _____

11. _____

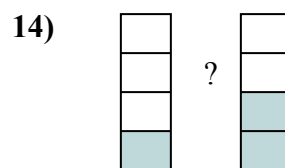
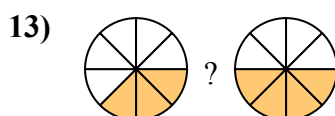
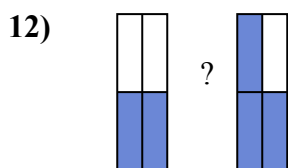
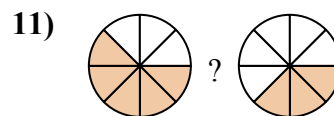
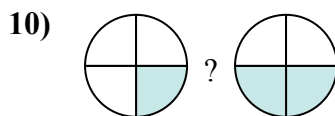
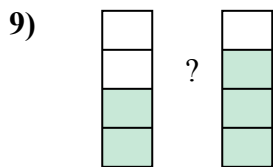
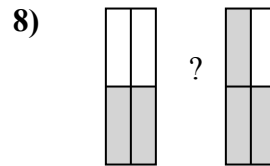
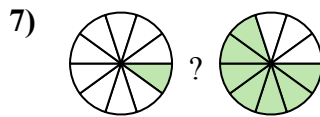
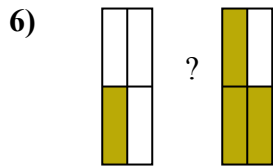
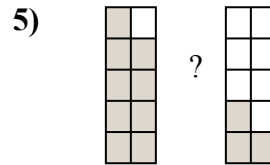
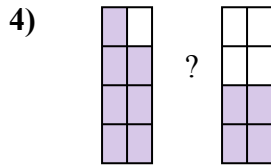
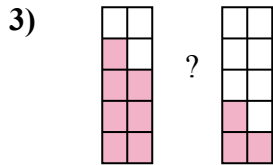
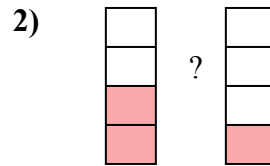
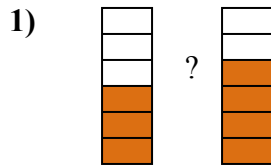
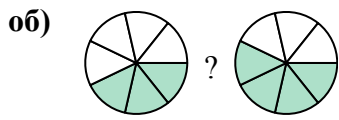
12. _____

13. _____

14. _____



Сравните числители дробей, используя 'больше', 'меньше' или 'равно'.

**ОТВЕТЫ**

об.	$\frac{3}{7}$	<	$\frac{4}{7}$
1.	$\frac{3}{6}$	<	$\frac{4}{6}$
2.	$\frac{2}{4}$	>	$\frac{1}{4}$
3.	$\frac{7}{10}$	>	$\frac{3}{10}$
4.	$\frac{7}{8}$	>	$\frac{4}{8}$
5.	$\frac{9}{10}$	>	$\frac{3}{10}$
6.	$\frac{1}{4}$	<	$\frac{3}{4}$
7.	$\frac{1}{10}$	<	$\frac{7}{10}$
8.	$\frac{2}{4}$	<	$\frac{3}{4}$
9.	$\frac{2}{4}$	<	$\frac{3}{4}$
10.	$\frac{1}{4}$	<	$\frac{2}{4}$
11.	$\frac{5}{8}$	>	$\frac{3}{8}$
12.	$\frac{2}{4}$	<	$\frac{3}{4}$
13.	$\frac{3}{8}$	<	$\frac{4}{8}$
14.	$\frac{1}{4}$	<	$\frac{2}{4}$