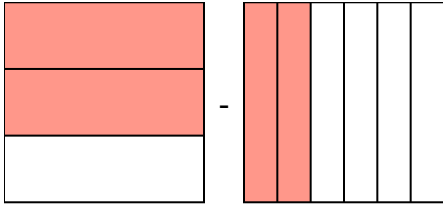


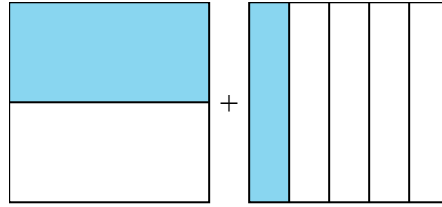


Решите каждую задачу.

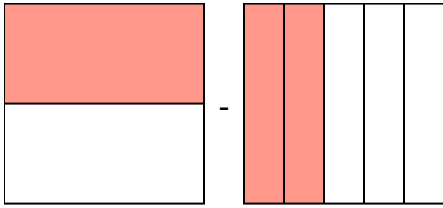
1) $\frac{2}{3} - \frac{2}{6} =$



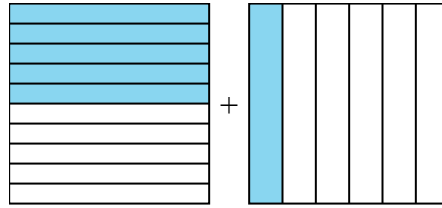
2) $\frac{1}{2} + \frac{1}{5} =$



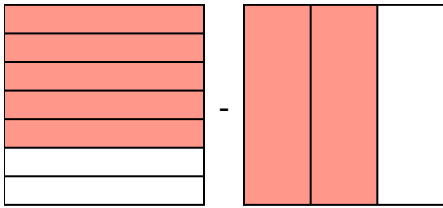
3) $\frac{1}{2} - \frac{2}{5} =$



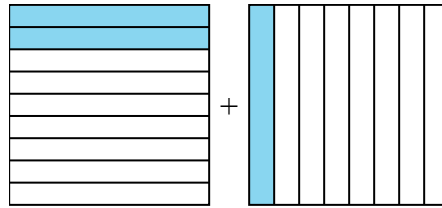
4) $\frac{5}{10} + \frac{1}{6} =$



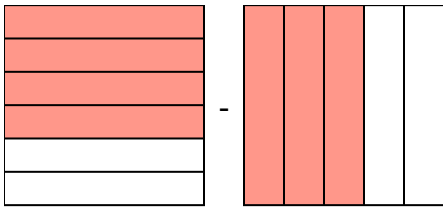
5) $\frac{5}{7} - \frac{2}{3} =$



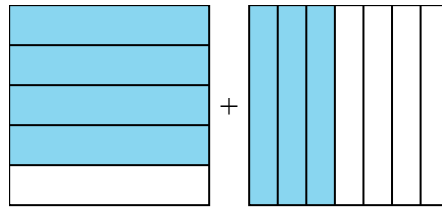
6) $\frac{2}{9} + \frac{1}{8} =$



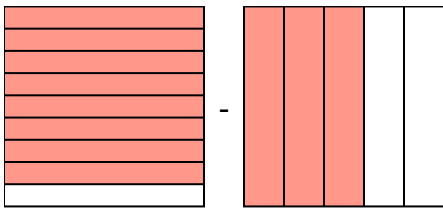
7) $\frac{4}{6} - \frac{3}{5} =$



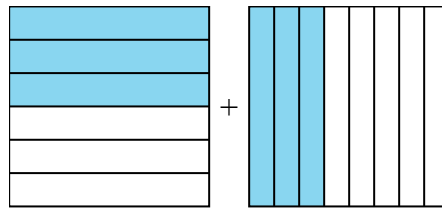
8) $\frac{4}{5} + \frac{3}{7} =$



9) $\frac{8}{9} - \frac{3}{5} =$



10) $\frac{3}{6} + \frac{3}{8} =$



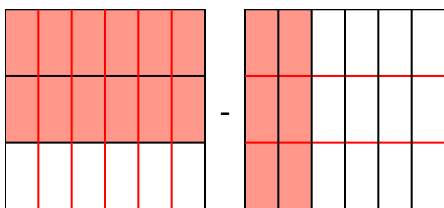
Ответы

1. _____
2. _____
3. _____
4. _____
5. _____
6. _____
7. _____
8. _____
9. _____
10. _____

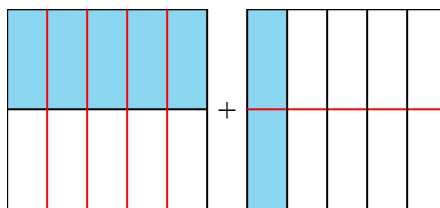


Решите каждую задачу.

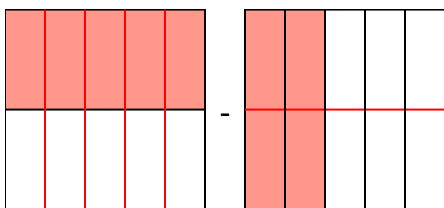
1) $\frac{2}{3} - \frac{2}{6} = \frac{4}{6} - \frac{2}{6} = \frac{2}{6}$



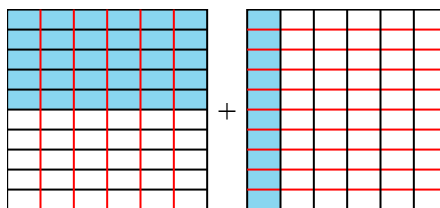
2) $\frac{1}{2} + \frac{1}{5} = \frac{5}{10} + \frac{2}{10} = \frac{7}{10}$



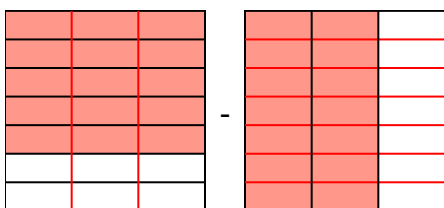
3) $\frac{1}{2} - \frac{2}{5} = \frac{5}{10} - \frac{4}{10} = \frac{1}{10}$



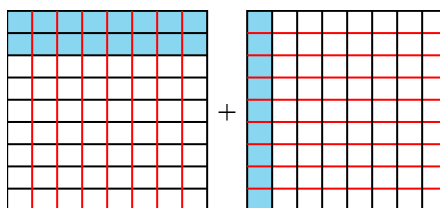
4) $\frac{5}{10} + \frac{1}{6} = \frac{15}{30} + \frac{5}{30} = \frac{20}{30}$



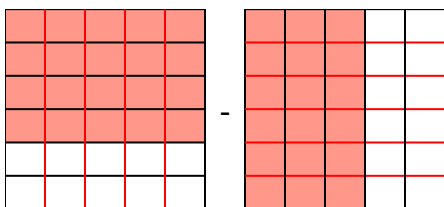
5) $\frac{5}{7} - \frac{2}{3} = \frac{15}{21} - \frac{14}{21} = \frac{1}{21}$



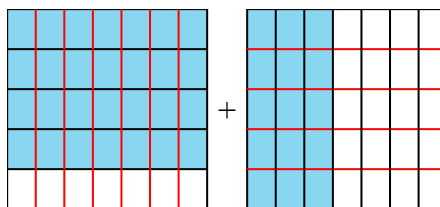
6) $\frac{2}{9} + \frac{1}{8} = \frac{16}{72} + \frac{9}{72} = \frac{25}{72}$



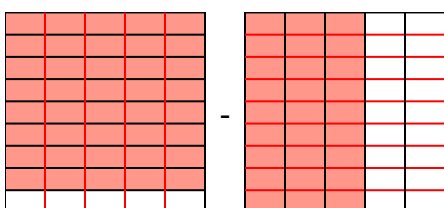
7) $\frac{4}{6} - \frac{3}{5} = \frac{20}{30} - \frac{18}{30} = \frac{2}{30}$



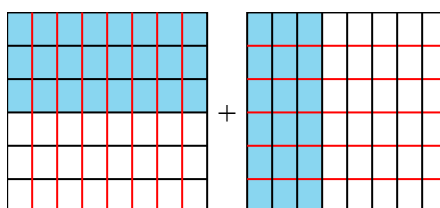
8) $\frac{4}{5} + \frac{3}{7} = \frac{28}{35} + \frac{15}{35} = 1\frac{8}{35}$



9) $\frac{8}{9} - \frac{3}{5} = \frac{40}{45} - \frac{27}{45} = \frac{13}{45}$



10) $\frac{3}{6} + \frac{3}{8} = \frac{12}{24} + \frac{9}{24} = \frac{21}{24}$

**Ответы**

1. $\frac{2}{6}$

2. $\frac{7}{10}$

3. $\frac{1}{10}$

4. $\frac{20}{30}$

5. $\frac{1}{21}$

6. $\frac{25}{72}$

7. $\frac{2}{30}$

8. $1\frac{8}{35}$

9. $\frac{13}{45}$

10. $\frac{21}{24}$