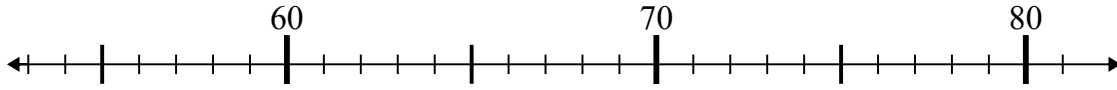




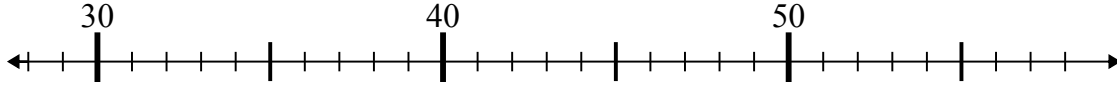
Используйте числовые прямые для решения примеров.

Отвѣты

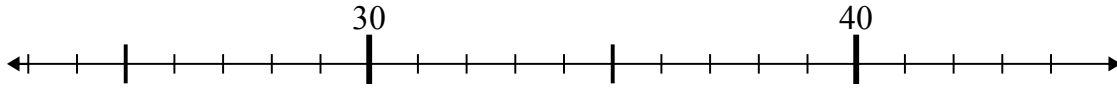
1) $65 - 2 =$



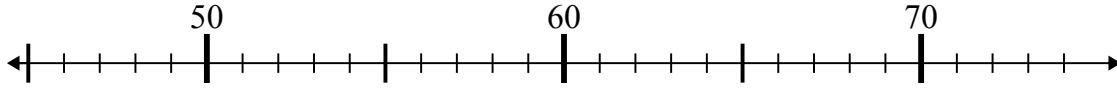
2) $39 - 2 =$



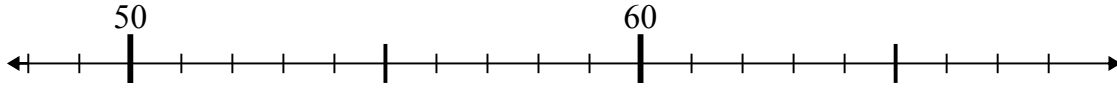
3) $28 + 3 =$



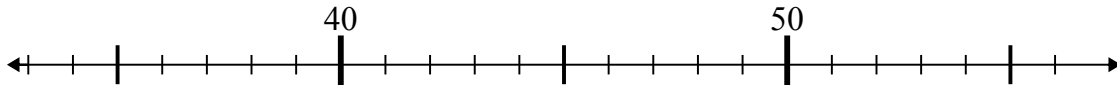
4) $51 - 6 =$



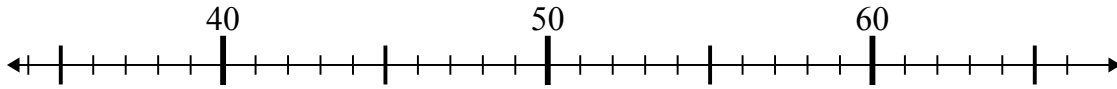
5) $61 - 4 =$



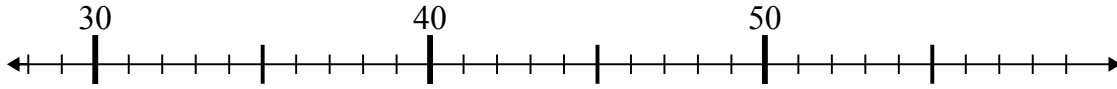
6) $42 - 3 =$



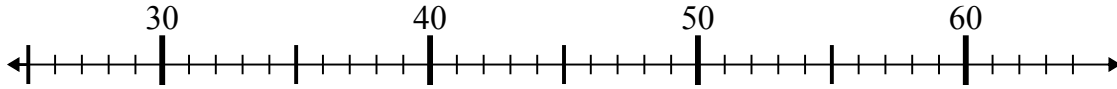
7) $60 - 25 =$



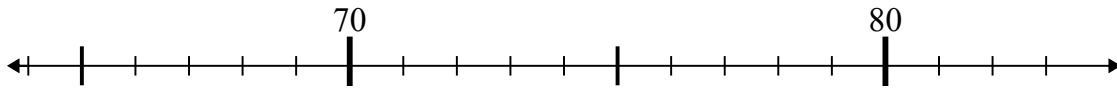
8) $47 + 4 =$



9) $51 - 9 =$



10) $69 + 0 =$

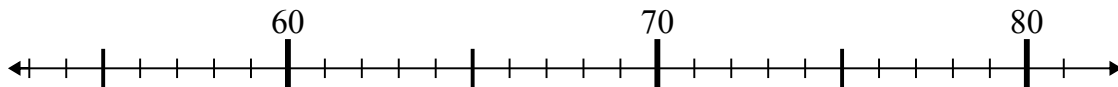


- 1. _____
- 2. _____
- 3. _____
- 4. _____
- 5. _____
- 6. _____
- 7. _____
- 8. _____
- 9. _____
- 10. _____

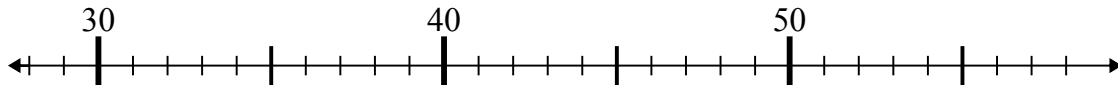


Используйте числовые прямые для решения примеров.

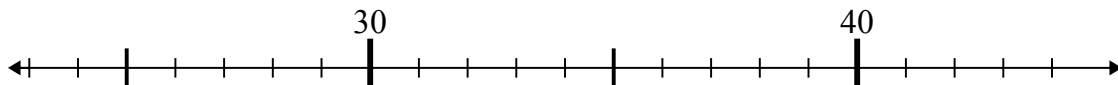
1) $65 - 2 =$



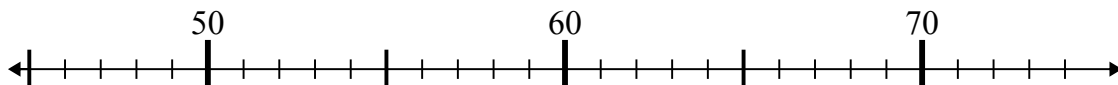
2) $39 - 2 =$



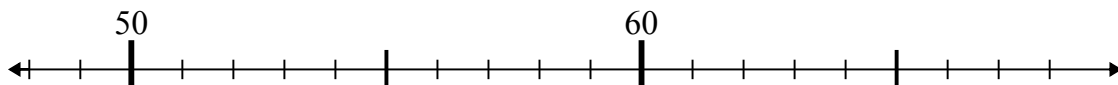
3) $28 + 3 =$



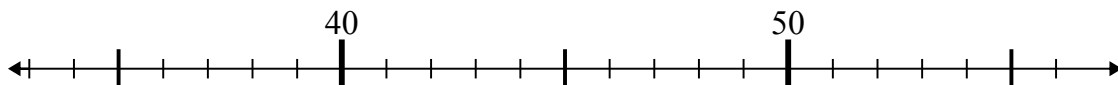
4) $51 - 6 =$



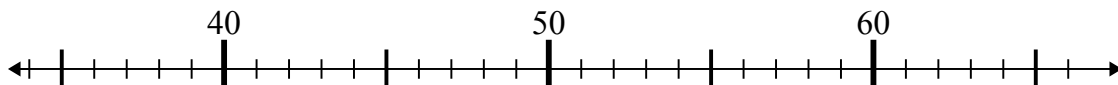
5) $61 - 4 =$



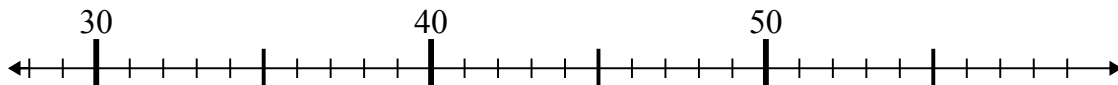
6) $42 - 3 =$



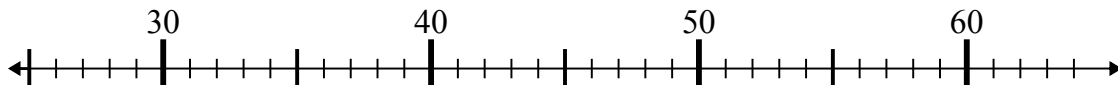
7) $60 - 25 =$



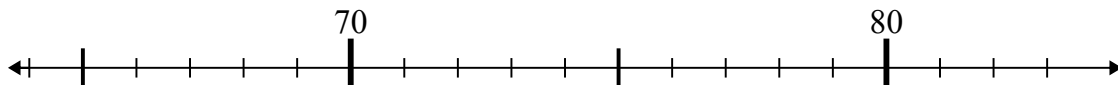
8) $47 + 4 =$



9) $51 - 9 =$



10) $69 + 0 =$

Ответы1. 632. 373. 314. 455. 576. 397. 358. 519. 4210. 69