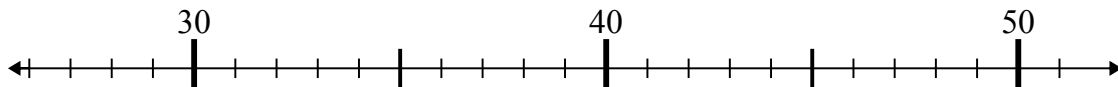




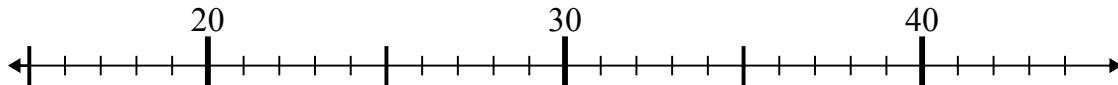
Используйте числовые прямые для решения примеров.

**Ответы**

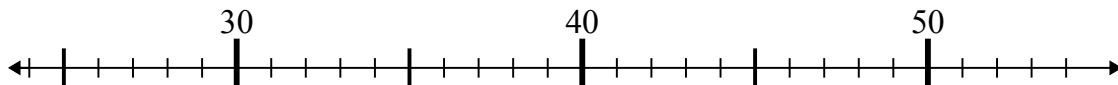
1)  $32 - 5 =$



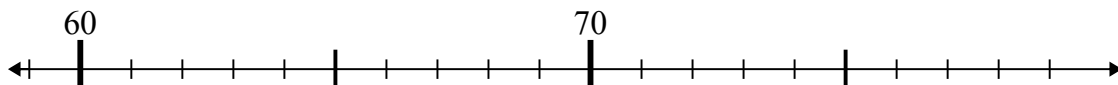
2)  $16 + 7 =$



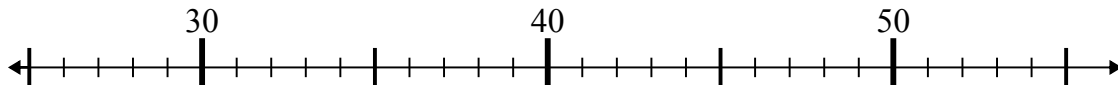
3)  $25 + 12 =$



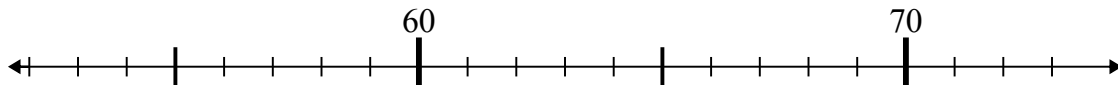
4)  $75 - 14 =$



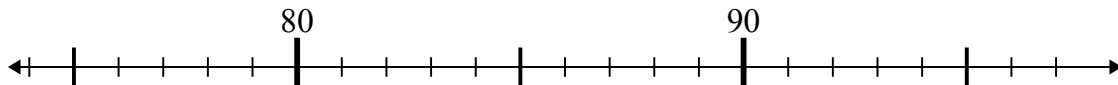
5)  $28 + 26 =$



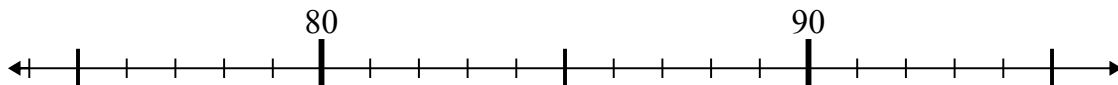
6)  $65 - 10 =$



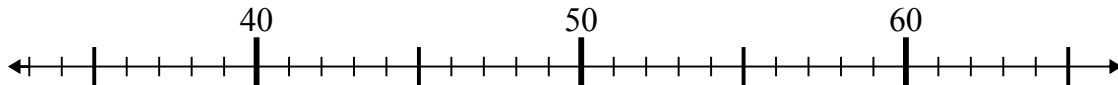
7)  $81 - 2 =$



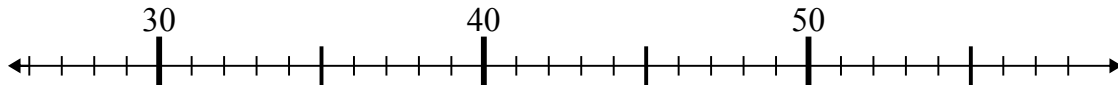
8)  $95 - 8 =$



9)  $48 - 11 =$



10)  $32 + 18 =$

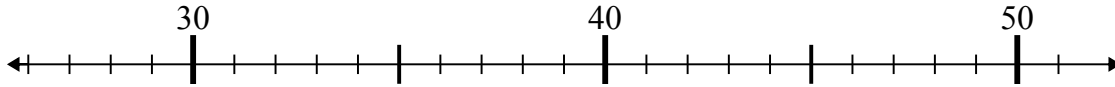


1. \_\_\_\_\_
2. \_\_\_\_\_
3. \_\_\_\_\_
4. \_\_\_\_\_
5. \_\_\_\_\_
6. \_\_\_\_\_
7. \_\_\_\_\_
8. \_\_\_\_\_
9. \_\_\_\_\_
10. \_\_\_\_\_

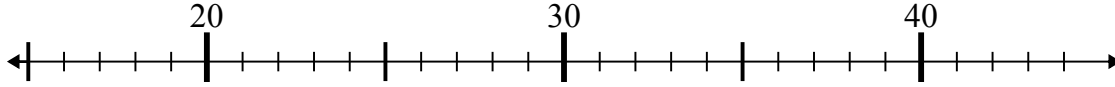


Используйте числовые прямые для решения примеров.

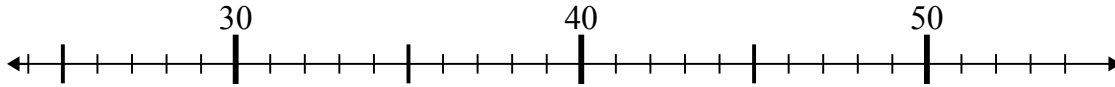
1)  $32 - 5 =$



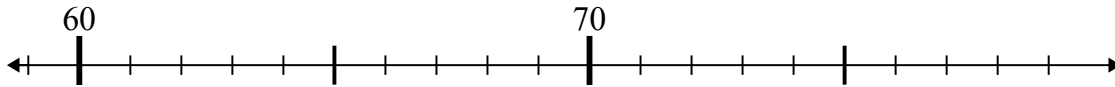
2)  $16 + 7 =$



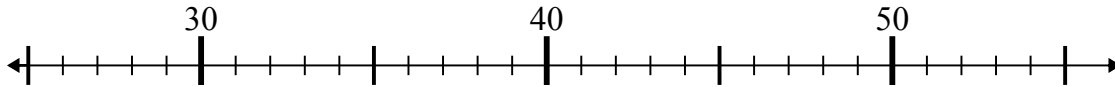
3)  $25 + 12 =$



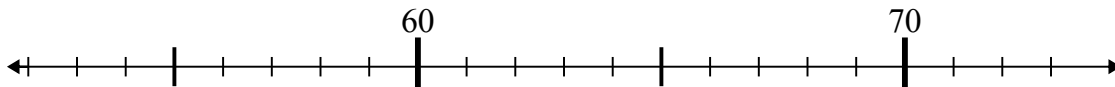
4)  $75 - 14 =$



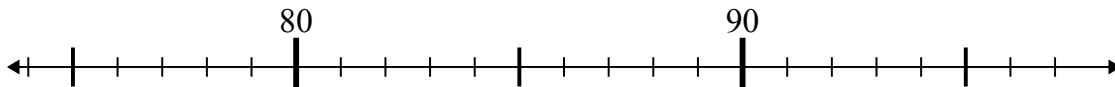
5)  $28 + 26 =$



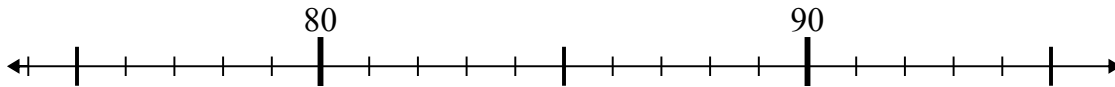
6)  $65 - 10 =$



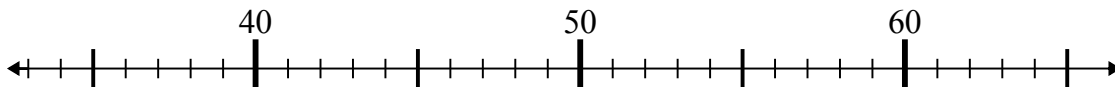
7)  $81 - 2 =$



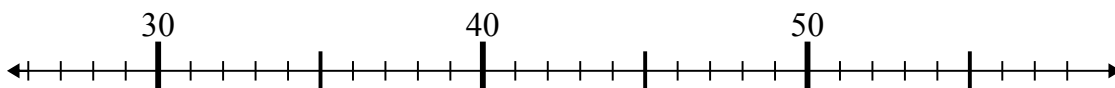
8)  $95 - 8 =$



9)  $48 - 11 =$



10)  $32 + 18 =$

Ответы1. 272. 233. 374. 615. 546. 557. 798. 879. 3710. 50