
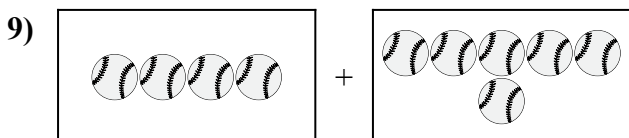
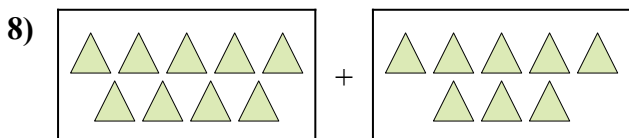
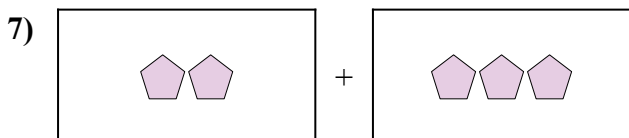
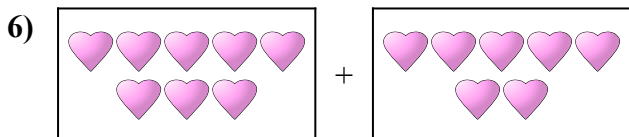
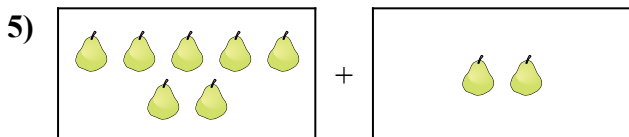

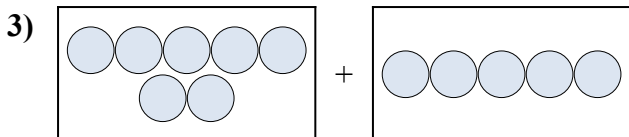
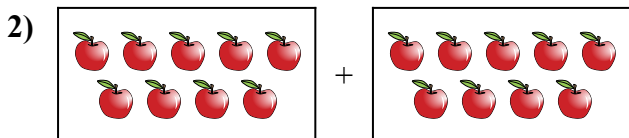
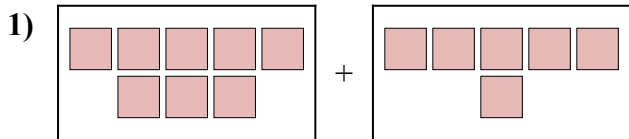




Выразите визуальную проблему в виде уравнения с ответом.


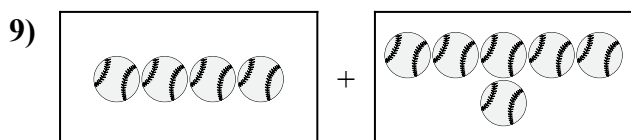
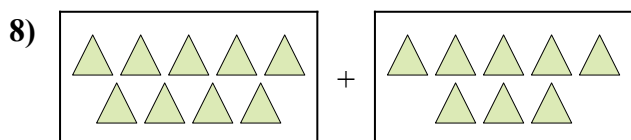
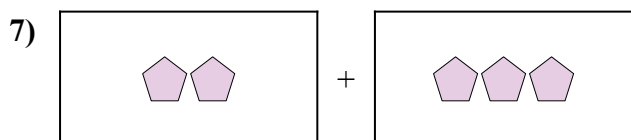
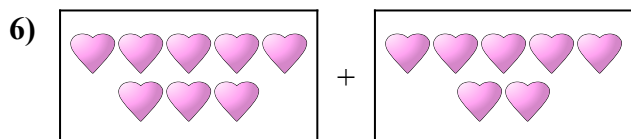
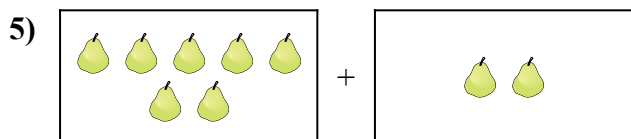

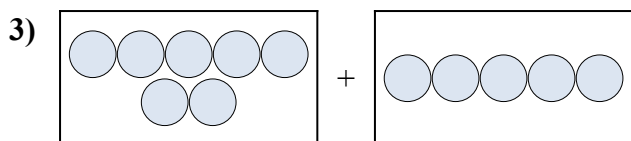
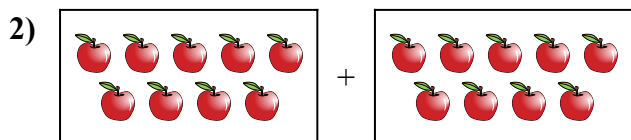
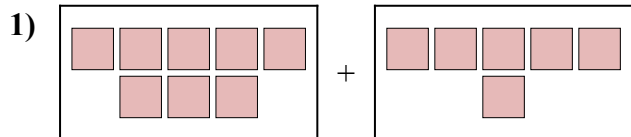
Ответы



1. _____
2. _____
3. _____
4. _____
5. _____
6. _____
7. _____
8. _____
9. _____
10. _____



Выразите визуальную проблему в виде уравнения с ответом.

**ОТВЕТЫ**

1. $8 + 6 = 14$

2. $9 + 9 = 18$

3. $7 + 5 = 12$

4. $6 + 7 = 13$

5. $7 + 2 = 9$

6. $8 + 7 = 15$

7. $2 + 3 = 5$

8. $9 + 8 = 17$

9. $4 + 6 = 10$

10. $6 + 4 = 10$