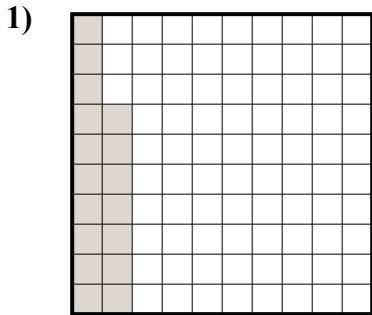


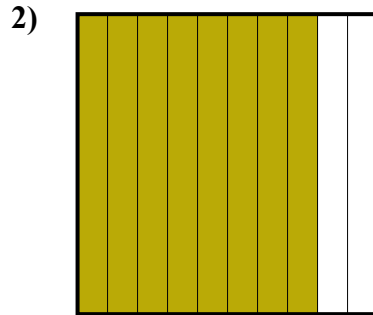


Определите под какой буквой показано значение закрашенного к целому.

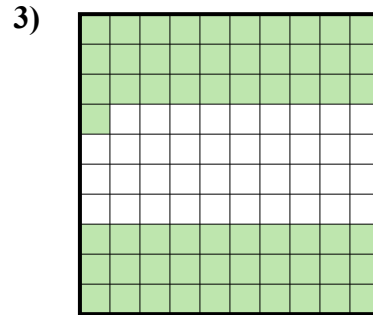
ОТВЕТЫ



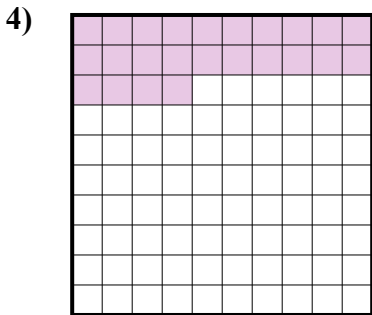
- A. 170,0
- B. 0,017
- C. 1,7
- D. 0,17



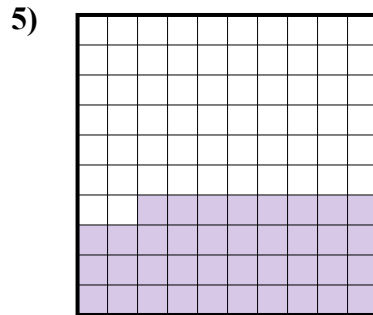
- A. 0,8
- B. 800,0
- C. 8
- D. 800,00



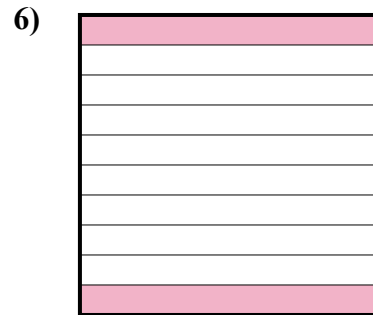
- A. 61
- B. 610,00
- C. 0,61
- D. 6,1



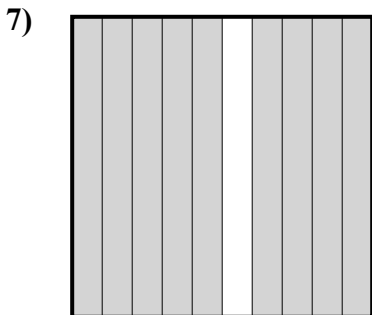
- A. 0,24
- B. 240,0
- C. 24
- D. 2,4



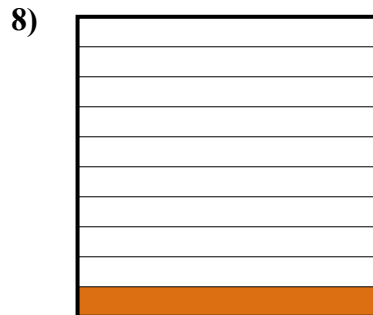
- A. 0,038
- B. 380,00
- C. 3,8
- D. 0,38



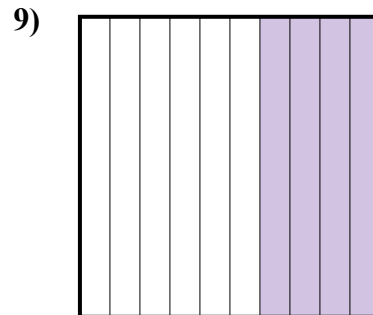
- A. 20
- B. 0,2
- C. 200,0
- D. 200,00



- A. 90
- B. 0,09
- C. 9
- D. 0,9



- A. 0,1
- B. 100,0
- C. 1
- D. 10



- A. 40
- B. 400,00
- C. 0,04
- D. 0,4

1. _____

2. _____

3. _____

4. _____

5. _____

6. _____

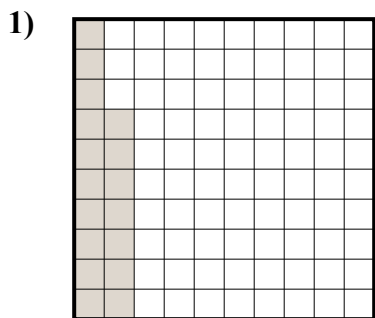
7. _____

8. _____

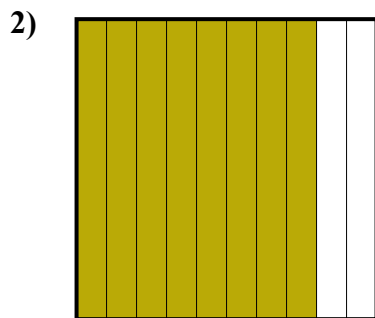
9. _____



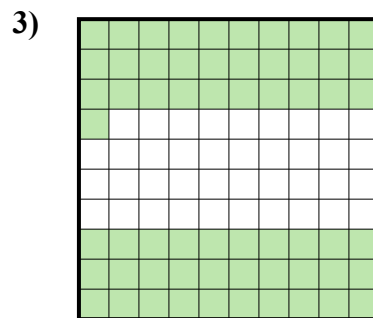
Определите под какой буквой показано значение закрашенного к целому.



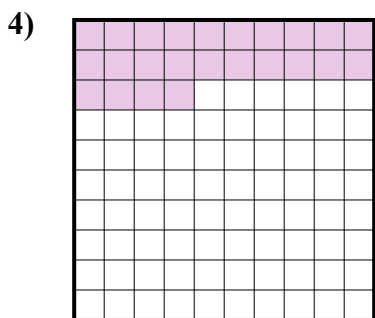
- A. 170,0
- B. 0,017
- C. 1,7
- D. 0,17



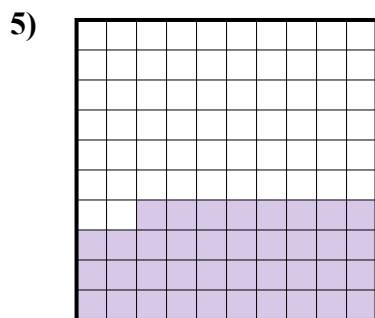
- A. 0,8
- B. 800,0
- C. 8
- D. 800,00




- A. 61
- B. 610,00
- C. 0,61
- D. 6,1



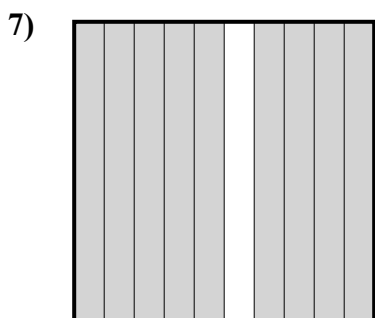
- A. 0,24
- B. 240,0
- C. 24
- D. 2,4




- A. 0,038
- B. 380,00
- C. 3,8
- D. 0,38



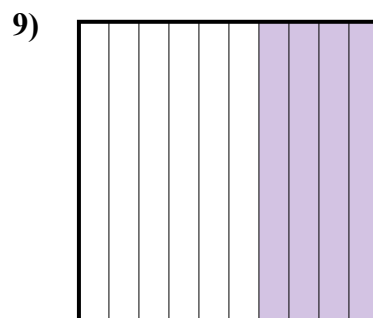
- A. 20
- B. 0,2
- C. 200,0
- D. 200,00



- A. 90
- B. 0,09
- C. 9
- D. 0,9



- A. 0,1
- B. 100,0
- C. 1
- D. 10



- A. 40
- B. 400,00
- C. 0,04
- D. 0,4

ОТВЕТЫ

1. **D**

2. **A**

3. **C**

4. **A**

5. **D**

6. **B**

7. **D**

8. **A**

9. **D**