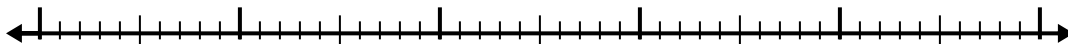


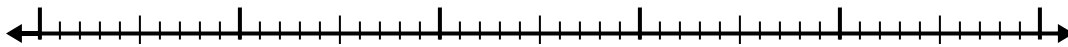


Используйте числовую линию для решения каждой проблемы.

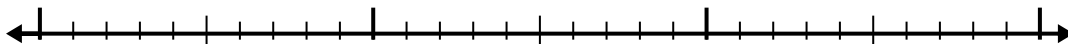
1) $9,1 - 3,1 =$



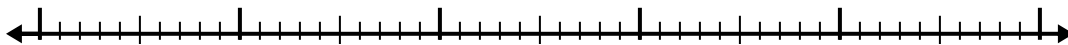
2) $11,8 - 3,1 =$



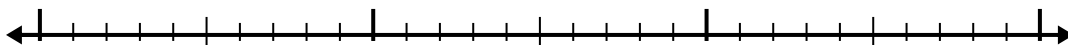
3) $7,3 - 1,1 =$



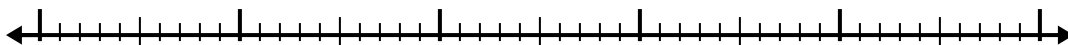
4) $8,8 - 2,5 =$




5) $6,9 - 1,6 =$




6) $10,1 - 2,9 =$



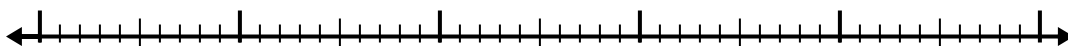
7) $10,3 - 1,7 =$



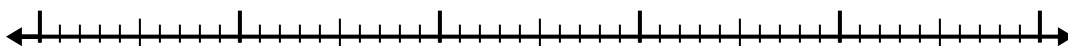
8) $9 - 3,9 =$



9) $8,1 - 2,7 =$



10) $7,3 - 3,7 =$



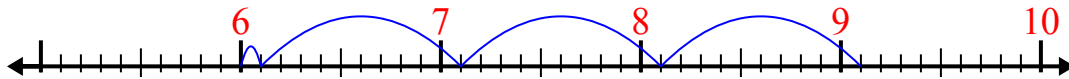
Отвeты

- 1. _____
- 2. _____
- 3. _____
- 4. _____
- 5. _____
- 6. _____
- 7. _____
- 8. _____
- 9. _____
- 10. _____

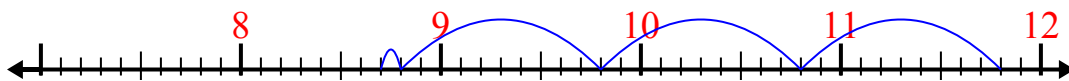


Используйте числовую линию для решения каждой проблемы.

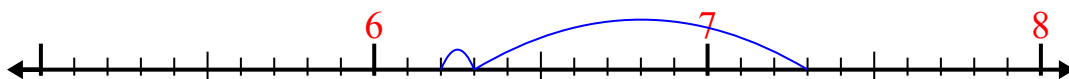
1) $9,1 - 3,1 =$



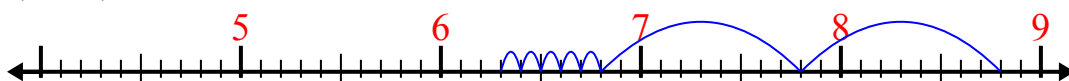
2) $11,8 - 3,1 =$



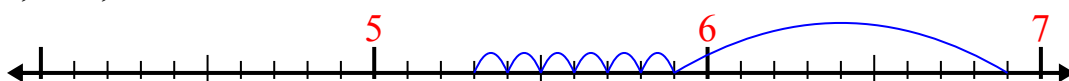
3) $7,3 - 1,1 =$



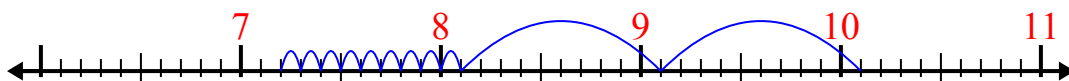
4) $8,8 - 2,5 =$



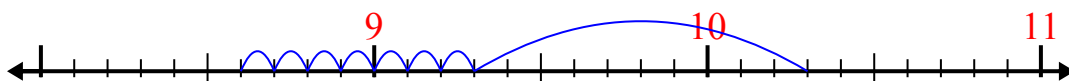
5) $6,9 - 1,6 =$



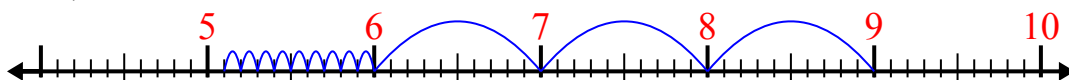
6) $10,1 - 2,9 =$



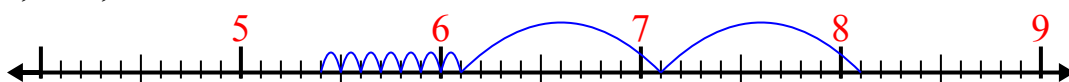
7) $10,3 - 1,7 =$



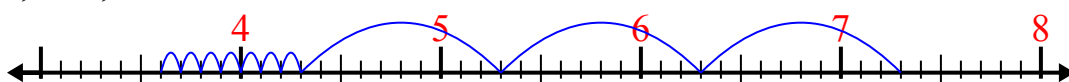
8) $9 - 3,9 =$



9) $8,1 - 2,7 =$



10) $7,3 - 3,7 =$



Ответы

1. 6

2. 8,7

3. 6,2

4. 6,3

5. 5,3

6. 7,2

7. 8,6

8. 5,1

9. 5,4

10. 3,6