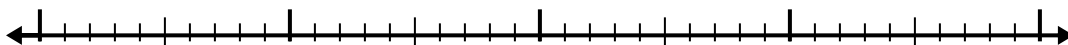


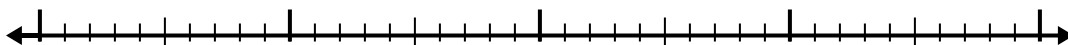


Используйте числовую линию для решения каждой проблемы.

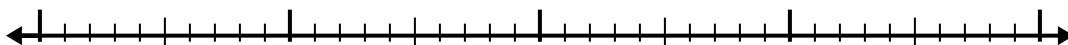
1)  $7,8 - 1,7 =$



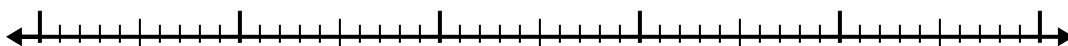
2)  $4,1 - 1,3 =$



3)  $6,9 - 1,3 =$



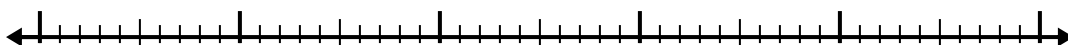
4)  $11,2 - 3,7 =$



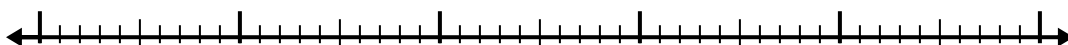
5)  $10,7 - 2,9 =$




6)  $5,9 - 2,5 =$




7)  $9,4 - 2,7 =$



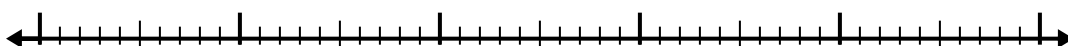
8)  $5,4 - 3,3 =$



9)  $2,7 - 1,7 =$



10)  $6,1 - 3,1 =$



Ответы

1. \_\_\_\_\_

2. \_\_\_\_\_

3. \_\_\_\_\_

4. \_\_\_\_\_

5. \_\_\_\_\_

6. \_\_\_\_\_

7. \_\_\_\_\_

8. \_\_\_\_\_

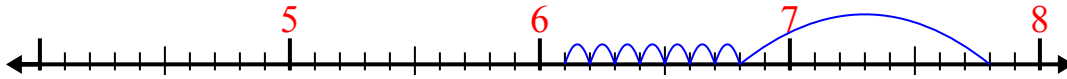
9. \_\_\_\_\_

10. \_\_\_\_\_

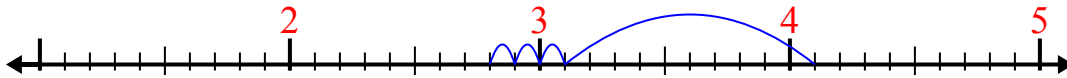


Используйте числовую линию для решения каждой проблемы.

1)  $7,8 - 1,7 =$



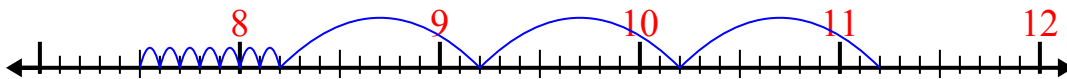
2)  $4,1 - 1,3 =$



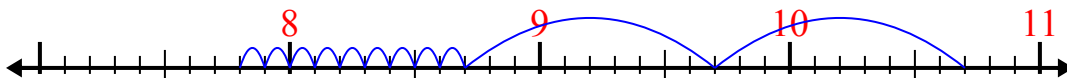
3)  $6,9 - 1,3 =$



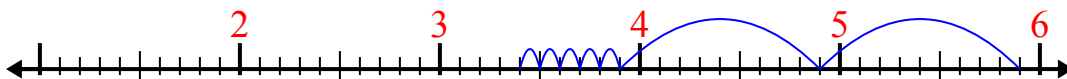
4)  $11,2 - 3,7 =$



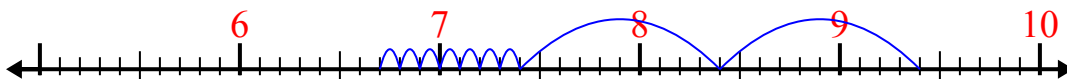
5)  $10,7 - 2,9 =$



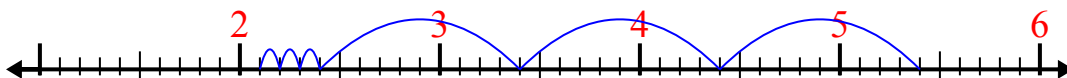
6)  $5,9 - 2,5 =$



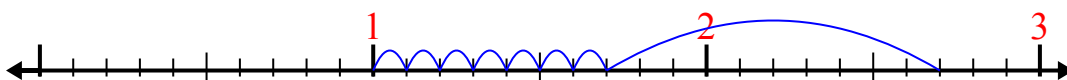
7)  $9,4 - 2,7 =$



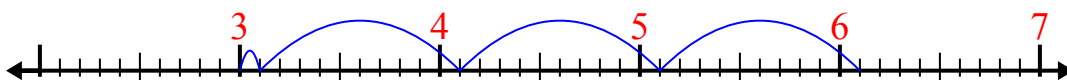
8)  $5,4 - 3,3 =$



9)  $2,7 - 1,7 =$



10)  $6,1 - 3,1 =$



**Ответы**

1. 6,1
2. 2,8
3. 5,6
4. 7,5
5. 7,8
6. 3,4
7. 6,7
8. 2,1
9. 1
10. 3