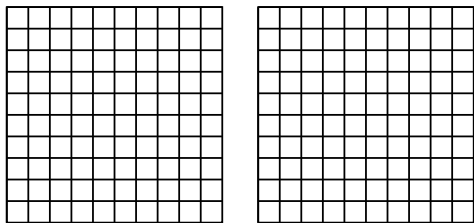




Используйте визуальную модель, чтобы решить задачу.

ОТВЕТЫ

1) $2 \times 0,39 =$

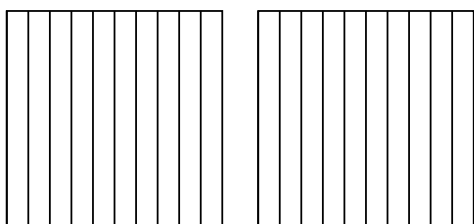


1. _____

2. _____

3. _____

2) $2 \times 0,4 =$

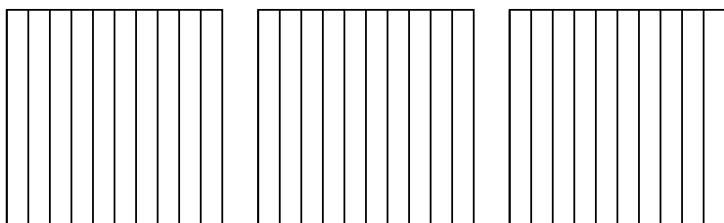


4. _____

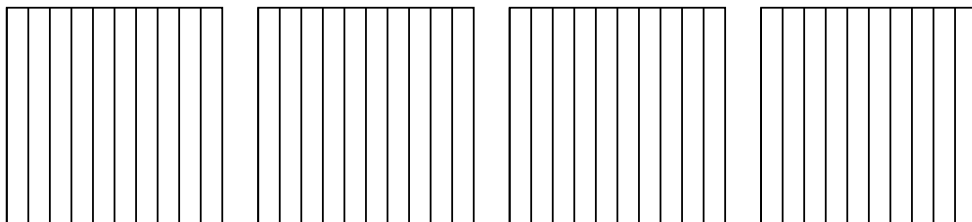
5. _____

6. _____


3) $3 \times 0,3 =$



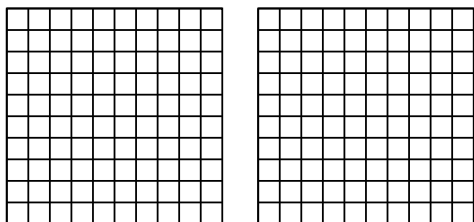
4) $4 \times 0,9 =$



5) $3 \times 0,90 =$



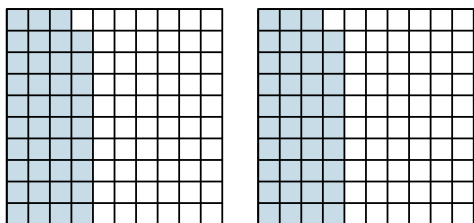
6) $2 \times 0,66 =$



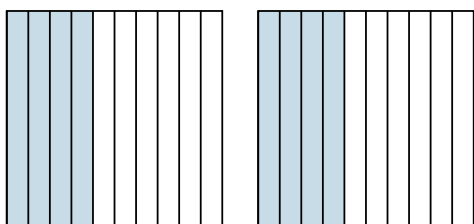


Используйте визуальную модель, чтобы решить задачу.


1) $2 \times 0,39 =$



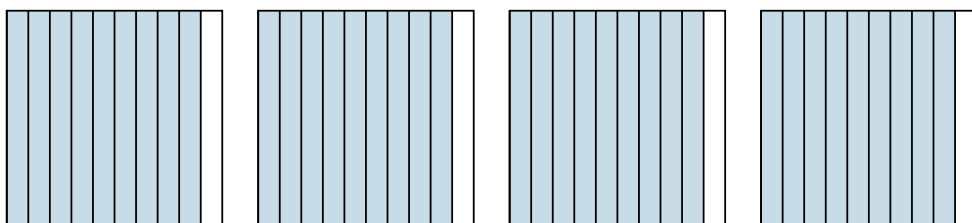
2) $2 \times 0,4 =$



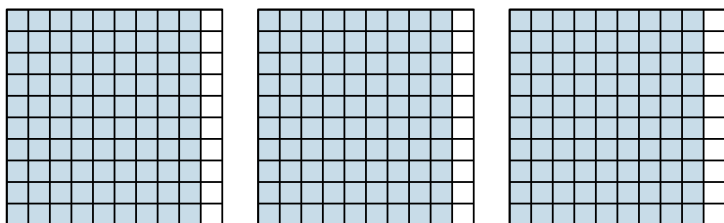
3) $3 \times 0,3 =$



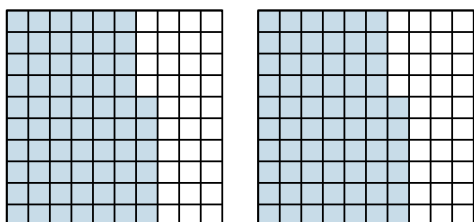
4) $4 \times 0,9 =$



5) $3 \times 0,90 =$



6) $2 \times 0,66 =$



ОТВЕТЫ

1. $\frac{78}{100} = 0,78$

2. $\frac{8}{10} = 0,8$

3. $\frac{9}{10} = 0,9$

4. $\frac{36}{10} = 3,6$

5. $\frac{270}{100} = 2,7$

6. $\frac{132}{100} = 1,32$