



Используйте блок слева для нахождения значения наборов блоков справа.

ОТВЕТЫ

1) = 1

1. _____

2) = 1

2. _____

3) = 1

3. _____

4) = 1

4. _____

5) = 1

5. _____

6) = 1

6. _____

7) = 1

7. _____

8) = 1

8. _____

9) = 1

9. _____

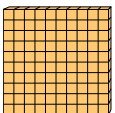
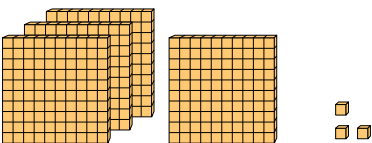
10) = 1

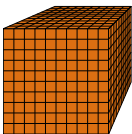
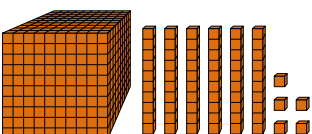
10. _____

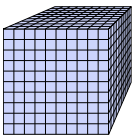
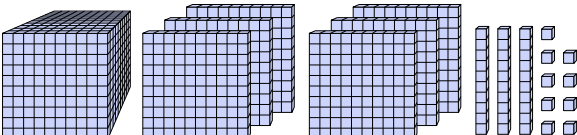


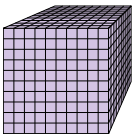
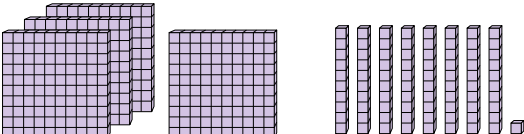
Используйте блок слева для нахождения значения наборов блоков справа.

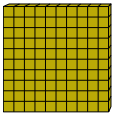
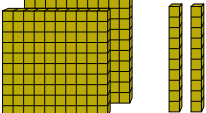
Ответы

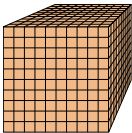
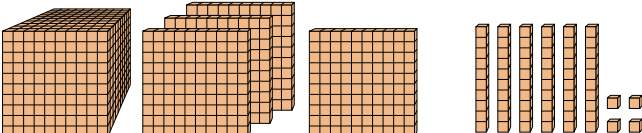
1)  = 1 

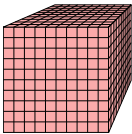
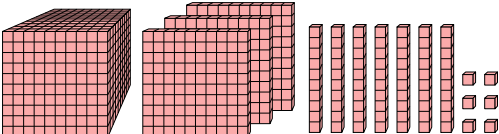
2)  = 1 


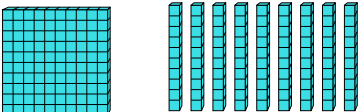
3)  = 1 


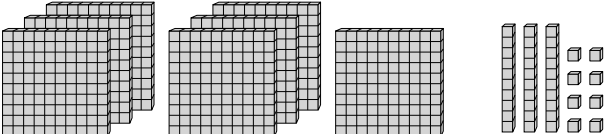
4)  = 1 

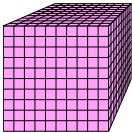

5)  = 1 

6)  = 1 

7)  = 1 

8)  = 1 

9)  = 1 

10)  = 1 

1. 4,03
2. 1,065
3. 1,639
4. 0,481
5. 2,2
6. 1,464
7. 1,376
8. 1,9
9. 7,38
10. 0,101