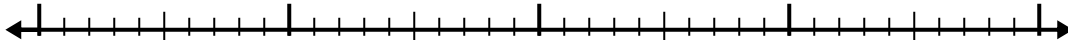


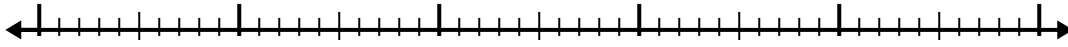


Используйте числовую линию для решения каждой проблемы.

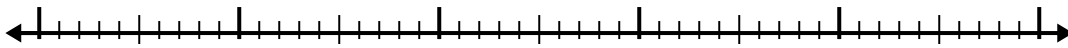
1)  $2.7 + 2.5 =$



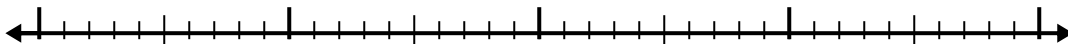
2)  $8.1 + 2.7 =$



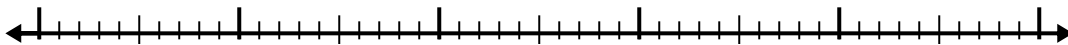
3)  $5.6 + 3.6 =$



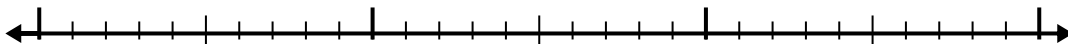
4)  $6.9 + 1.4 =$



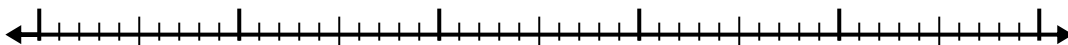
5)  $1 + 3.3 =$



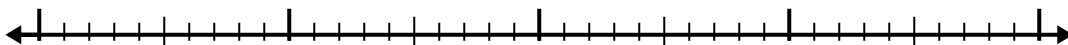
6)  $1.8 + 1.4 =$




7)  $3.6 + 3.1 =$



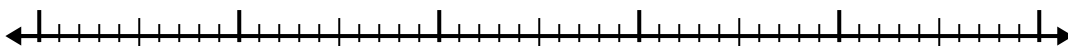
8)  $2.9 + 1.2 =$



9)  $3.4 + 1.3 =$



10)  $2.7 + 2.5 =$



Ответы

1. \_\_\_\_\_

2. \_\_\_\_\_

3. \_\_\_\_\_

4. \_\_\_\_\_

5. \_\_\_\_\_

6. \_\_\_\_\_

7. \_\_\_\_\_

8. \_\_\_\_\_

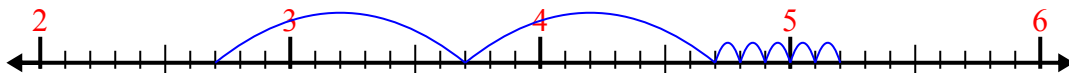
9. \_\_\_\_\_

10. \_\_\_\_\_

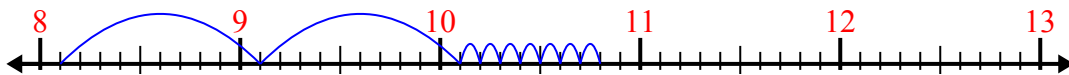


Используйте числовую линию для решения каждой проблемы.

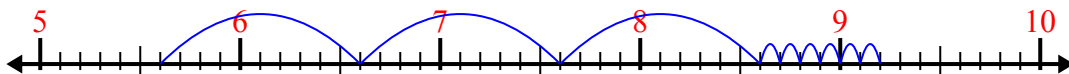
1)  $2.7 + 2.5 =$



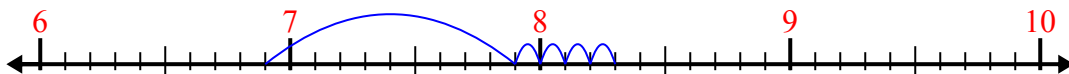
2)  $8.1 + 2.7 =$



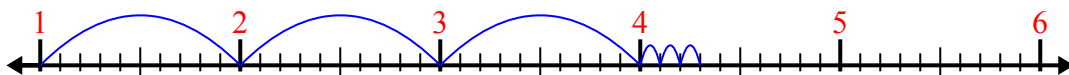
3)  $5.6 + 3.6 =$




4)  $6.9 + 1.4 =$



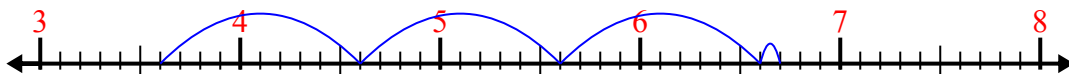
5)  $1 + 3.3 =$



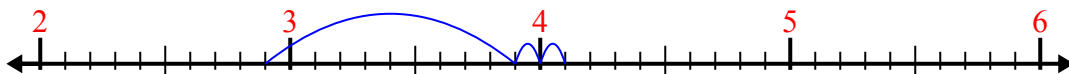
6)  $1.8 + 1.4 =$



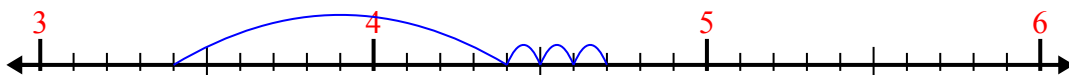
7)  $3.6 + 3.1 =$



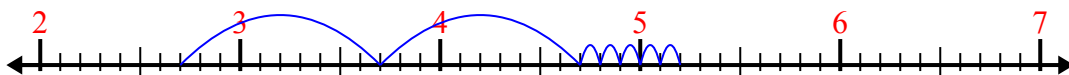
8)  $2.9 + 1.2 =$



9)  $3.4 + 1.3 =$



10)  $2.7 + 2.5 =$



**ОТВЕТЫ**

1. 5,2

2. 10,8

3. 9,2

4. 8,3

5. 4,3

6. 3,2

7. 6,7

8. 4,1

9. 4,7

10. 5,2