
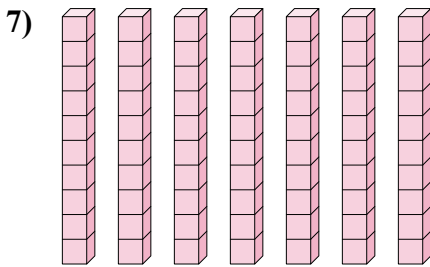
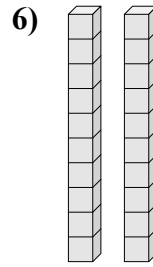
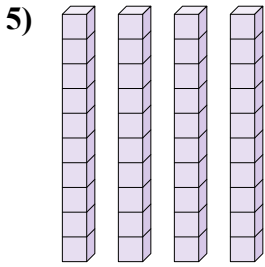
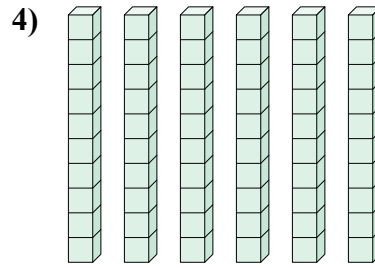
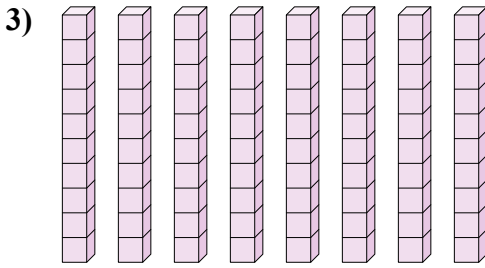
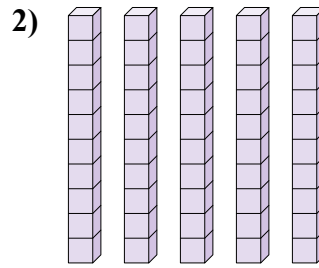
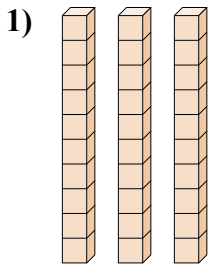




Найдите количество десятков. Затем определите общее число маленьких блоков.


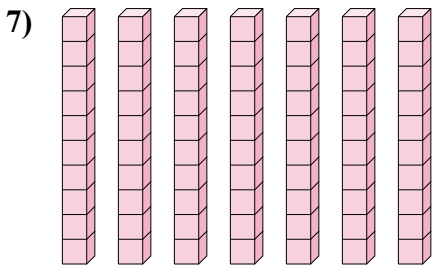
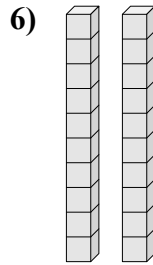
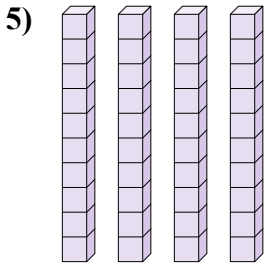
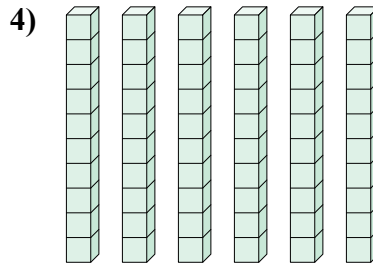
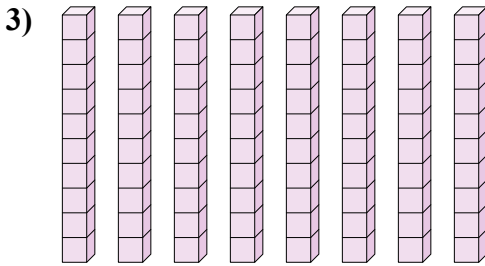
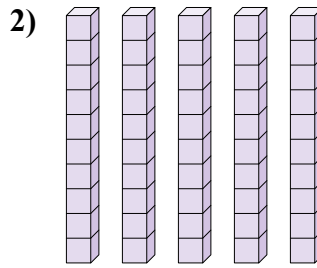
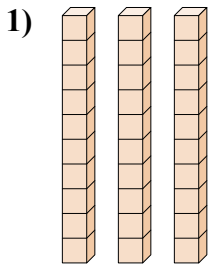


ОТВЕТЫ

- 1. \_\_\_\_\_
- 2. \_\_\_\_\_
- 3. \_\_\_\_\_
- 4. \_\_\_\_\_
- 5. \_\_\_\_\_
- 6. \_\_\_\_\_
- 7. \_\_\_\_\_
- 8. \_\_\_\_\_



Найдите количество десятков. Затем определите общее число маленьких блоков.



**ОТВЕТЫ**

- 1.   3       30
- 2.   5       50
- 3.   8       80
- 4.   6       60
- 5.   4       40
- 6.   2       20
- 7.   7       70
- 8.   9       90