




Решите каждую задачу.


1) $47\,736 + 5\,081 =$



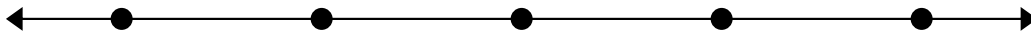
2) $30\,542 + 10\,860 =$




3) $63\,295 + 36\,641 =$



4) $92\,707 + 6\,799 =$




5) $79\,303 + 14\,672 =$




6) $43\,744 + 40\,900 =$



7) $66\,473 + 16\,809 =$



8) $21\,480 + 14\,844 =$



Отвeты

1. _____

2. _____

3. _____

4. _____

5. _____

6. _____

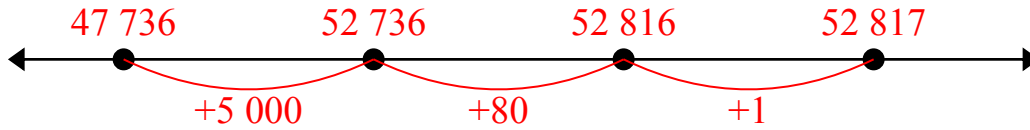
7. _____

8. _____

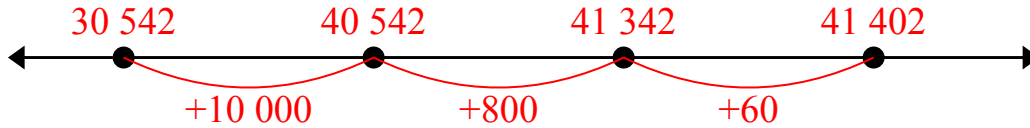


Решите каждую задачу.

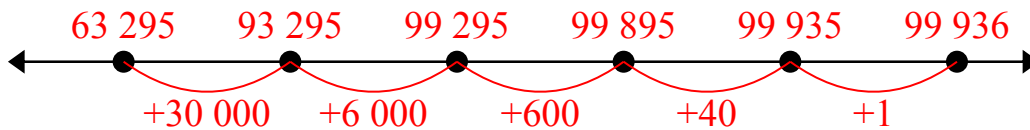
1) $47\,736 + 5\,081 =$



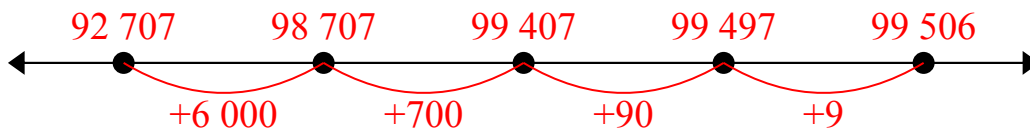
2) $30\,542 + 10\,860 =$



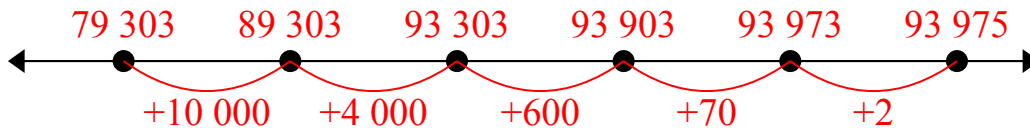
3) $63\,295 + 36\,641 =$



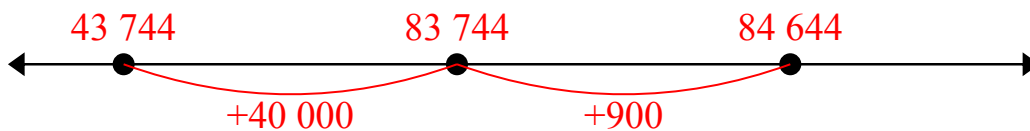
4) $92\,707 + 6\,799 =$



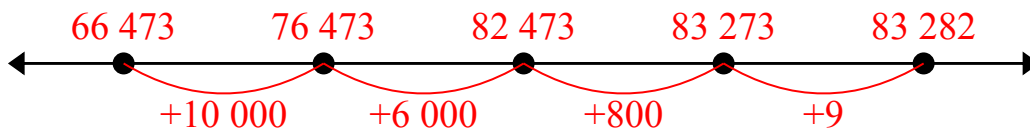
5) $79\,303 + 14\,672 =$



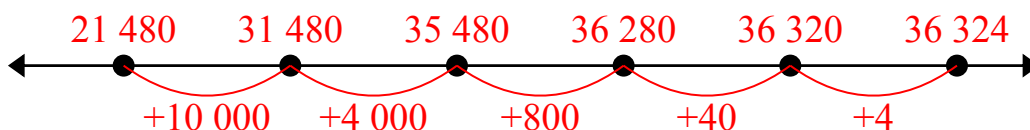
6) $43\,744 + 40\,900 =$



7) $66\,473 + 16\,809 =$



8) $21\,480 + 14\,844 =$

**Ответы**

1. 52 817
2. 41 402
3. 99 936
4. 99 506
5. 93 975
6. 84 644
7. 83 282
8. 36 324