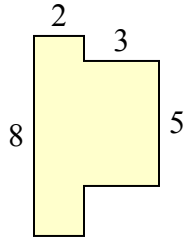


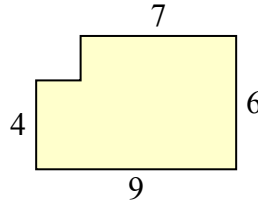


Определите общую площадь фигуры. Измерения в миллиметрах. Не шкала.

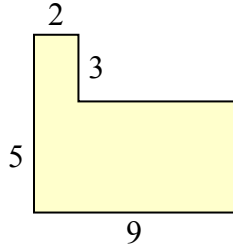
1)



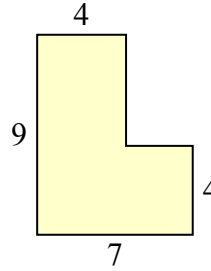
2)



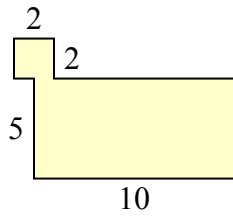
3)



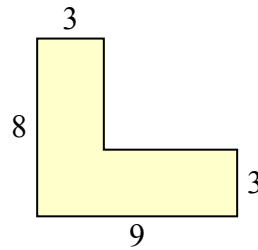
4)



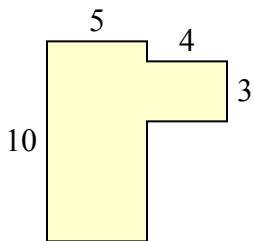
5)



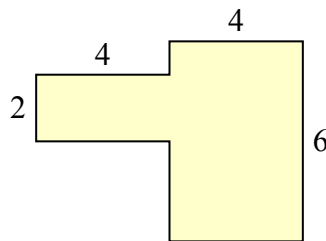
6)



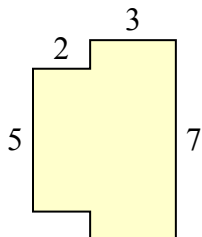
7)



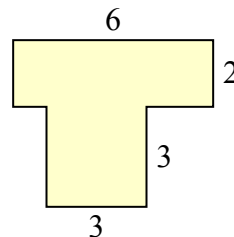
8)



9)



10)

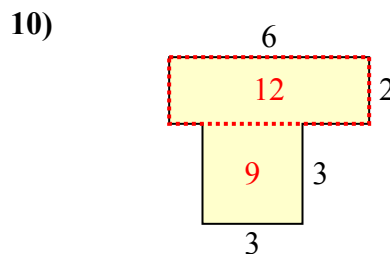
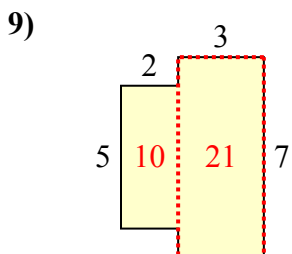
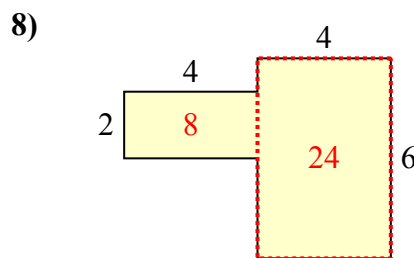
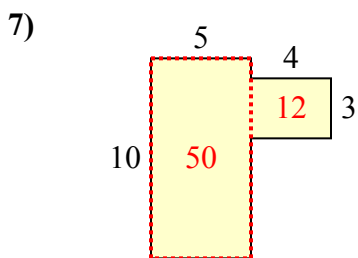
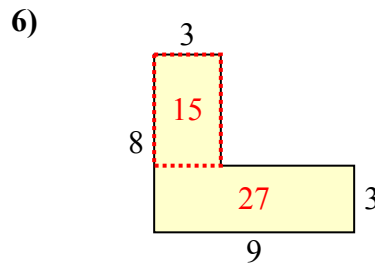
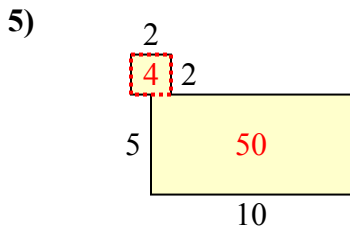
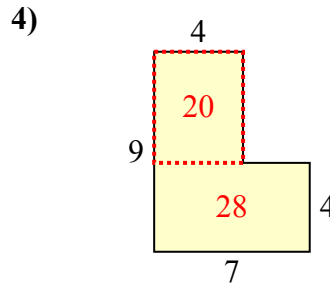
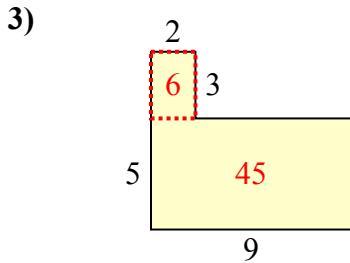
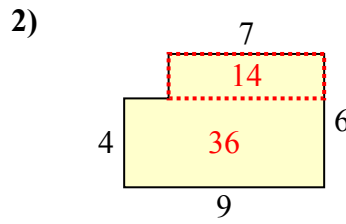
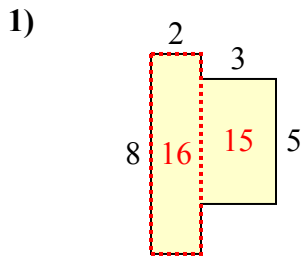


ОТВЕТЫ

1. _____
2. _____
3. _____
4. _____
5. _____
6. _____
7. _____
8. _____
9. _____
10. _____



Определите общую площадь фигуры. Измерения в миллиметрах. Не шкала.



ОТВЕТЫ

1. 31 mm²
2. 50 mm²
3. 51 mm²
4. 48 mm²
5. 54 mm²
6. 42 mm²
7. 62 mm²
8. 32 mm²
9. 31 mm²
10. 21 mm²