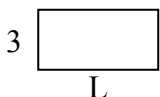


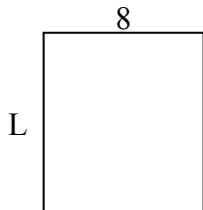


Определите значение 'L'

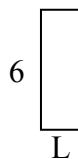
1) Площадь = $18u^2$



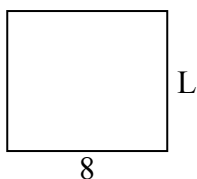
2) Площадь = $72u^2$



3) Площадь = $12u^2$



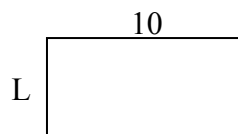
4) Площадь = $56u^2$



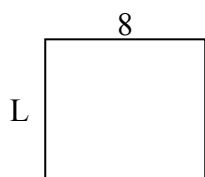
5) Площадь = $6u^2$



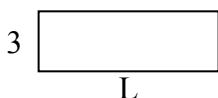
6) Площадь = $50u^2$



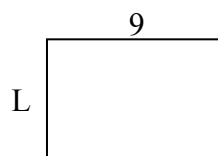
7) Площадь = $56u^2$



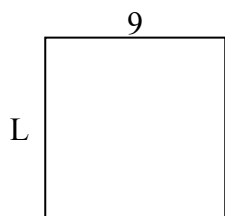
8) Площадь = $27u^2$



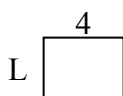
9) Площадь = $54u^2$



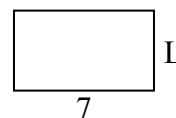
10) Площадь = $81u^2$



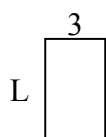
11) Площадь = $12u^2$




12) Площадь = $28u^2$



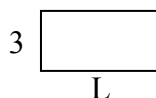
13) Площадь = $15u^2$



14) Площадь = $20u^2$



15) Площадь = $18u^2$



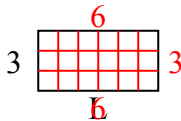
ОТВЕТЫ

1. _____
2. _____
3. _____
4. _____
5. _____
6. _____
7. _____
8. _____
9. _____
10. _____
11. _____
12. _____
13. _____
14. _____
15. _____

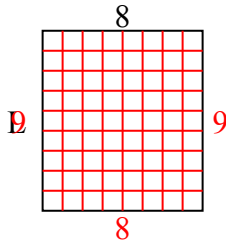


Определите значение 'L'

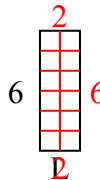
1) Площадь = $18u^2$



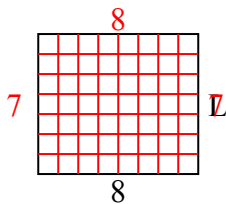
2) Площадь = $72u^2$



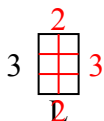
3) Площадь = $12u^2$



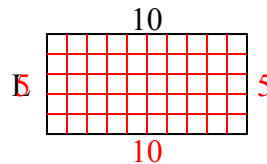
4) Площадь = $56u^2$



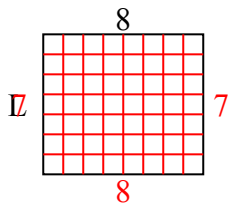
5) Площадь = $6u^2$



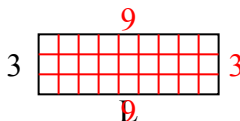
6) Площадь = $50u^2$



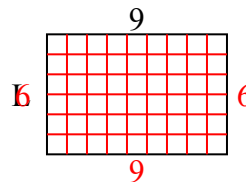
7) Площадь = $56u^2$



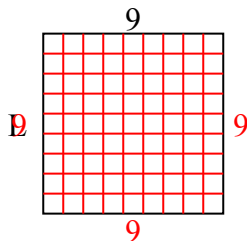
8) Площадь = $27u^2$



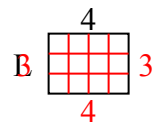
9) Площадь = $54u^2$



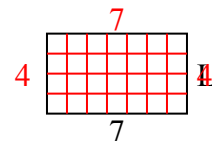
10) Площадь = $81u^2$



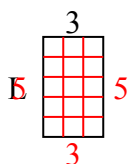
11) Площадь = $12u^2$



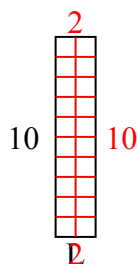
12) Площадь = $28u^2$



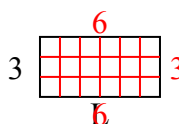
13) Площадь = $15u^2$



14) Площадь = $20u^2$



15) Площадь = $18u^2$



ОТВЕТЫ

1. 6

2. 9

3. 2

4. 7

5. 2

6. 5

7. 7

8. 9

9. 6

10. 9

11. 3

12. 4

13. 5

14. 2

15. 6