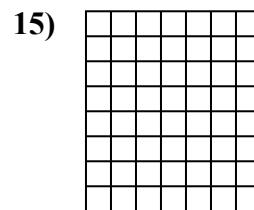
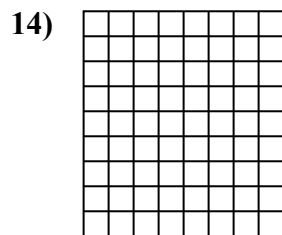
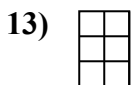
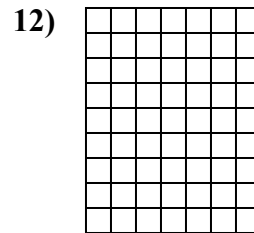
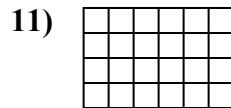
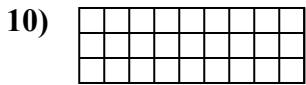
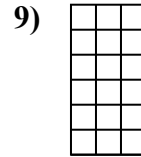
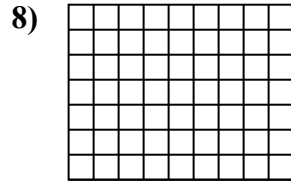
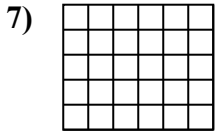
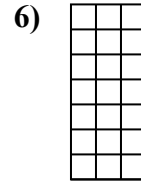
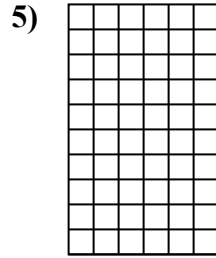
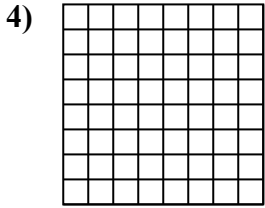

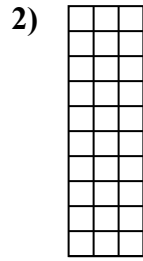
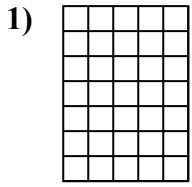




Определите площадь. Каждый блок= 1 единице (u²).



ОТВЕТЫ

1. _____

2. _____

3. _____

4. _____

5. _____

6. _____

7. _____

8. _____

9. _____

10. _____

11. _____

12. _____

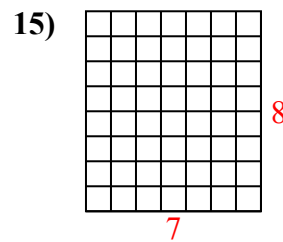
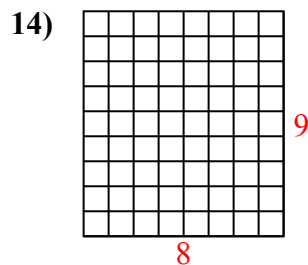
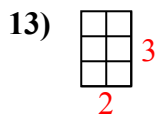
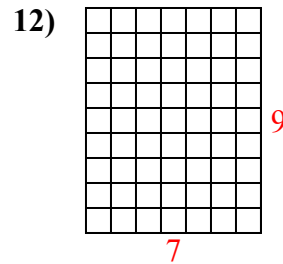
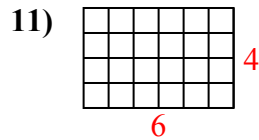
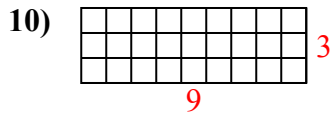
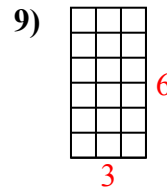
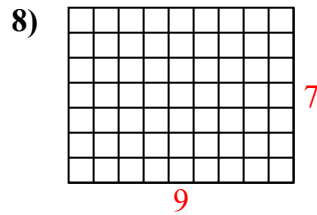
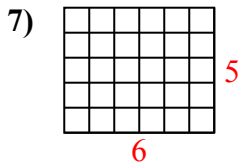
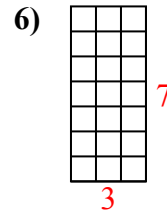
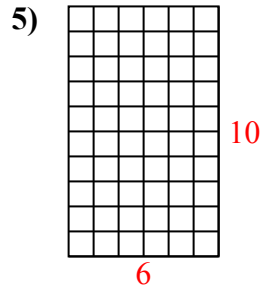
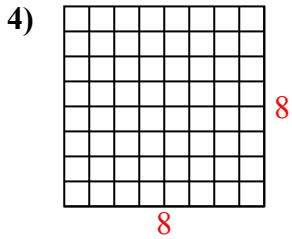
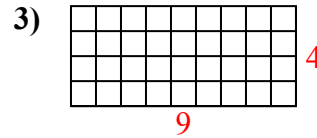
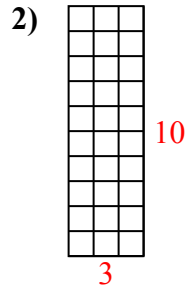
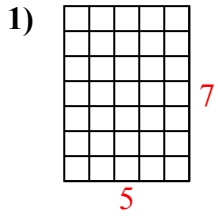
13. _____

14. _____

15. _____



Определите площадь. Каждый блок= 1 единице (u²).



ОТВЕТЫ

1. 35 u²

2. 30 u²

3. 36 u²

4. 64 u²

5. 60 u²

6. 21 u²

7. 30 u²

8. 63 u²

9. 18 u²

10. 27 u²

11. 24 u²

12. 63 u²

13. 6 u²

14. 72 u²

15. 56 u²