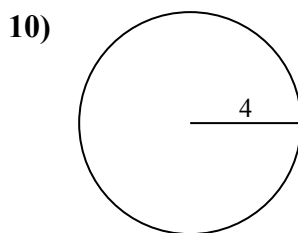
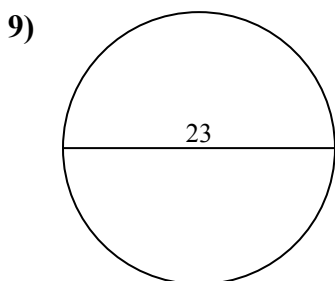
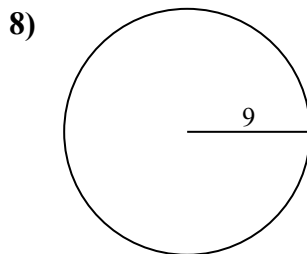
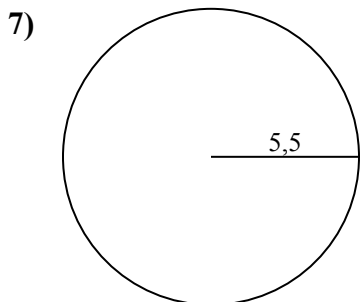
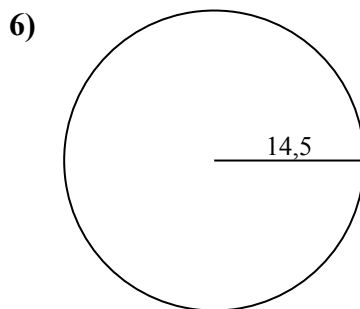
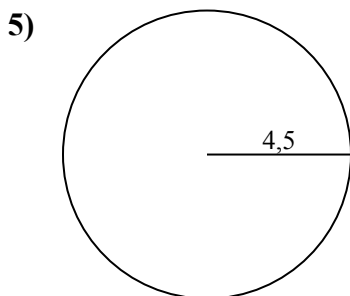
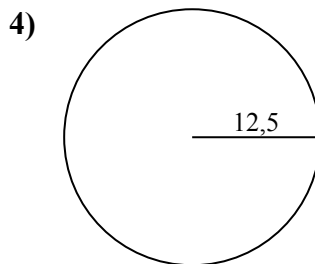
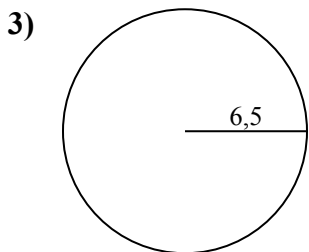
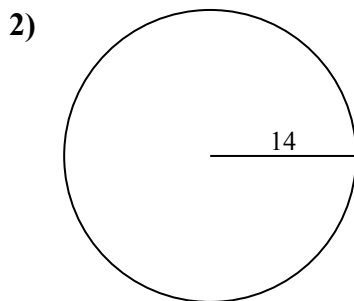
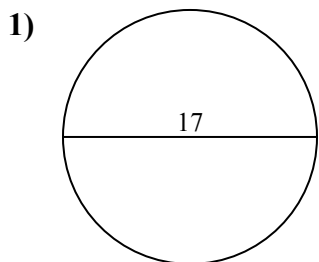




Определите окружность каждого круга. Круги не являются шкалой.

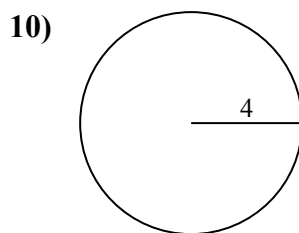
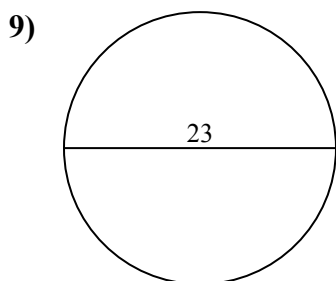
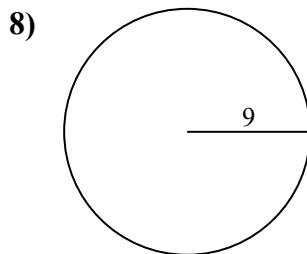
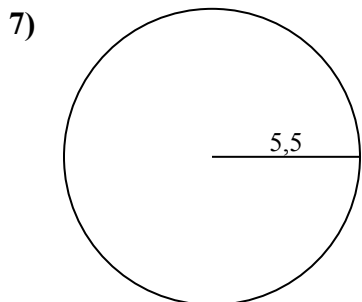
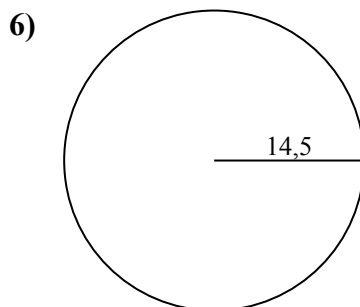
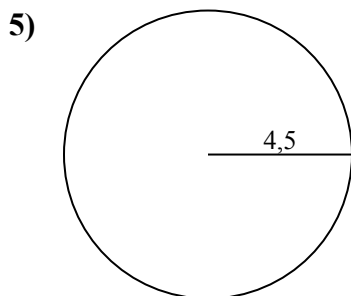
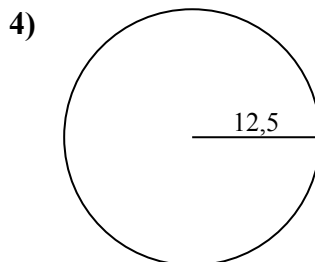
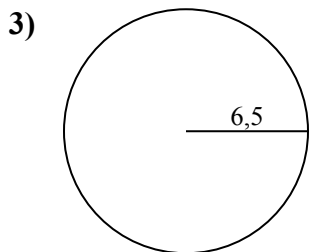
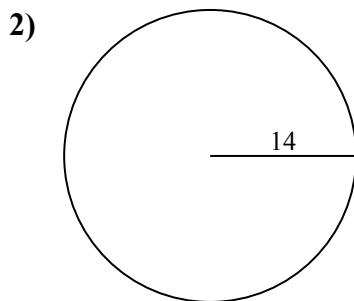
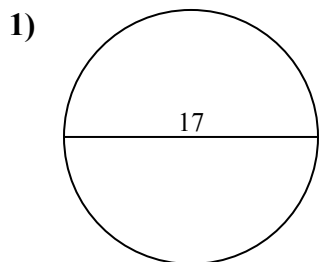


ОТВЕТЫ

- 1. \_\_\_\_\_
- 2. \_\_\_\_\_
- 3. \_\_\_\_\_
- 4. \_\_\_\_\_
- 5. \_\_\_\_\_
- 6. \_\_\_\_\_
- 7. \_\_\_\_\_
- 8. \_\_\_\_\_
- 9. \_\_\_\_\_
- 10. \_\_\_\_\_



Определите окружность каждого круга. Круги не являются шкалой.

**ОТВЕТЫ**

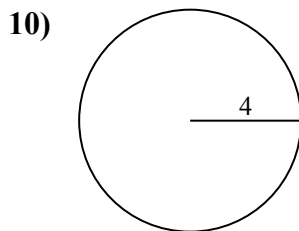
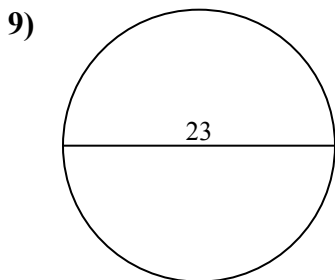
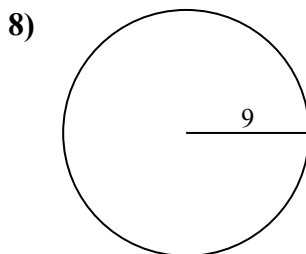
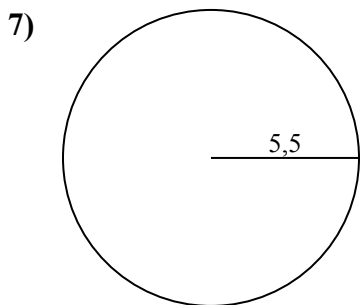
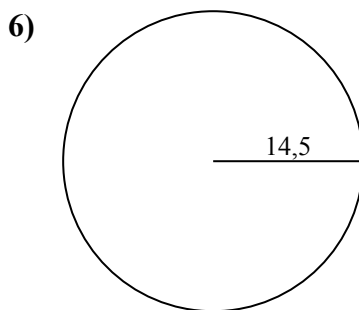
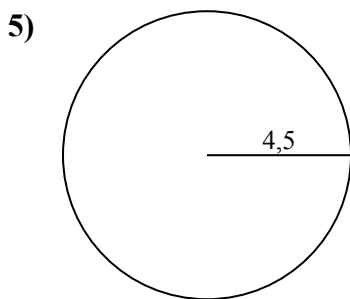
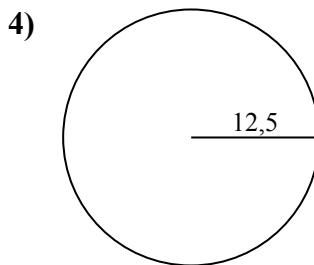
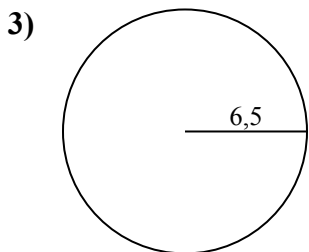
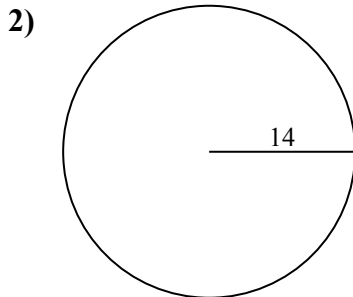
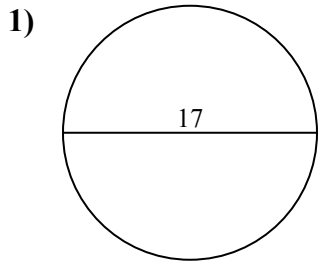
1. 53,41 см
2. 87,96 см
3. 40,84 см
4. 78,54 см
5. 28,27 см
6. 91,11 см
7. 34,56 см
8. 56,55 см
9. 72,26 см
10. 25,13 см



Определите окружность каждого круга. Круги не являются шкалой.

72,26 cm	40,84 cm	34,56 cm	53,41 cm	25,13 cm
28,27 cm	87,96 cm	78,54 cm	91,11 cm	56,55 cm

**ОТВЕТЫ**



- 1. \_\_\_\_\_
- 2. \_\_\_\_\_
- 3. \_\_\_\_\_
- 4. \_\_\_\_\_
- 5. \_\_\_\_\_
- 6. \_\_\_\_\_
- 7. \_\_\_\_\_
- 8. \_\_\_\_\_
- 9. \_\_\_\_\_
- 10. \_\_\_\_\_