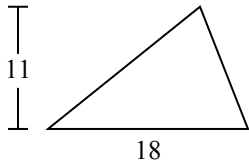




Определите площадь каждого треугольника. Единицы не являются шкалами.

ОТВЕТЫ

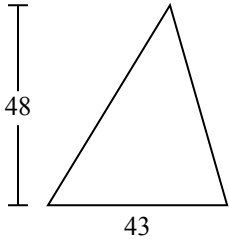
1)



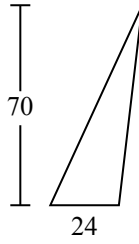
2)



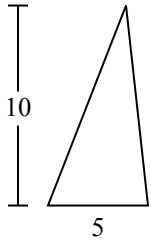
3)



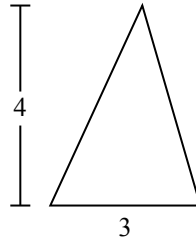
4)



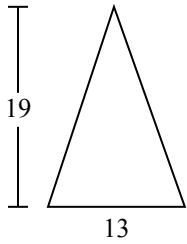
5)



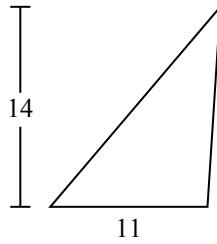
6)



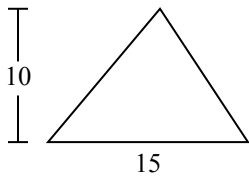
7)



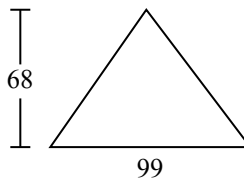
8)



9)



10)

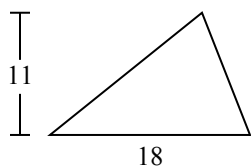


- 1. \_\_\_\_\_
- 2. \_\_\_\_\_
- 3. \_\_\_\_\_
- 4. \_\_\_\_\_
- 5. \_\_\_\_\_
- 6. \_\_\_\_\_
- 7. \_\_\_\_\_
- 8. \_\_\_\_\_
- 9. \_\_\_\_\_
- 10. \_\_\_\_\_



Определите площадь каждого треугольника. Единицы не являются шкалами.

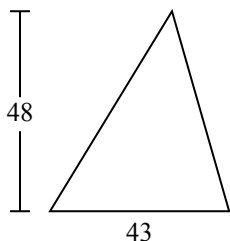
1)



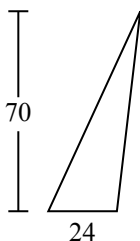
2)



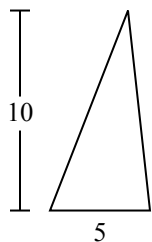
3)



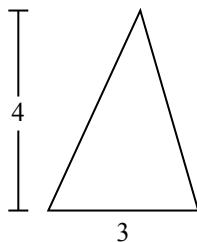
4)



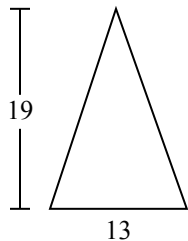
5)



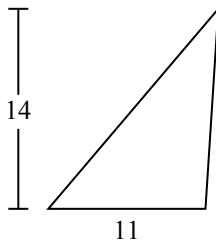
6)



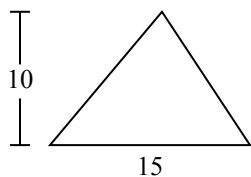
7)



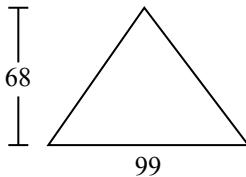
8)



9)



10)



**ОТВЕТЫ**

1. 99

2. 7

3. 1 032

4. 840

5. 25

6. 6

7. 123,5

8. 77

9. 75

10. 3 366

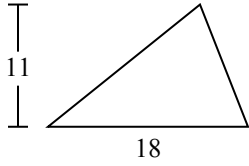


Определите площадь каждого треугольника. Единицы не являются шкалами.

77	6	99	1 032	25
840	75	123,5	7	

**ОТВЕТЫ**

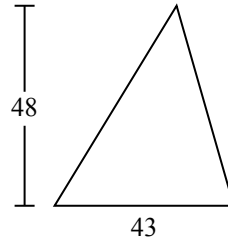
1)



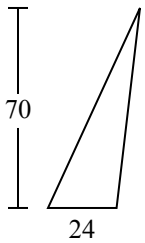
2)



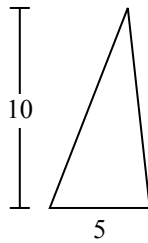
3)



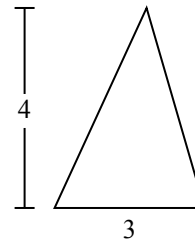
4)



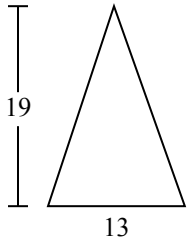
5)



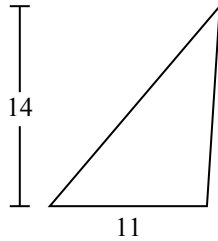
6)



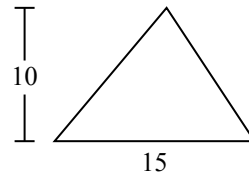
7)



8)



9)



1. \_\_\_\_\_
2. \_\_\_\_\_
3. \_\_\_\_\_
4. \_\_\_\_\_
5. \_\_\_\_\_
6. \_\_\_\_\_
7. \_\_\_\_\_
8. \_\_\_\_\_
9. \_\_\_\_\_