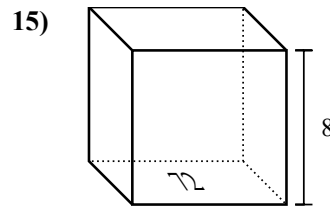
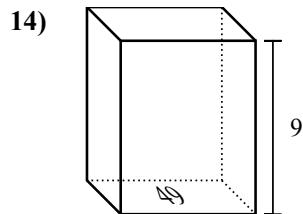
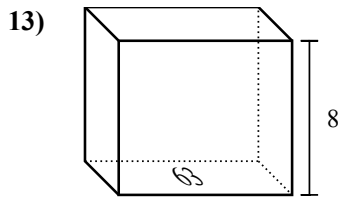
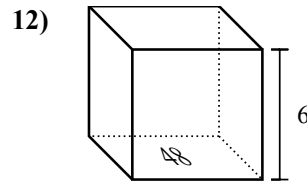
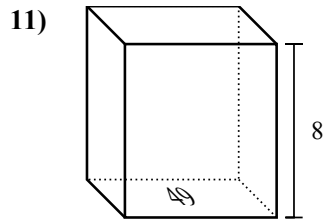
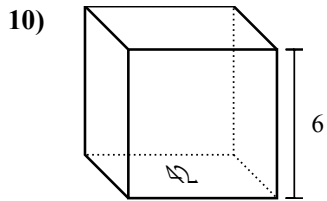
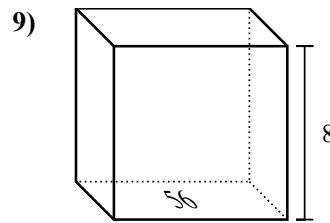
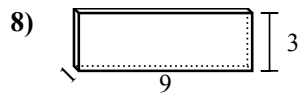
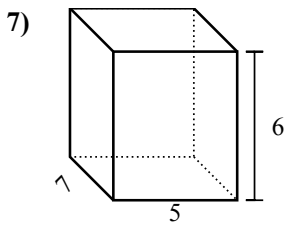
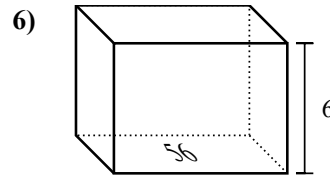
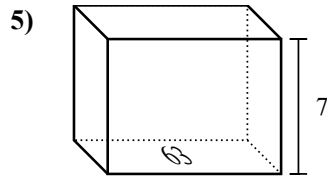
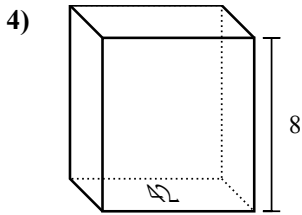
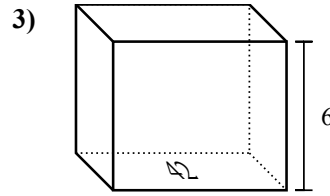
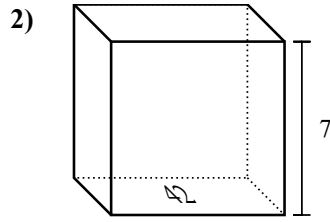
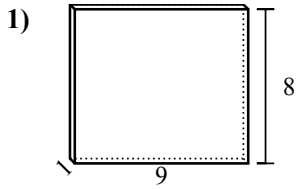




Найдите объем каждой фигуры. Помните, что $V=BH$ и $V=L \times W \times H$



ОТВЕТЫ

1. _____

2. _____

3. _____

4. _____

5. _____

6. _____

7. _____

8. _____

9. _____

10. _____

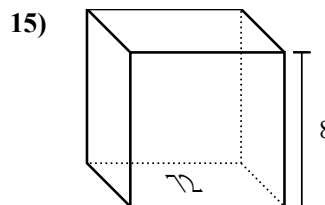
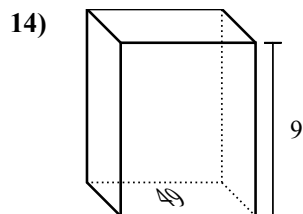
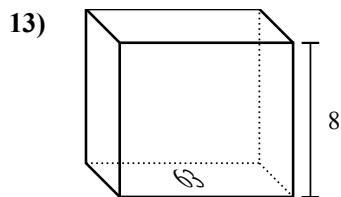
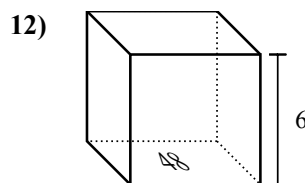
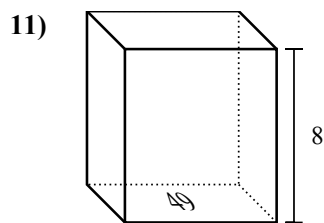
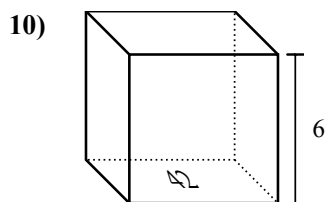
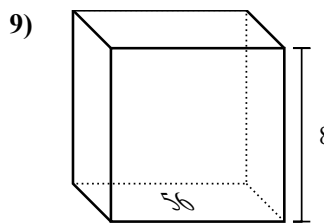
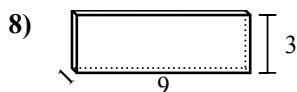
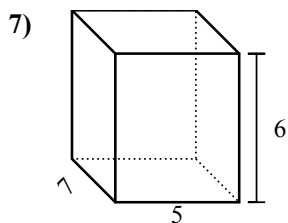
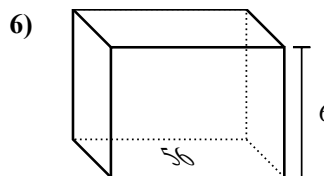
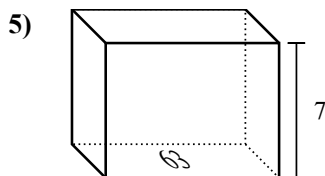
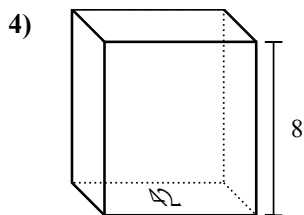
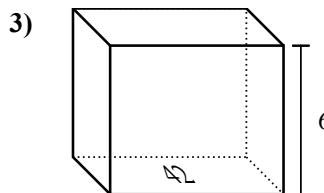
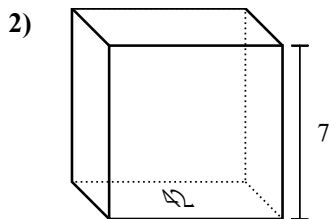
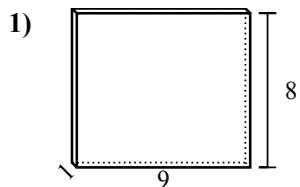
11. _____

12. _____

13. _____

14. _____

15. _____

Найдите объем каждой фигуры. Помните, что $V=BH$ и $V=L \times W \times H$ **ОТВЕТЫ**1. 72 cm³2. 294 cm³3. 252 cm³4. 336 cm³5. 441 cm³6. 336 cm³7. 210 cm³8. 27 cm³9. 448 cm³10. 252 cm³11. 392 cm³12. 288 cm³13. 504 cm³14. 441 cm³15. 576 cm³