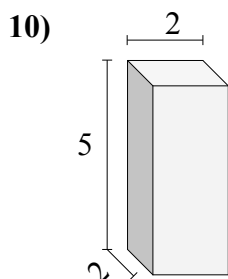
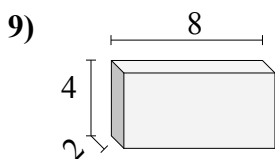
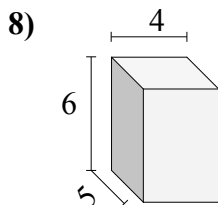
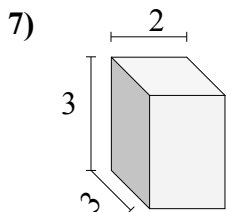
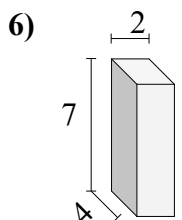
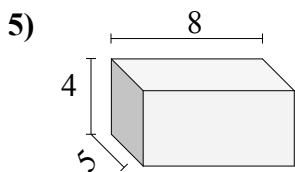
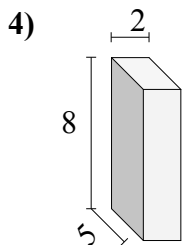
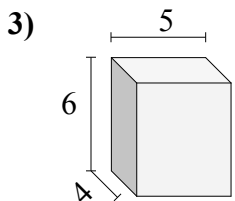
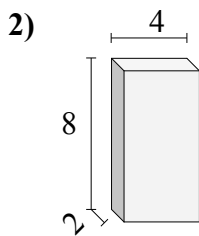
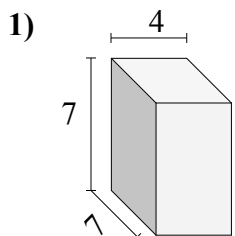




Найдите объем каждого прямоугольного параллелепипеда.

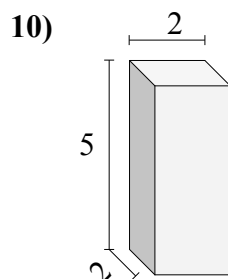
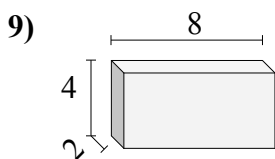
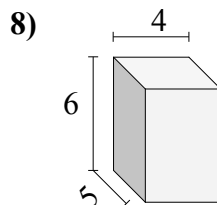
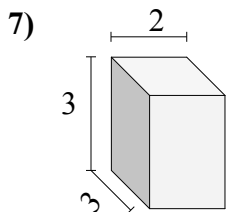
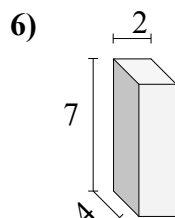
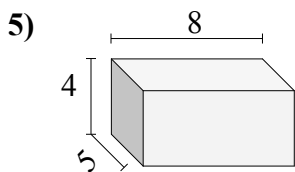
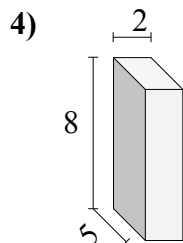
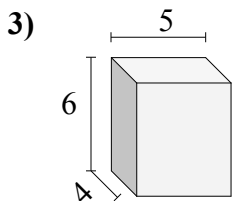
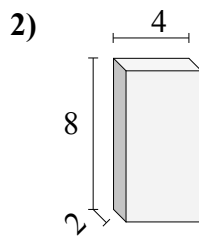
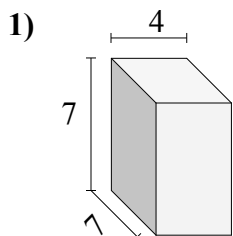


Ответы

- 1. \_\_\_\_\_
- 2. \_\_\_\_\_
- 3. \_\_\_\_\_
- 4. \_\_\_\_\_
- 5. \_\_\_\_\_
- 6. \_\_\_\_\_
- 7. \_\_\_\_\_
- 8. \_\_\_\_\_
- 9. \_\_\_\_\_
- 10. \_\_\_\_\_



Найдите объем каждого прямоугольного параллелепипеда.

**Ответы**1. 1962. 643. 1204. 805. 1606. 567. 188. 1209. 6410. 20