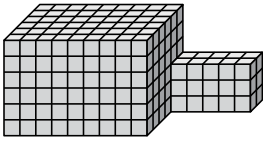





Найдите общий объем каждой фигуры. Размеры указаны в сантиметрах (без учета масштаба).

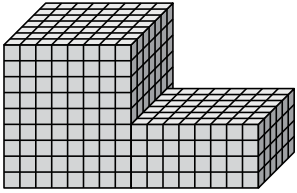
1)



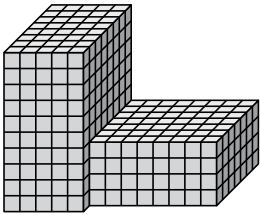
2)



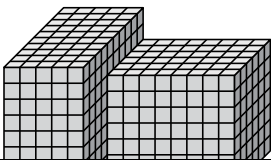
3)



4)



5)



Ответы

1. _____

2. _____

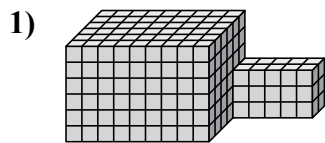
3. _____

4. _____

5. _____

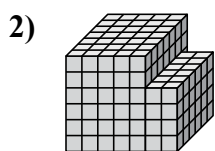


Найдите общий объем каждой фигуры. Размеры указаны в сантиметрах (без учета масштаба).



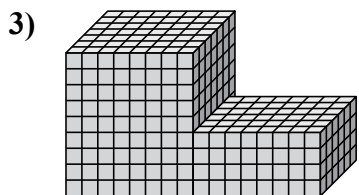
$$9 \times 6 \times 6 = 324$$

$$5 \times 2 \times 3 = 30$$



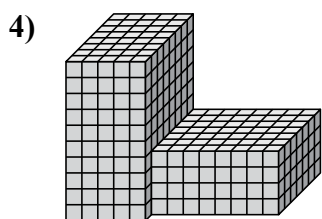
$$5 \times 7 \times 6 = 210$$

$$2 \times 6 \times 4 = 48$$



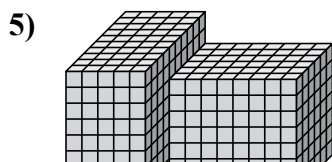
$$8 \times 7 \times 9 = 504$$

$$8 \times 6 \times 4 = 192$$



$$5 \times 8 \times 10 = 400$$

$$8 \times 7 \times 4 = 224$$



$$5 \times 10 \times 9 = 450$$

$$8 \times 6 \times 7 = 336$$

ОТВЕТЫ

1. 354 cm³

2. 258 cm³

3. 696 cm³

4. 624 cm³

5. 786 cm³