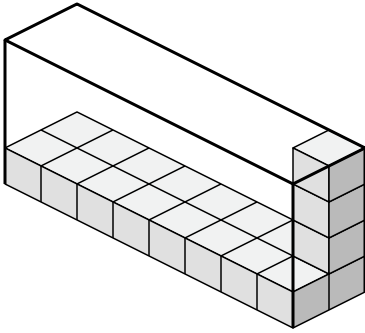


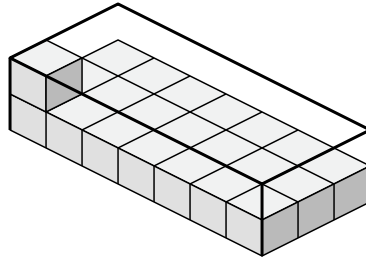


Создайте выражение для определения объема каждой коробки.

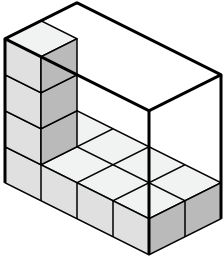
1)



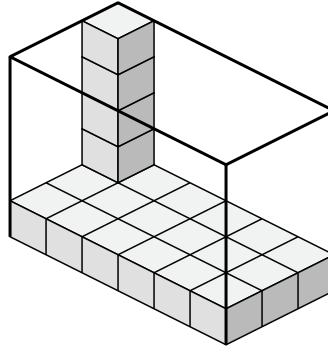
2)



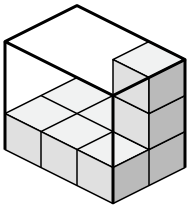
3)



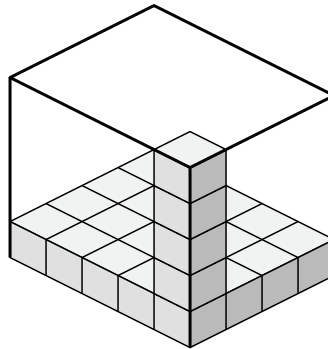
4)



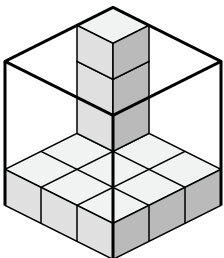
5)



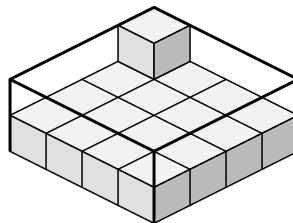
6)



7)



8)



Ответы

1. _____

2. _____

3. _____

4. _____

5. _____

6. _____

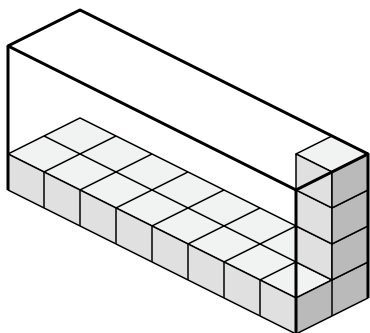
7. _____

8. _____

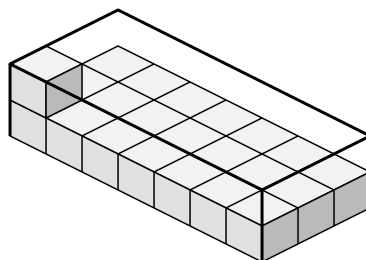


Создайте выражение для определения объема каждой коробки.

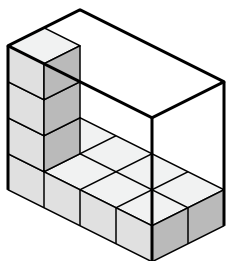
1)



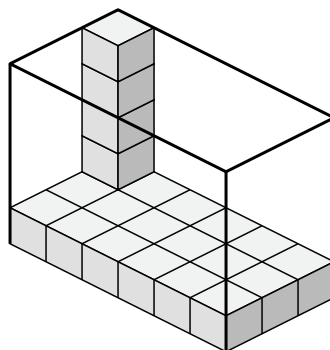
2)



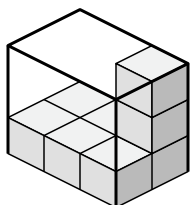
3)



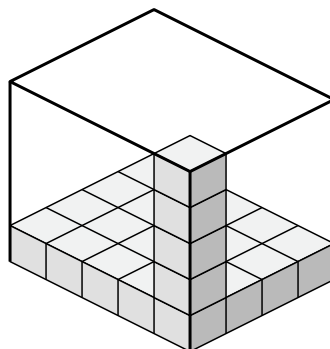
4)



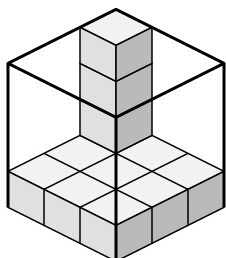
5)



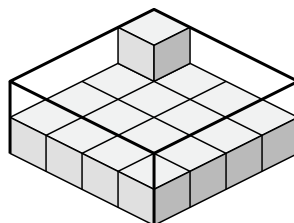
6)



7)



8)

**Ответы**

1. $8 \times 2 \times 4$

2. $7 \times 3 \times 2$

3. $4 \times 2 \times 4$

4. $6 \times 3 \times 5$

5. $3 \times 2 \times 3$

6. $5 \times 4 \times 5$

7. $3 \times 3 \times 4$

8. $4 \times 4 \times 2$