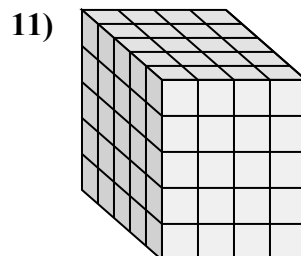
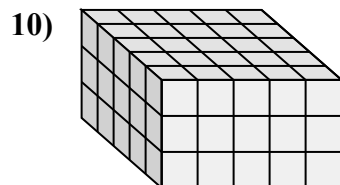
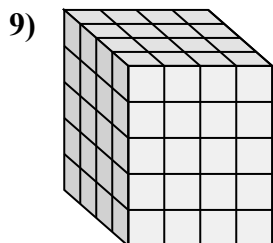
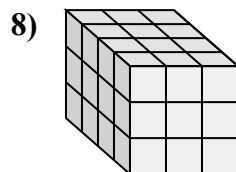
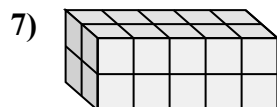
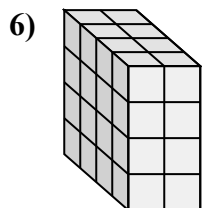
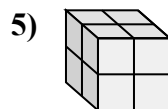
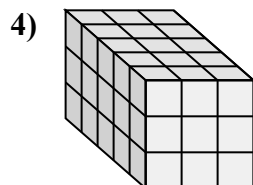
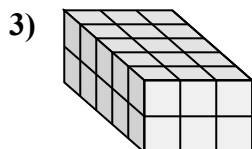
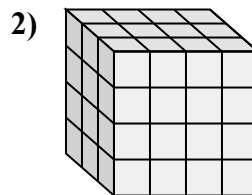
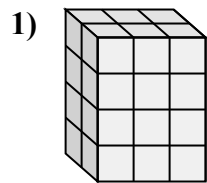
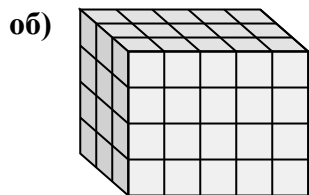




Сопоставьте каждую проблему с уравнением, которое могло бы ее представить.

Ответьте с пропущенным термином и буквой.

**ОТВЕТЫ**об. В, 31. Г, 42. Е, 43. С, 54. К, 35. Н, 26. Г, 327. Д, 58. Л, 369. А, 410. И, 7511. Ж, 5

A. $\underline{\quad} \times 4 \times 5 = 80$

B. $\underline{\quad} \times 5 \times 4 = 60$

C. $\underline{\quad} \times 3 \times 2 = 30$

D. $2 \times \underline{\quad} \times 2 = 20$

E. $3 \times 4 \times \underline{\quad} = 48$

F. $2 \times 3 \times \underline{\quad} = 24$

G. $4 \times 2 \times 4 = \underline{\quad}$

H. $2 \times 2 \times \underline{\quad} = 8$

I. $5 \times 5 \times 3 = \underline{\quad}$

J. $5 \times 4 \times \underline{\quad} = 100$

K. $5 \times \underline{\quad} \times 3 = 45$

L. $4 \times 3 \times 3 = \underline{\quad}$