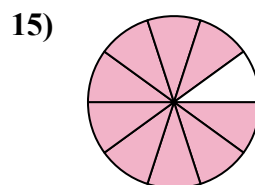
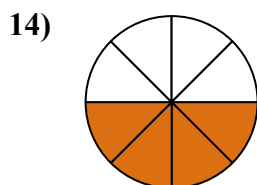
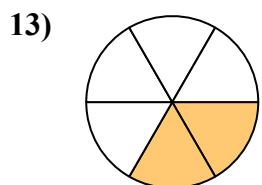
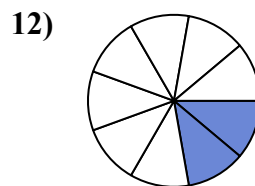
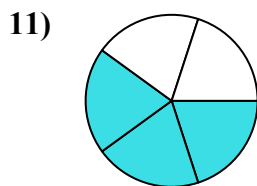
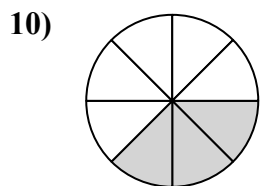
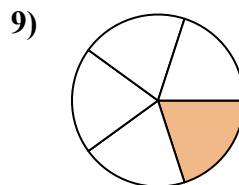
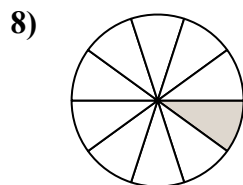
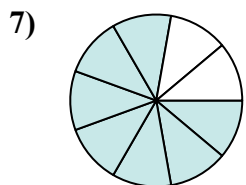
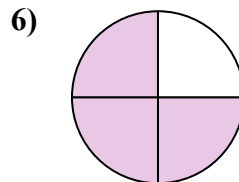
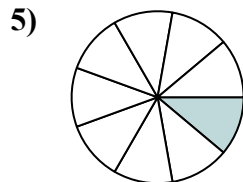
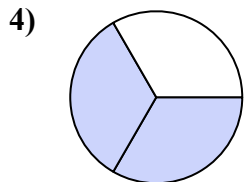
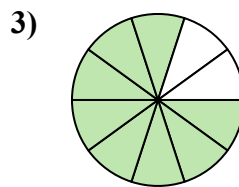
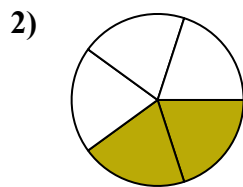
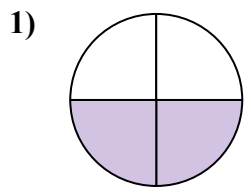




Найдите угол (градусы) закрашенной части круга

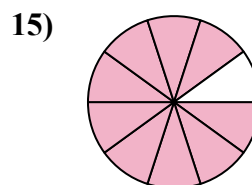
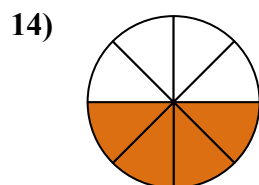
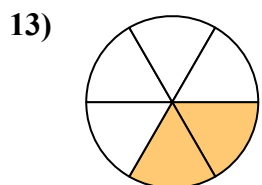
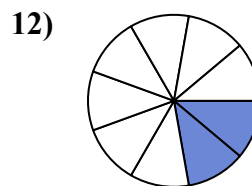
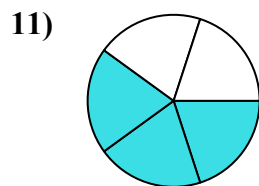
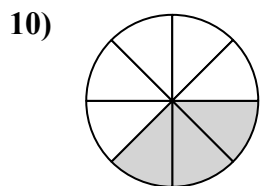
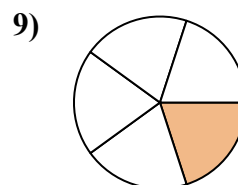
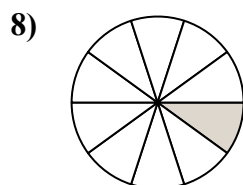
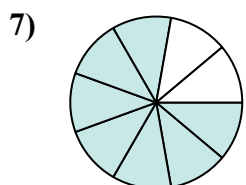
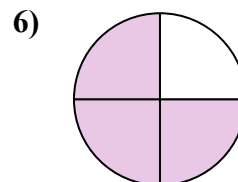
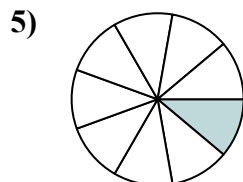
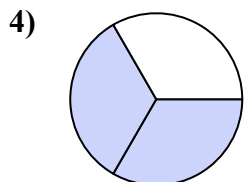
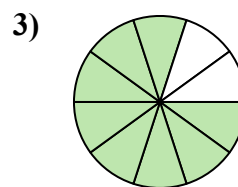
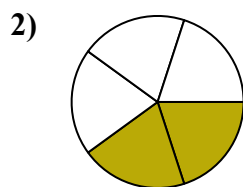
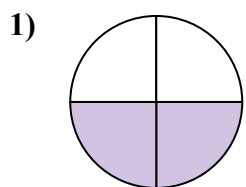


Ответы

1. \_\_\_\_\_
2. \_\_\_\_\_
3. \_\_\_\_\_
4. \_\_\_\_\_
5. \_\_\_\_\_
6. \_\_\_\_\_
7. \_\_\_\_\_
8. \_\_\_\_\_
9. \_\_\_\_\_
10. \_\_\_\_\_
11. \_\_\_\_\_
12. \_\_\_\_\_
13. \_\_\_\_\_
14. \_\_\_\_\_
15. \_\_\_\_\_



Найдите угол (градусы) закрашенной части круга



**ОТВЕТЫ**

1. 180

2. 144

3. 288

4. 240

5. 40

6. 270

7. 280

8. 36

9. 72

10. 135

11. 216

12. 80

13. 120

14. 180

15. 324

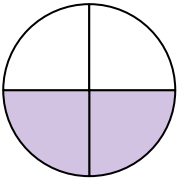


Найдите угол (градусы) закрашенной части круга

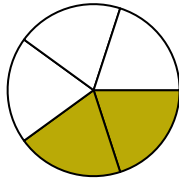
**ОТВЕТЫ**

80	72	280	216	240
135	36	144	40	270
180	288			

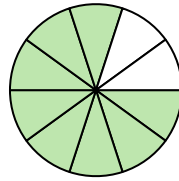
1)



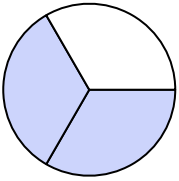
2)



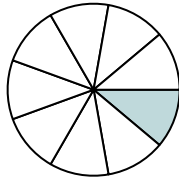
3)



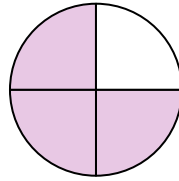
4)



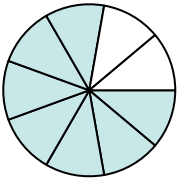
5)



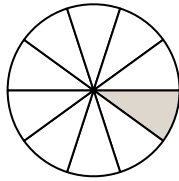
6)



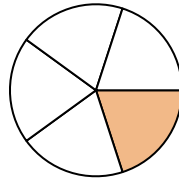
7)



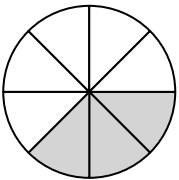
8)



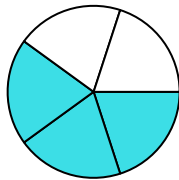
9)



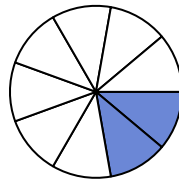
10)



11)



12)



1. \_\_\_\_\_
2. \_\_\_\_\_
3. \_\_\_\_\_
4. \_\_\_\_\_
5. \_\_\_\_\_
6. \_\_\_\_\_
7. \_\_\_\_\_
8. \_\_\_\_\_
9. \_\_\_\_\_
10. \_\_\_\_\_
11. \_\_\_\_\_
12. \_\_\_\_\_