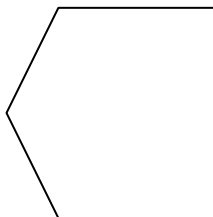


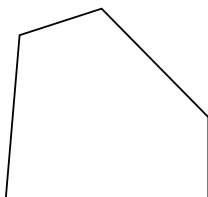
Определите количество острых, тупых и прямых углов внутри каждой фигуры.

ОТВЕТЫ

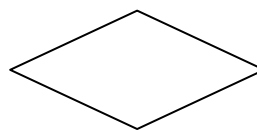
06)



1)



2)



об.	0	3	2
-----	---	---	---

1. _____

2.

3.

4.

5. _____

6. _____

7. _____

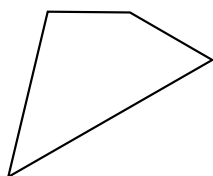
8.

9

10.

11.

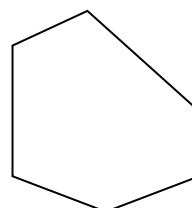
3)




4)



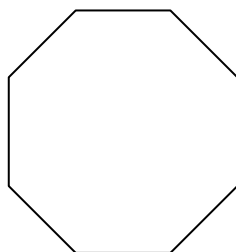
5)



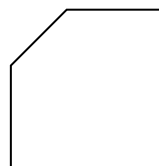
6)



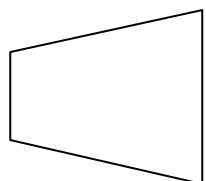
7)



8)



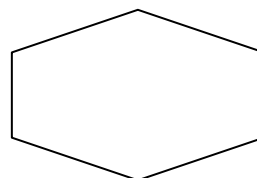
9)



10)



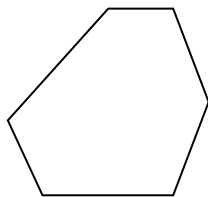
11)



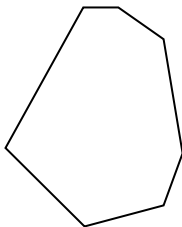


Определите количество острых, тупых и прямых углов внутри каждой фигуры.

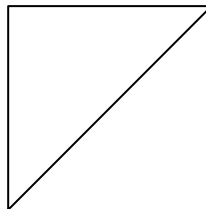
об)



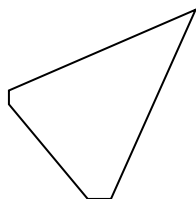
1)



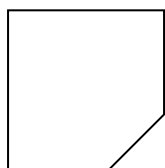
2)



3)



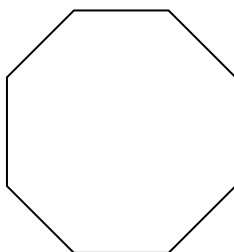
4)



5)



6)



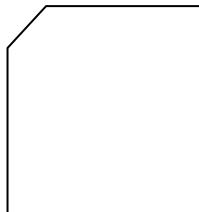
7)



8)



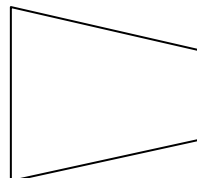
9)



10)



11)

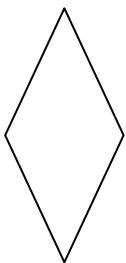
**ОТВЕТЫ**

об.	0	6	0
1.	_____	_____	_____
2.	_____	_____	_____
3.	_____	_____	_____
4.	_____	_____	_____
5.	_____	_____	_____
6.	_____	_____	_____
7.	_____	_____	_____
8.	_____	_____	_____
9.	_____	_____	_____
10.	_____	_____	_____
11.	_____	_____	_____

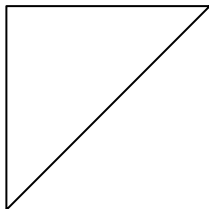
Определите количество острых, тупых и прямых углов внутри каждой фигуры.

ОТВЕТЫ


06)



1)



2)



об. 2 2 0

1. _____

2. _____

3. _____

4. _____

5. _____

6. _____

7. _____

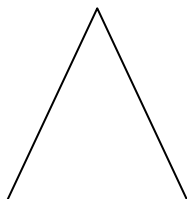
8. _____

9. _____


10. _____

11.

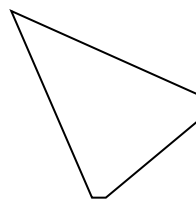
3)



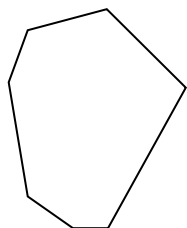
4)



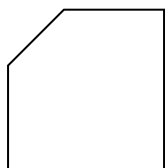
5)



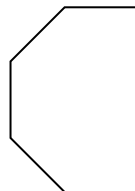
6)



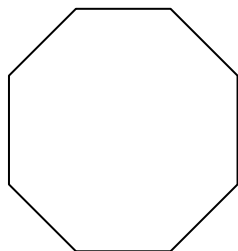
7)



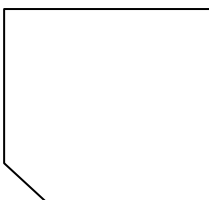
8)



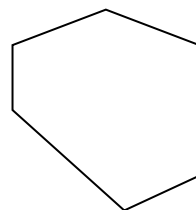
9)



10)



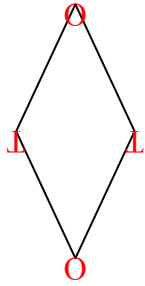
11)



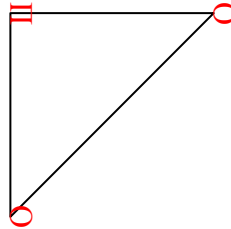


Определите количество острых, тупых и прямых углов внутри каждой фигуры.


об)



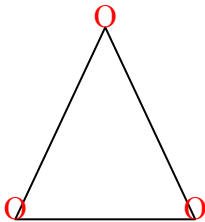
1)



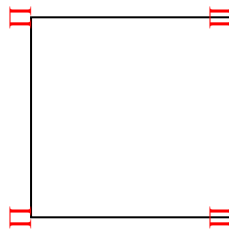
2)



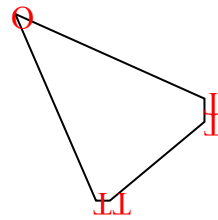
3)



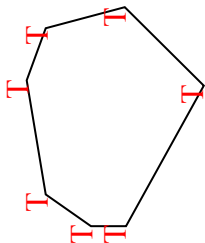
4)



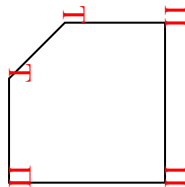
5)



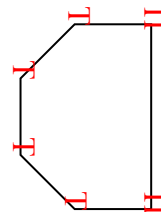
6)



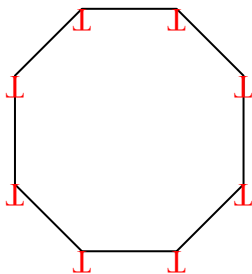
7)



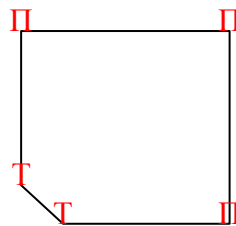
8)



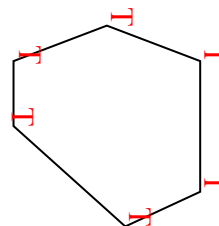
9)



10)



11)

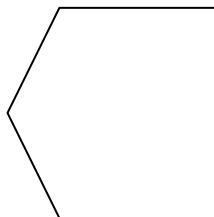
**ОТВЕТЫ**

об.	<u>2</u>	<u>2</u>	<u>0</u>
1.	<u>2</u>	<u>0</u>	<u>1</u>
2.	<u>0</u>	<u>0</u>	<u>4</u>
3.	<u>3</u>	<u>0</u>	<u>0</u>
4.	<u>0</u>	<u>0</u>	<u>4</u>
5.	<u>1</u>	<u>4</u>	<u>0</u>
6.	<u>0</u>	<u>7</u>	<u>0</u>
7.	<u>0</u>	<u>2</u>	<u>3</u>
8.	<u>0</u>	<u>4</u>	<u>2</u>
9.	<u>0</u>	<u>8</u>	<u>0</u>
10.	<u>0</u>	<u>2</u>	<u>3</u>
11.	<u>0</u>	<u>6</u>	<u>0</u>

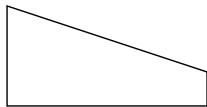


Определите количество острых, тупых и прямых углов внутри каждой фигуры.

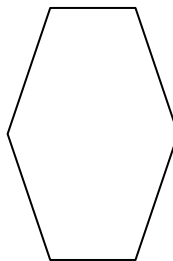
об)



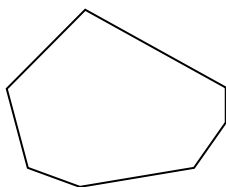
1)




2)



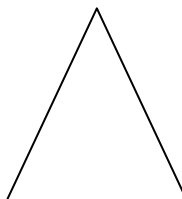
3)



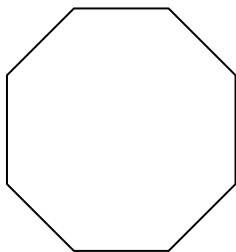
4)



5)



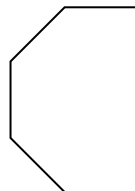
6)



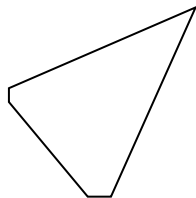
7)




8)



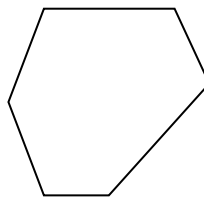
9)



10)



11)

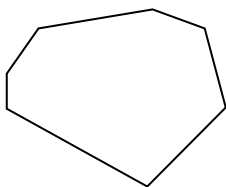
**ОТВЕТЫ**

об.	<u>0</u>	<u>3</u>	<u>2</u>
1.	_____	_____	_____
2.	_____	_____	_____
3.	_____	_____	_____
4.	_____	_____	_____
5.	_____	_____	_____
6.	_____	_____	_____
7.	_____	_____	_____
8.	_____	_____	_____
9.	_____	_____	_____
10.	_____	_____	_____
11.	_____	_____	_____

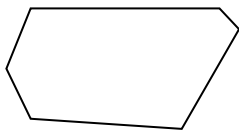
Определите количество острых, тупых и прямых углов внутри каждой фигуры.

ОТВЕТЫ

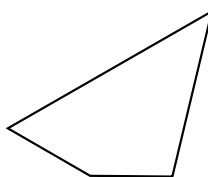
06)



1)



2)



об.	0	7	0
-----	---	---	---

1. _____

2. _____

3. _____

4. _____

5. _____

6. _____

7. _____

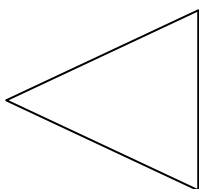
8. _____

9. _____

10. _____

11.

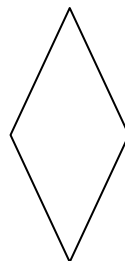
3)




4)



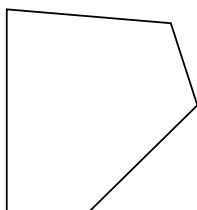
5)



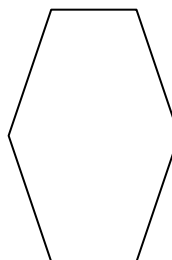
6)



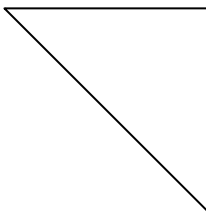
7)



8)



9)



10)



11)

