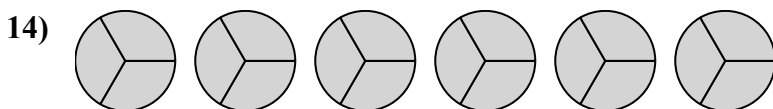
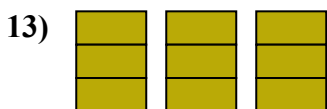
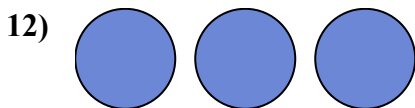
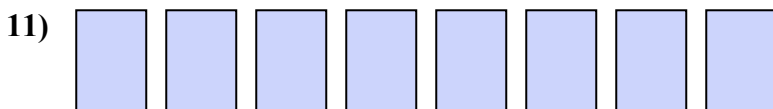
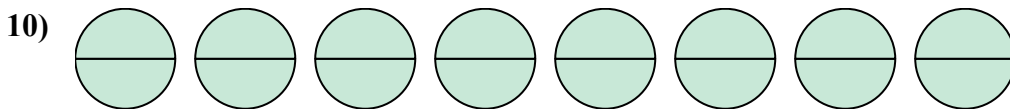
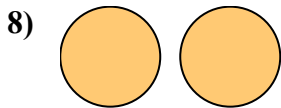
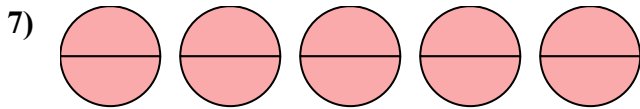
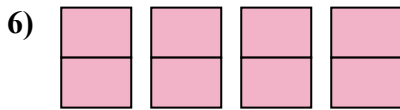
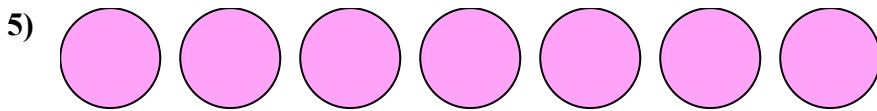
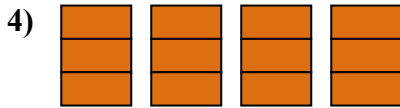
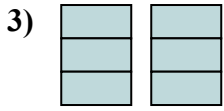
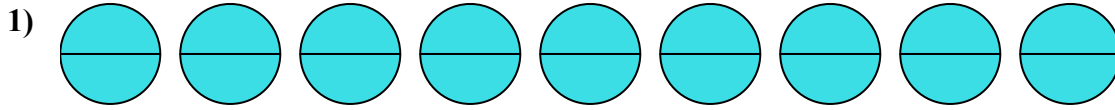




Запишите заштрихованную сумму дробью.



**ОТВЕТЫ**

1. \_\_\_\_\_

2. \_\_\_\_\_

3. \_\_\_\_\_

4. \_\_\_\_\_

5. \_\_\_\_\_

6. \_\_\_\_\_

7. \_\_\_\_\_

8. \_\_\_\_\_

9. \_\_\_\_\_

10. \_\_\_\_\_

11. \_\_\_\_\_

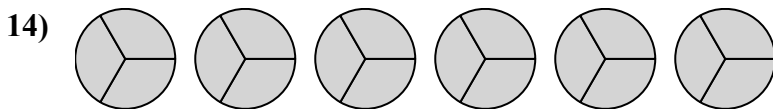
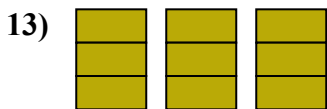
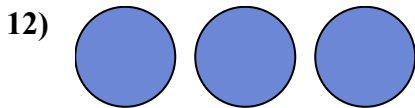
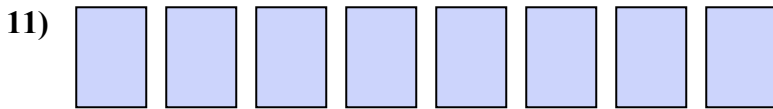
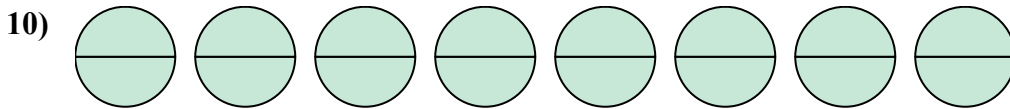
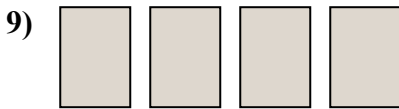
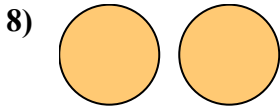
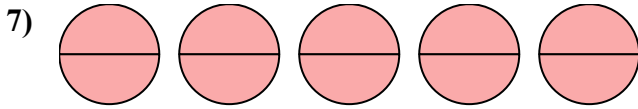
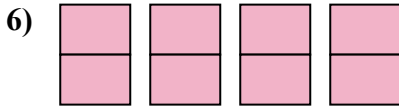

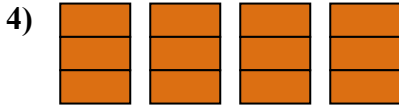
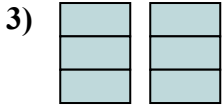
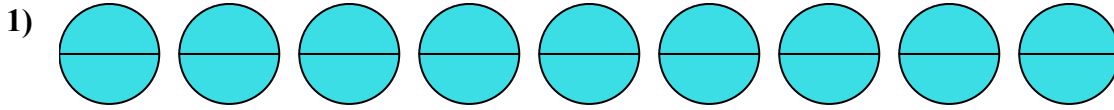
12. \_\_\_\_\_

13. \_\_\_\_\_

14. \_\_\_\_\_



Запишите заштрихованную сумму дробью.

**Ответы**

1.  $\frac{18}{2}$

2.  $\frac{9}{1}$

3.  $\frac{6}{3}$

4.  $\frac{12}{3}$

5.  $\frac{7}{1}$

6.  $\frac{8}{2}$

7.  $\frac{10}{2}$

8.  $\frac{2}{1}$

9.  $\frac{4}{1}$

10.  $\frac{16}{2}$

11.  $\frac{8}{1}$

12.  $\frac{3}{1}$

13.  $\frac{9}{3}$

14.  $\frac{18}{3}$