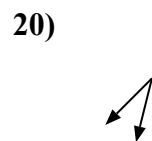
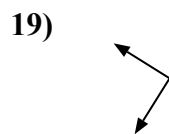
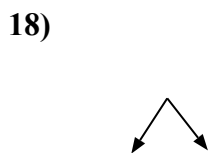
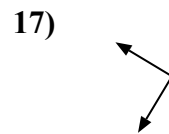
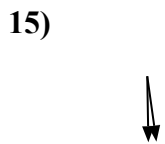
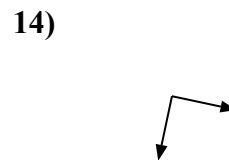
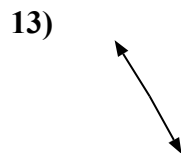
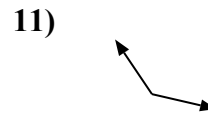
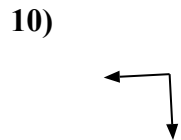
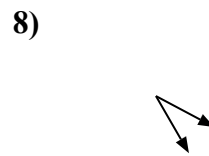
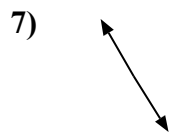
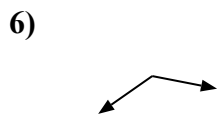
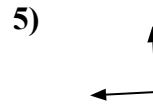
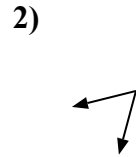
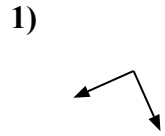
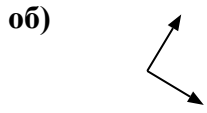




Определите отношение угла, больше, меньше или равно 90.



ОТВЕТЫ

об. равно

1. _____

2. _____

3. _____

4. _____

5. _____

6. _____

7. _____

8. _____

9. _____

10. _____

11. _____

12. _____

13. _____

14. _____

15. _____

16. _____

17. _____

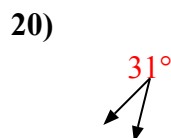
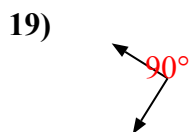
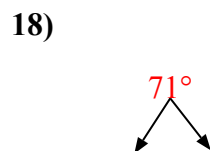
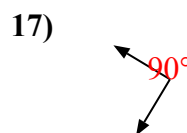
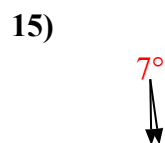
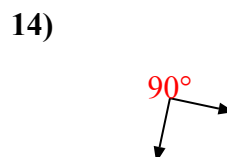
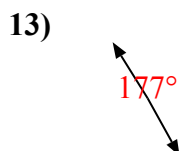
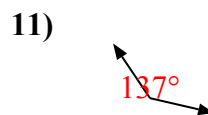
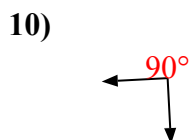
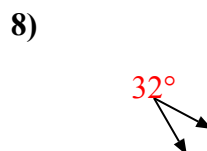
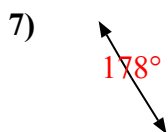
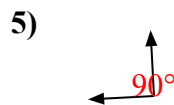
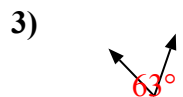
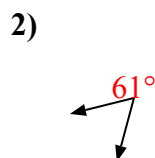
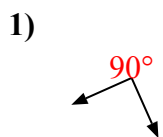
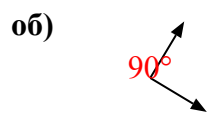
18. _____

19. _____

20. _____



Определите отношение угла, больше, меньше или равно 90.



Ответы

об. равно

1. равно

2. меньше

3. меньше

4. равно

5. равно

6. больше

7. больше

8. меньше

9. больше

10. равно

11. больше

12. меньше

13. больше

14. равно

15. меньше

16. больше

17. равно

18. меньше

19. равно

20. меньше