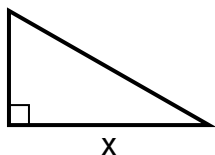
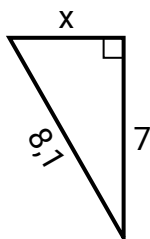


**Найдите значение X.**

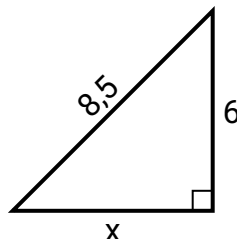
1) площадь = 14 u^2



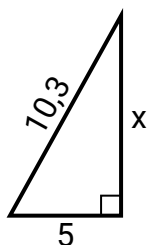
2) площадь = 14 u^2



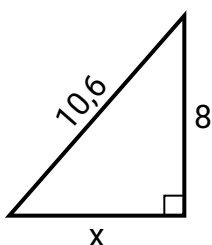
3) площадь = 18 u^2



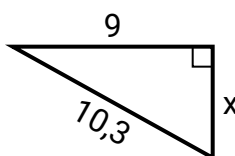
4) площадь = 22.5 u^2



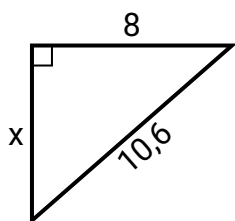
5) площадь = 28 u^2



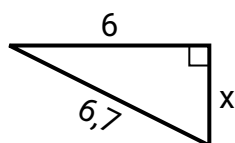
6) площадь = 22.5 u^2



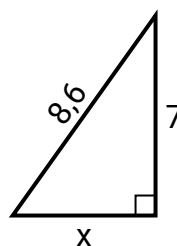
7) площадь = 28 u^2



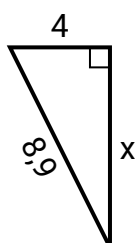
8) площадь = 9 u^2



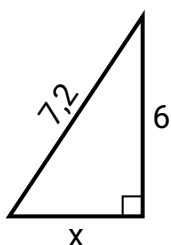
9) площадь = 17.5 u^2



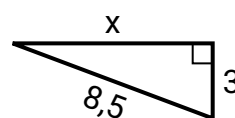
10) площадь = 16 u^2



11) площадь = 12 u^2



12) площадь = 12 u^2

**Ответы**

1. _____

2. _____

3. _____

4. _____

5. _____

6. _____

7. _____

8. _____

9. _____

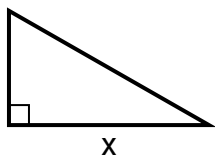
10. _____

11. _____

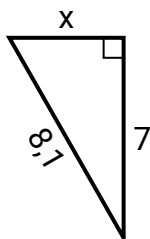
12. _____

Найдите значение X .

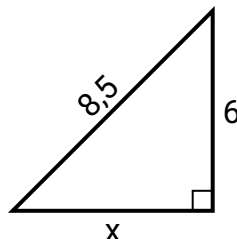
1) площадь = 14 у^2



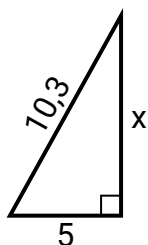
2) площадь = 14 у^2



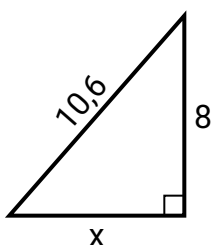
3) площадь = 18 у^2



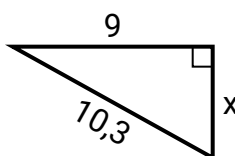
4) площадь = 22.5 у^2



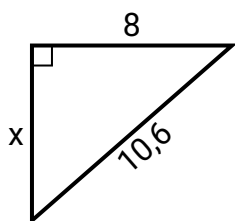
5) площадь = 28 у^2



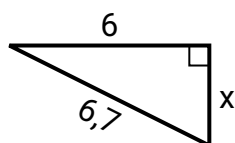
6) площадь = 22.5 у^2



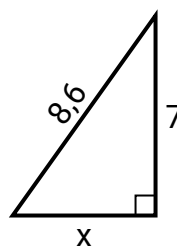
7) площадь = 28 у^2



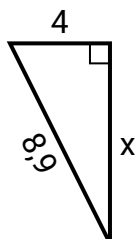
8) площадь = 9 у^2



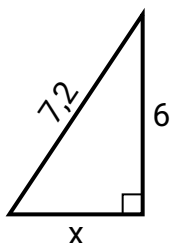
9) площадь = 17.5 у^2



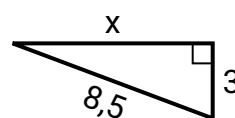
10) площадь = 16 у^2



11) площадь = 12 у^2



12) площадь = 12 у^2

**Ответы**1. 72. 43. 64. 95. 76. 57. 78. 39. 510. 811. 412. 8