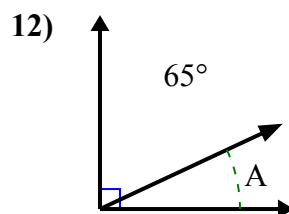
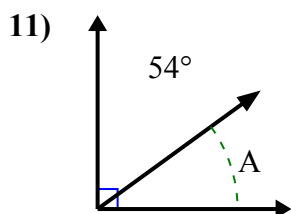
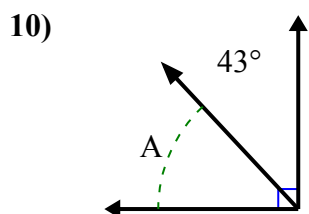
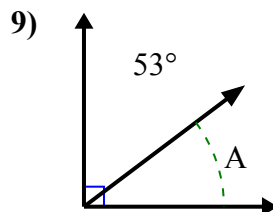
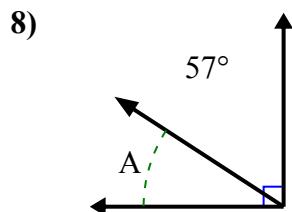
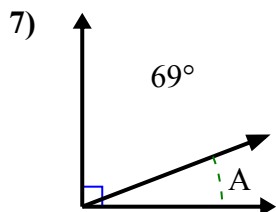
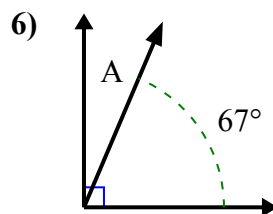
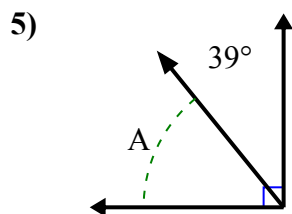
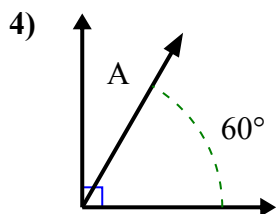
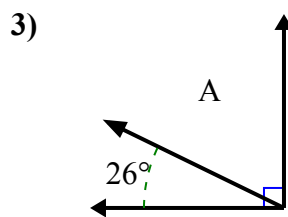
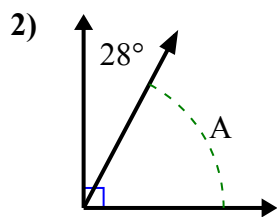
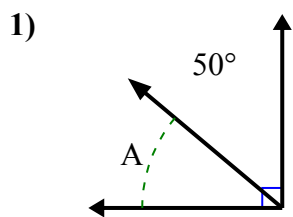




Найдите значение «А» в наборе дополнительных углов.

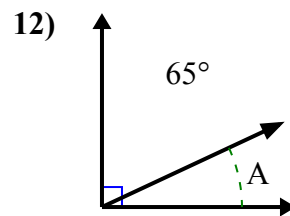
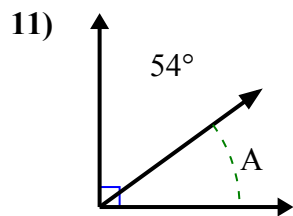
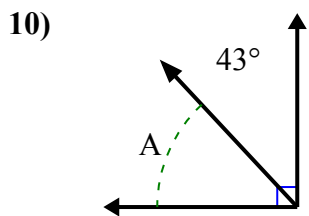
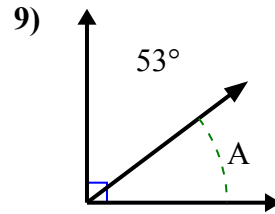
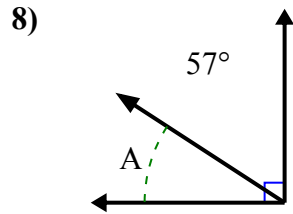
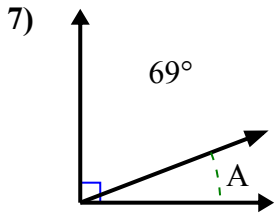
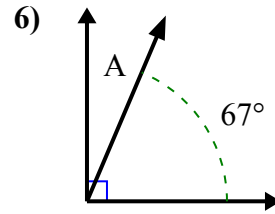
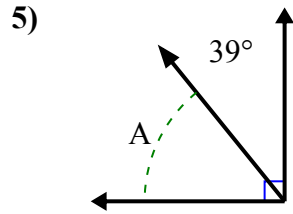
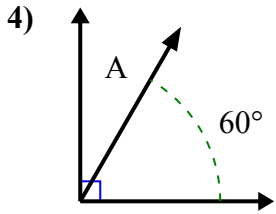
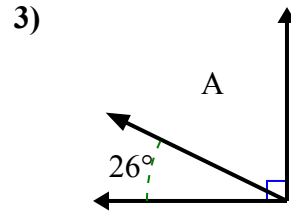
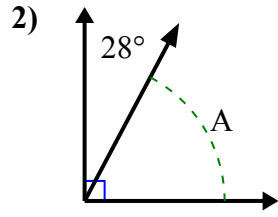
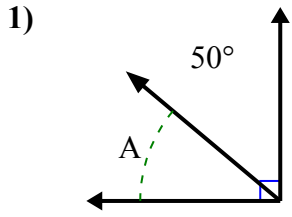


**ОТВЕТЫ**

1. \_\_\_\_\_
2. \_\_\_\_\_
3. \_\_\_\_\_
4. \_\_\_\_\_
5. \_\_\_\_\_
6. \_\_\_\_\_
7. \_\_\_\_\_
8. \_\_\_\_\_
9. \_\_\_\_\_
10. \_\_\_\_\_
11. \_\_\_\_\_
12. \_\_\_\_\_



Найдите значение «А» в наборе дополнительных углов.



**ОТВЕТЫ**

1. 40°

2. 62°

3. 64°

4. 30°

5. 51°

6. 23°

7. 21°

8. 33°

9. 37°

10. 47°

11. 36°

12. 25°