



Решите каждую задачу.

1) $5 + 0 = \underline{\quad}$

2) $1 + 3 = \underline{\quad}$

3) $1 + 2 = \underline{\quad}$

4) $4 + 0 = \underline{\quad}$

5) $1 + 1 = \underline{\quad}$

6) $3 + 0 = \underline{\quad}$

7) $2 + 3 = \underline{\quad}$

8) $3 + 1 = \underline{\quad}$

9) $5 - 5 = \underline{\quad}$

10) $3 - 2 = \underline{\quad}$

11) $5 - 4 = \underline{\quad}$

12) $2 - 1 = \underline{\quad}$

13) $1 - 1 = \underline{\quad}$

14) $3 - 3 = \underline{\quad}$

15) $4 - 4 = \underline{\quad}$

16) $4 - 3 = \underline{\quad}$

Ответы

1. _____

2. _____

3. _____

4. _____

5. _____

6. _____

7. _____

8. _____

9. _____

10. _____

11. _____

12. _____

13. _____

14. _____

15. _____

16. _____



Решите каждую задачу.

1) $5 + 0 = \underline{5}$

2) $1 + 3 = \underline{4}$

3) $1 + 2 = \underline{3}$

4) $4 + 0 = \underline{4}$

5) $1 + 1 = \underline{2}$

6) $3 + 0 = \underline{3}$

7) $2 + 3 = \underline{5}$

8) $3 + 1 = \underline{4}$

9) $5 - 5 = \underline{0}$

10) $3 - 2 = \underline{1}$

11) $5 - 4 = \underline{1}$

12) $2 - 1 = \underline{1}$

13) $1 - 1 = \underline{0}$

14) $3 - 3 = \underline{0}$

15) $4 - 4 = \underline{0}$


16) $4 - 3 = \underline{1}$

Ответы1. 52. 43. 34. 45. 26. 37. 58. 49. 010. 111. 112. 113. 014. 015. 016. 1




Решите каждую задачу.

1) $5 + 0 = \underline{\quad}$



2) $1 + 3 = \underline{\quad}$



3) $1 + 2 = \underline{\quad}$



4) $4 + 0 = \underline{\quad}$



5) $1 + 1 = \underline{\quad}$



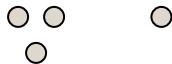
6) $3 + 0 = \underline{\quad}$



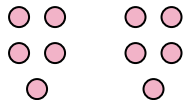
7) $2 + 3 = \underline{\quad}$



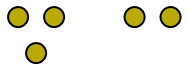
8) $3 + 1 = \underline{\quad}$



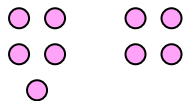
9) $5 - 5 = \underline{\quad}$



10) $3 - 2 = \underline{\quad}$



11) $5 - 4 = \underline{\quad}$



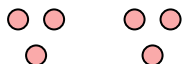
12) $2 - 1 = \underline{\quad}$



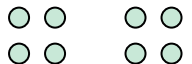
13) $1 - 1 = \underline{\quad}$



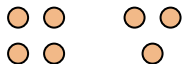
14) $3 - 3 = \underline{\quad}$



15) $4 - 4 = \underline{\quad}$



16) $4 - 3 = \underline{\quad}$

Ответы

1. _____

2. _____

3. _____

4. _____

5. _____

6. _____

7. _____

8. _____

9. _____

10. _____

11. _____

12. _____

13. _____

14. _____

15. _____

16. _____