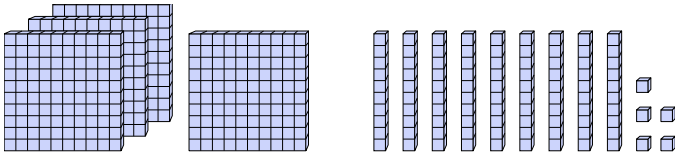




Найдите значение, которое представлено блоками.

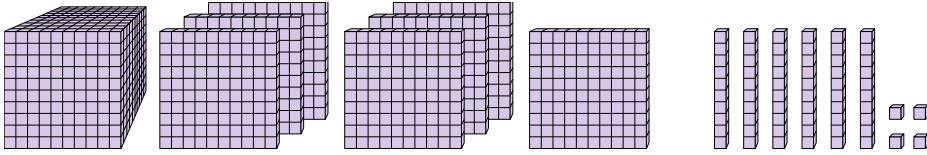
Ответы

1)



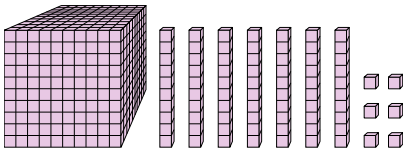
1. _____

2)



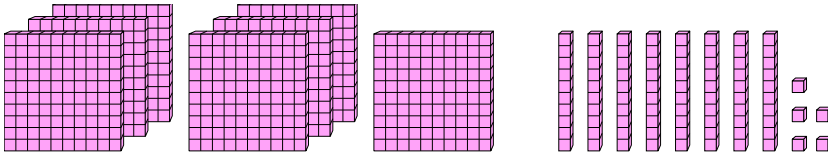
2. _____

3)



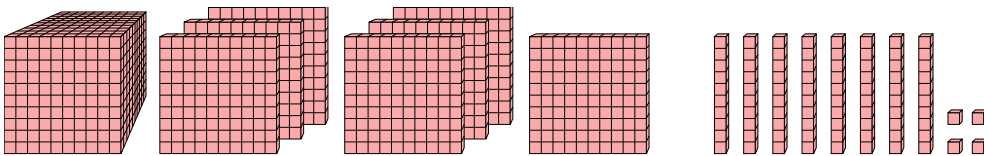
3. _____

4)



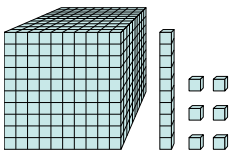
4. _____

5)



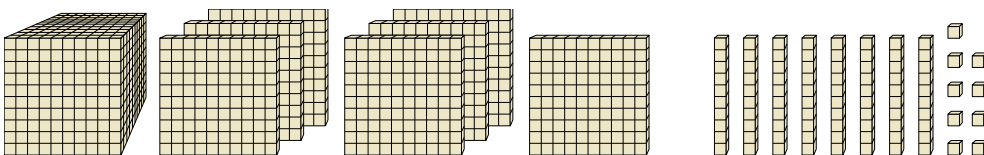
5. _____

6)



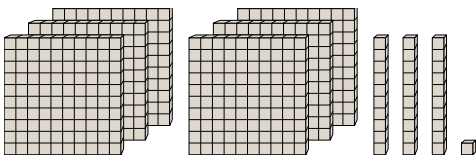
6. _____

7)



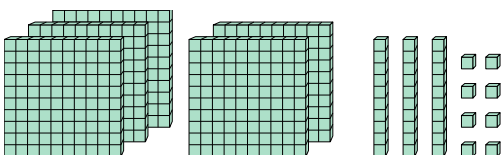
7. _____

8)



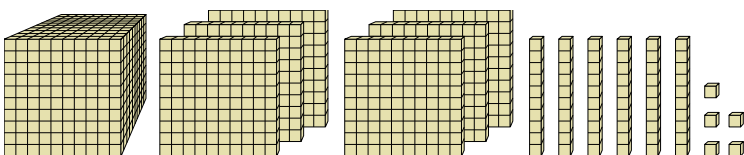
8. _____

9)



9. _____

10)



10. _____



Найдите значение, которое представлено блоками.

1)

2)

3)

4)

5)

6)

7)

8)

9)

10)

Ответы

1. 495
2. 1 764
3. 1 076
4. 785
5. 1 784
6. 1 016
7. 1 789
8. 631
9. 538
10. 1 665