
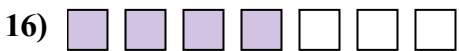
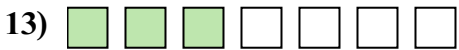
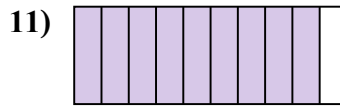
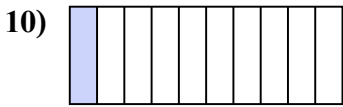
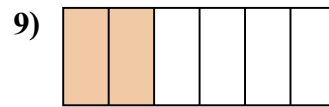
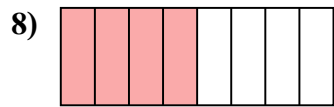
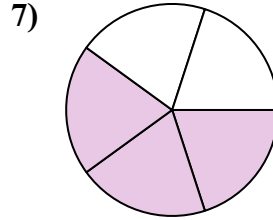
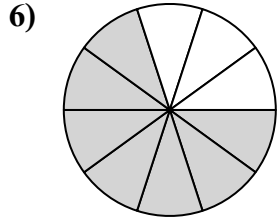
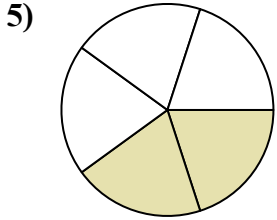

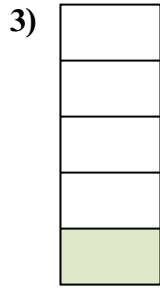
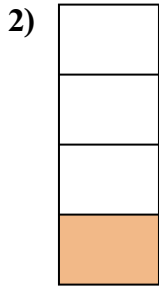
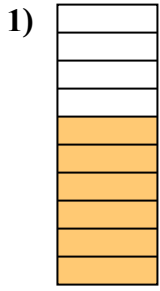




Определите, закрашенная часть "больше", "меньше" или "равна" половине.



**ОТВЕТЫ**

1. \_\_\_\_\_

2. \_\_\_\_\_

3. \_\_\_\_\_

4. \_\_\_\_\_

5. \_\_\_\_\_

6. \_\_\_\_\_

7. \_\_\_\_\_

8. \_\_\_\_\_

9. \_\_\_\_\_

10. \_\_\_\_\_

11. \_\_\_\_\_

12. \_\_\_\_\_

13. \_\_\_\_\_

14. \_\_\_\_\_

15. \_\_\_\_\_

16. \_\_\_\_\_

17. \_\_\_\_\_


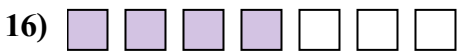
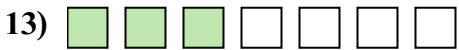
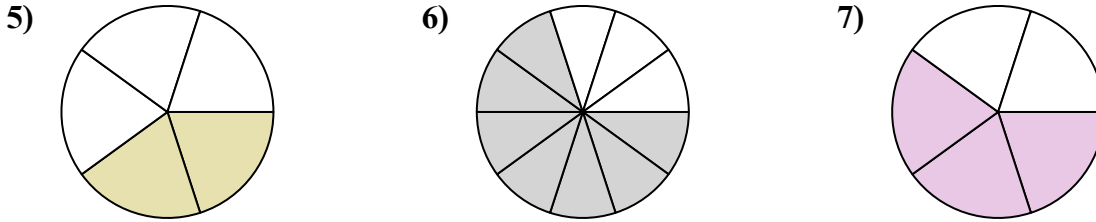
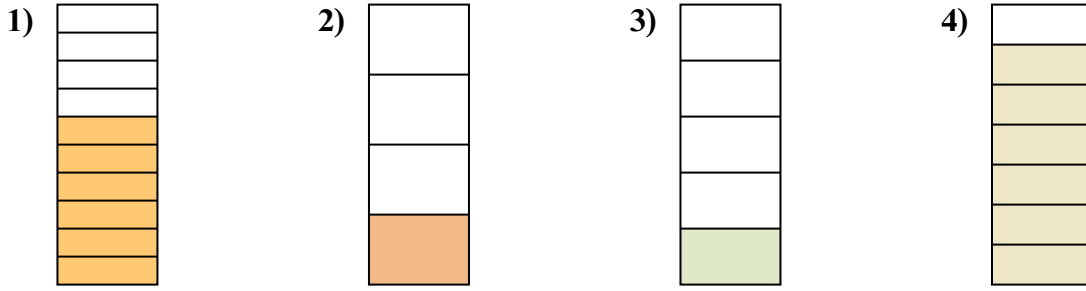
18. \_\_\_\_\_

19. \_\_\_\_\_

20. \_\_\_\_\_



Определите, закрашенная часть "больше", "меньше" или "равна" половине.



**Ответы**

1. больше

2. меньше

3. меньше

4. больше

5. меньше

6. больше

7. больше

8. равна

9. меньше

10. меньше

11. больше

12. меньше

13. меньше

14. меньше

15. меньше

16. больше

17. больше

18. меньше

19. равна

20. больше